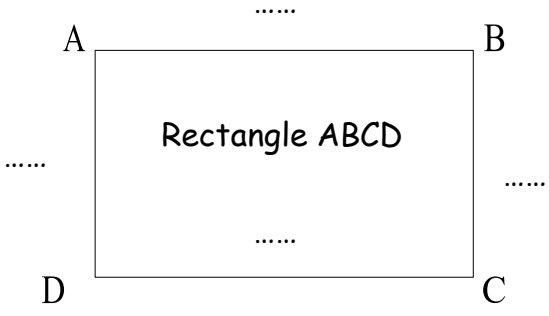
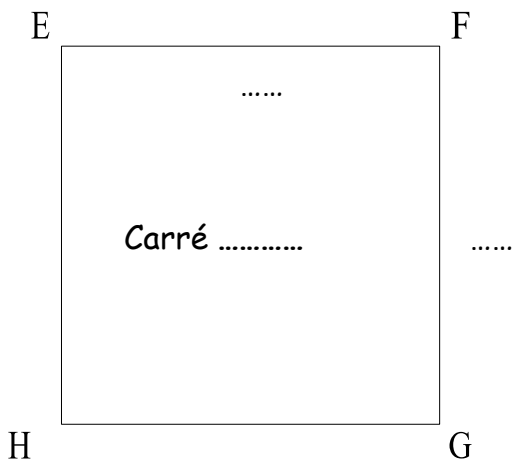


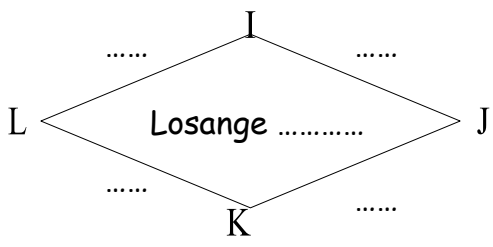
**Entraînement** : Complète les cadres avec les mesures réelles. Calcule le périmètre de chaque figure



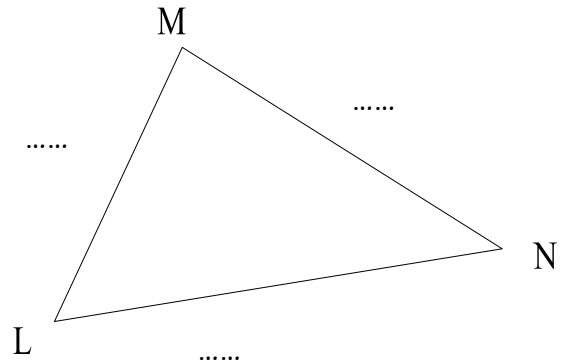
Périmètre du rectangle ABCD  
 = AB + BC + CD + DA  
 = 5 + ..... + ..... + .....  
 = ..... cm = ..... mm



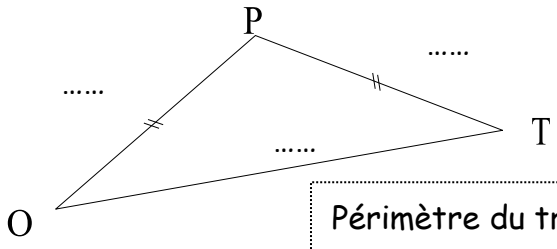
Périmètre du carré EFGH  
 = EF + FG + ..... + .....  
 = ..... + ..... + ..... + .....  
 = ..... cm = ..... mm



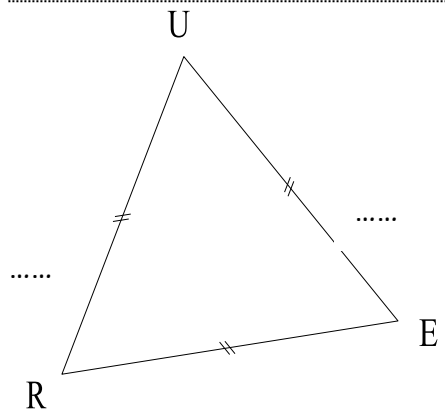
Périmètre du losange .....  
 = IJ + ..... + ..... + .....  
 = ..... + ..... + ..... + .....  
 = ..... cm = ..... mm



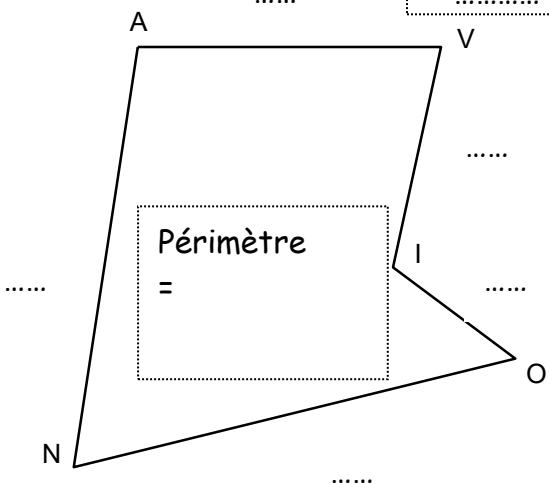
Périmètre du triangle MLN  
 = MN + ..... + .....  
 = ..... + ..... + .....  
 = ..... cm = ..... mm



Périmètre du triangle TOP  
 = ..... + ..... + .....  
 = ..... + ..... + .....  
 = ..... cm = ..... mm



Périmètre du triangle RUE  
 = ..... + ..... + .....  
 = ..... + ..... + .....  
 = ..... cm = ..... mm



Périmètre  
 =

