


Number Line Graphing - Decimals

Name: _____ Date: _____

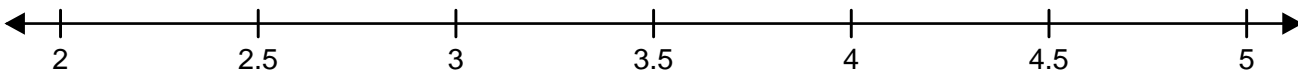


Graph each set of decimals on the number lines.

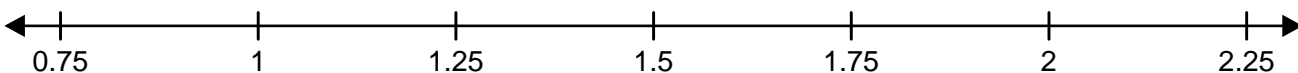
(1) { 4.9, 4.5, 4.1, 4.3, 4.7 }



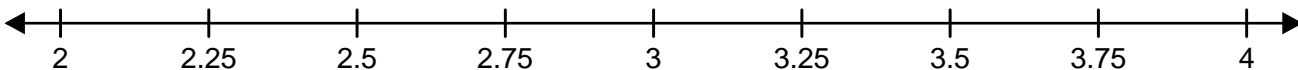
(2) { 3.9, 2.1, 4.8, 4.6, 2.6 }




(3) { 1.8, 1.3, 0.8, 1.2, 1.6 }



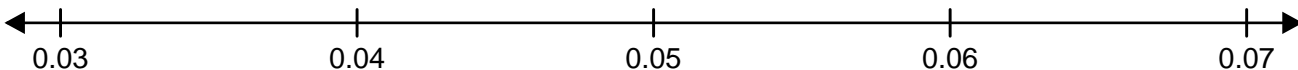
(4) { 2.4, 2.7, 3.8, 3.3, 3.6 }



(5) { 0.075, 0.048, 0.058, 0.028, 0.015 }



(6) { 0.058, 0.063, 0.033, 0.045, 0.048 }



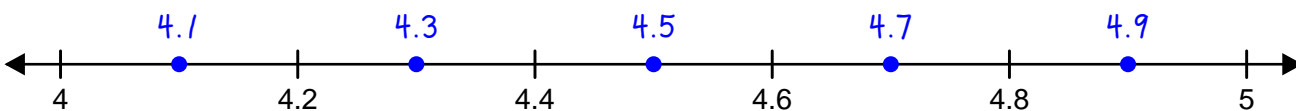
Number Line Graphing - Decimals

ANSWER KEY

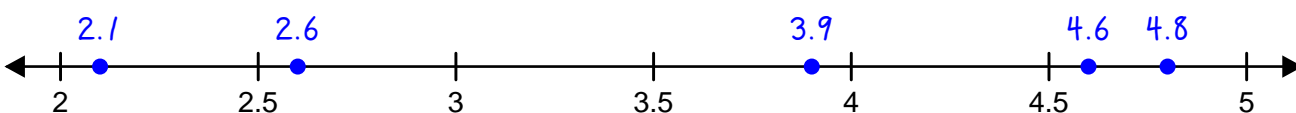


Graph each set of decimals on the number lines.

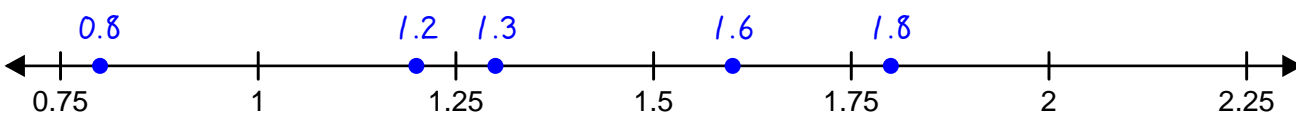
(1) $\{ 4.9, 4.5, 4.1, 4.3, 4.7 \}$



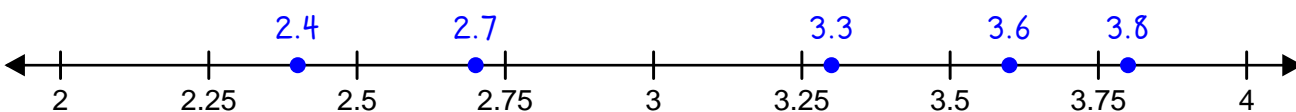
(2) $\{ 3.9, 2.1, 4.8, 4.6, 2.6 \}$



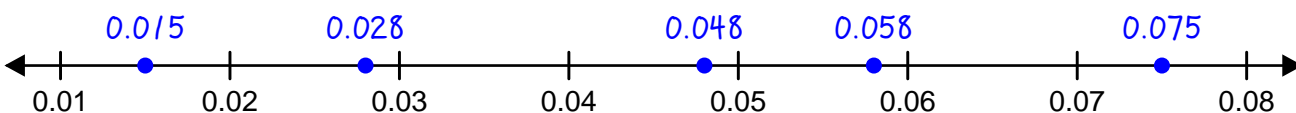
(3) $\{ 1.8, 1.3, 0.8, 1.2, 1.6 \}$



(4) $\{ 2.4, 2.7, 3.8, 3.3, 3.6 \}$



(5) $\{ 0.075, 0.048, 0.058, 0.028, 0.015 \}$



(6) $\{ 0.058, 0.063, 0.033, 0.045, 0.048 \}$

