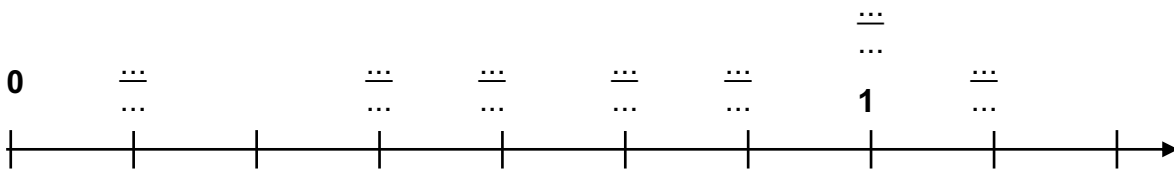
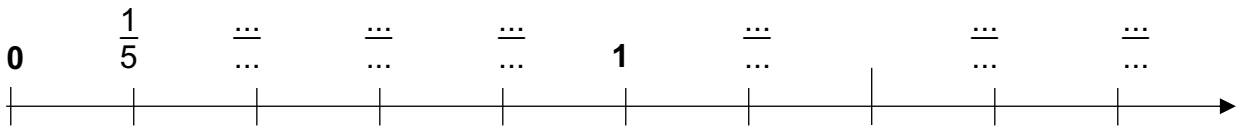
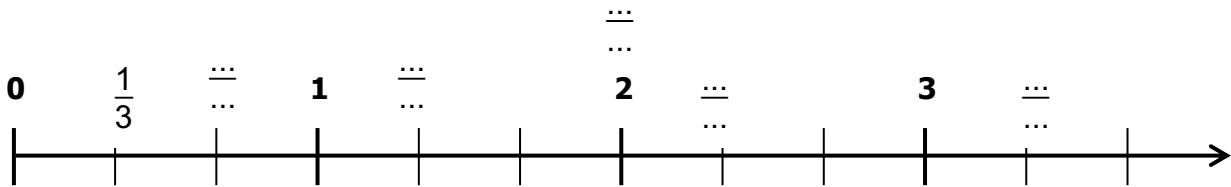
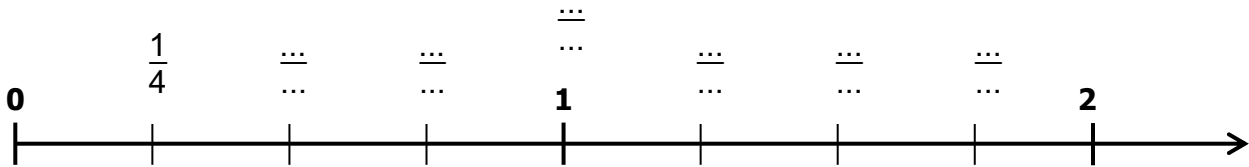
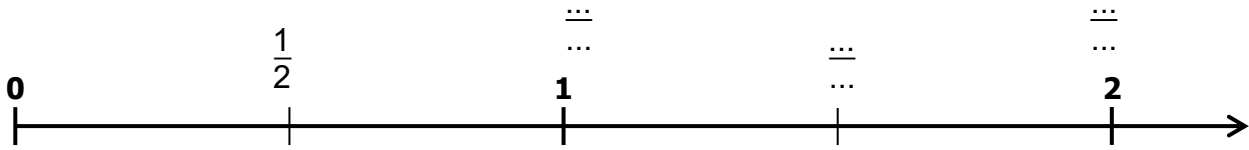


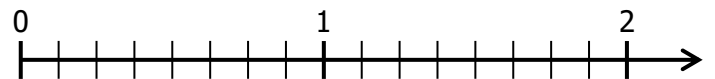
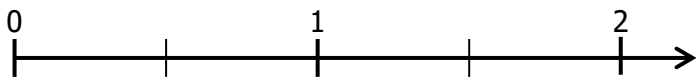
Entraînement 1 Complète les graduations par les bonnes fractions :



Entraînement 2 Place sur les axes gradués, les nombres :

$$\frac{3}{2} ; \frac{4}{2} ; \frac{2}{2}$$

$$\frac{7}{8} ; \frac{4}{8} ; \frac{16}{8}$$



$$\frac{3}{8} ; \frac{13}{8} ; \frac{3}{4} ; \frac{3}{2}$$

$$\frac{2}{3} ; \frac{9}{3} ; \frac{7}{3}$$

