

Learn the 50 STATES

3RD Grade

The United States of America



Table of Contents

Learn the 50 States

The United States of America #1
Name the States 1 *
Name the States 2 *
States and Capitals: Road Trip!
Food Road Trip Across the U.S.A.
Color the States
What's That State? 1
What's That State? 2
Make It Short! *
Scrambled States! *
Extreme State Facts *
Notable State Facts *
Going to the Coast *
Road Trip Across the U.S.A.
Name These States: The West
Name These States: The Midwest
Name These States: The South
Name These States: The East Coast
Launch Coordinates *
State Coordinates *
State Scavenger Hunt *
Name All 50 States
The United States of America #2

Certificate of Completion

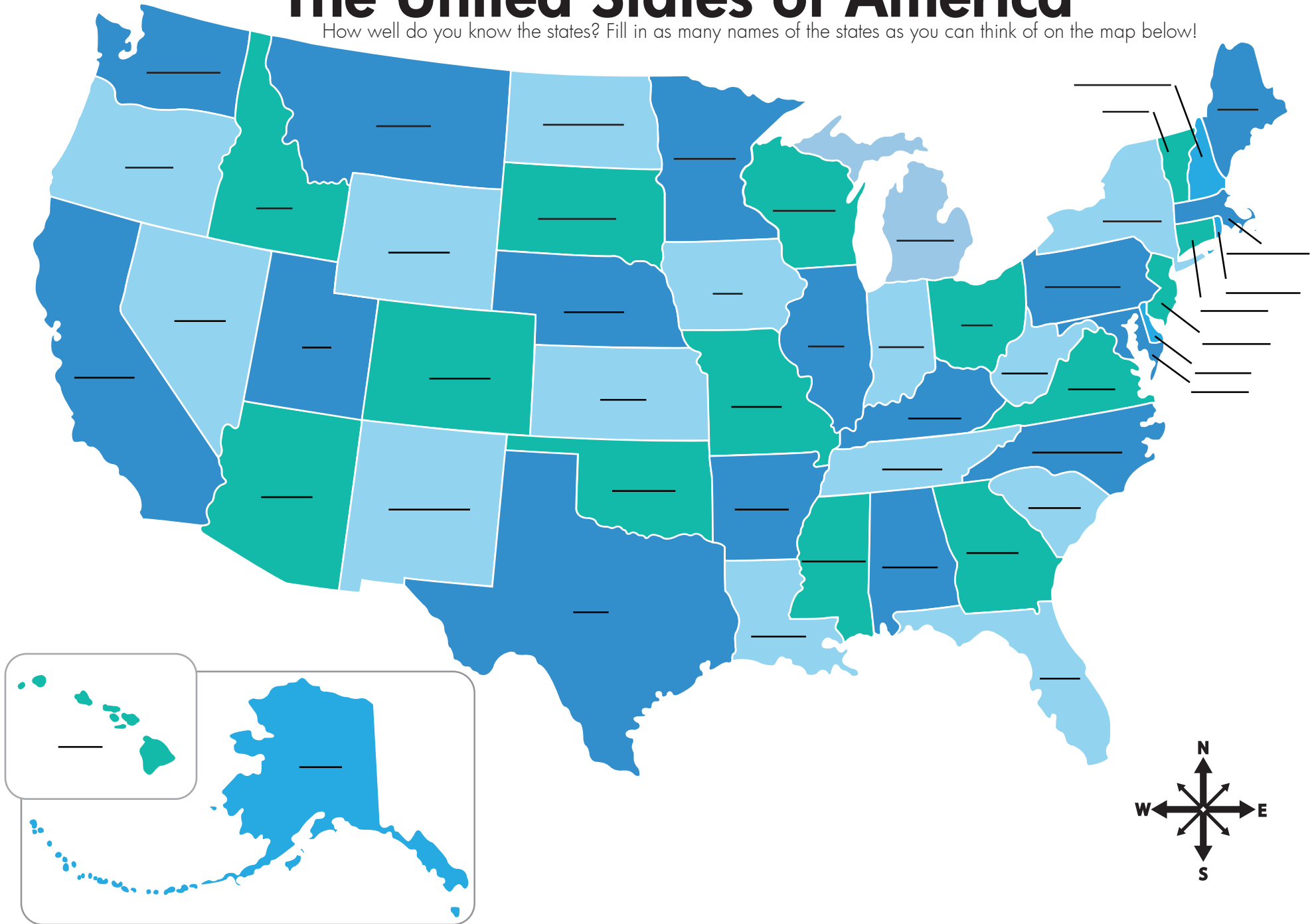
Answer Sheets

** Has an Answer Sheet*

Want more workbooks? Join [Education.com Plus](http://www.education.com/education-plus/) to save time and money.
<http://www.education.com/education-plus/>

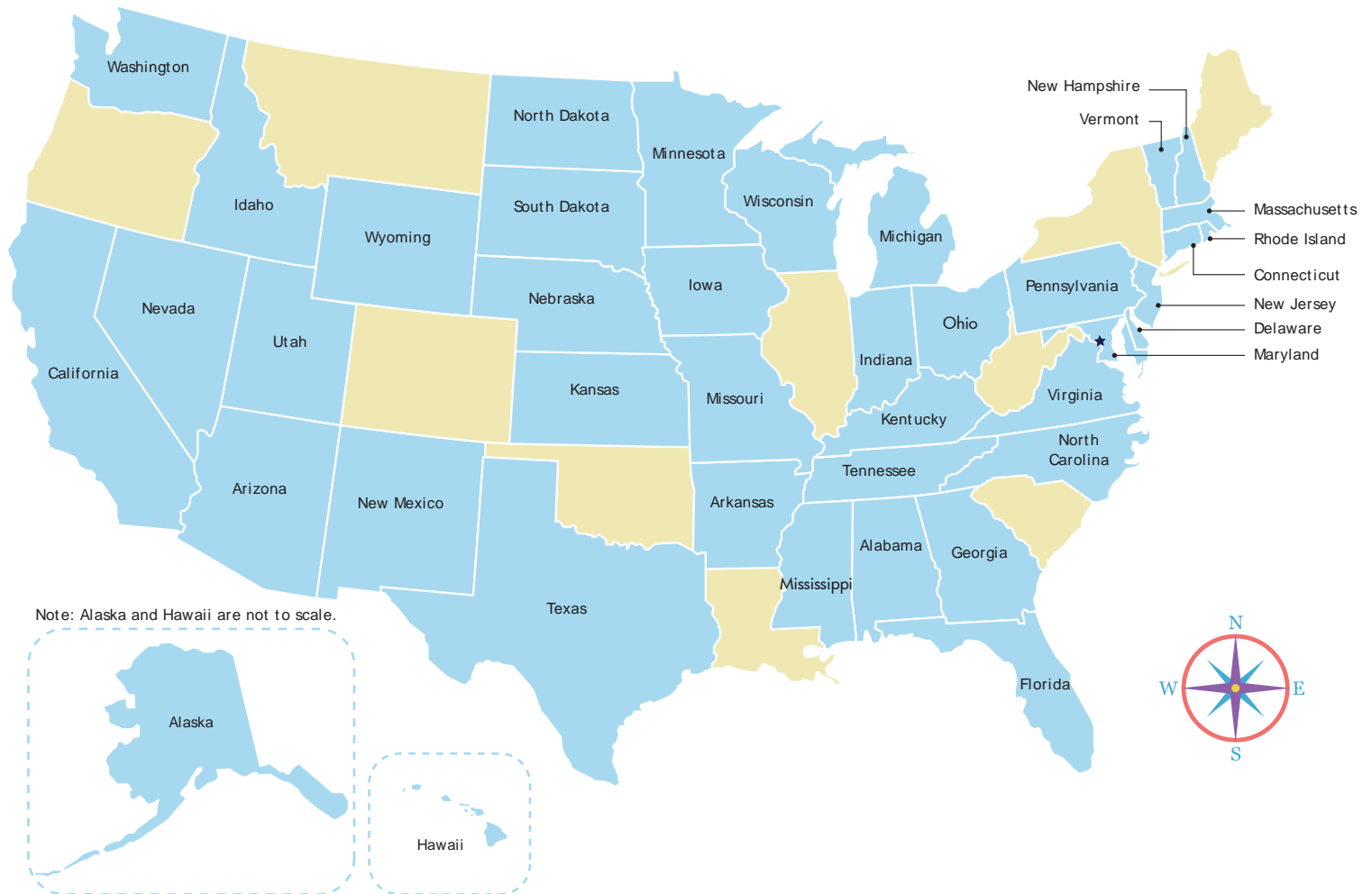
The United States of America

How well do you know the states? Fill in as many names of the states as you can think of on the map below!



Name the States 1

The United States map is missing some of the names of its states! Use the word bank to help you fill in the names.



New York

Maine

Montana

Oregon

Louisiana

West Virginia

Colorado

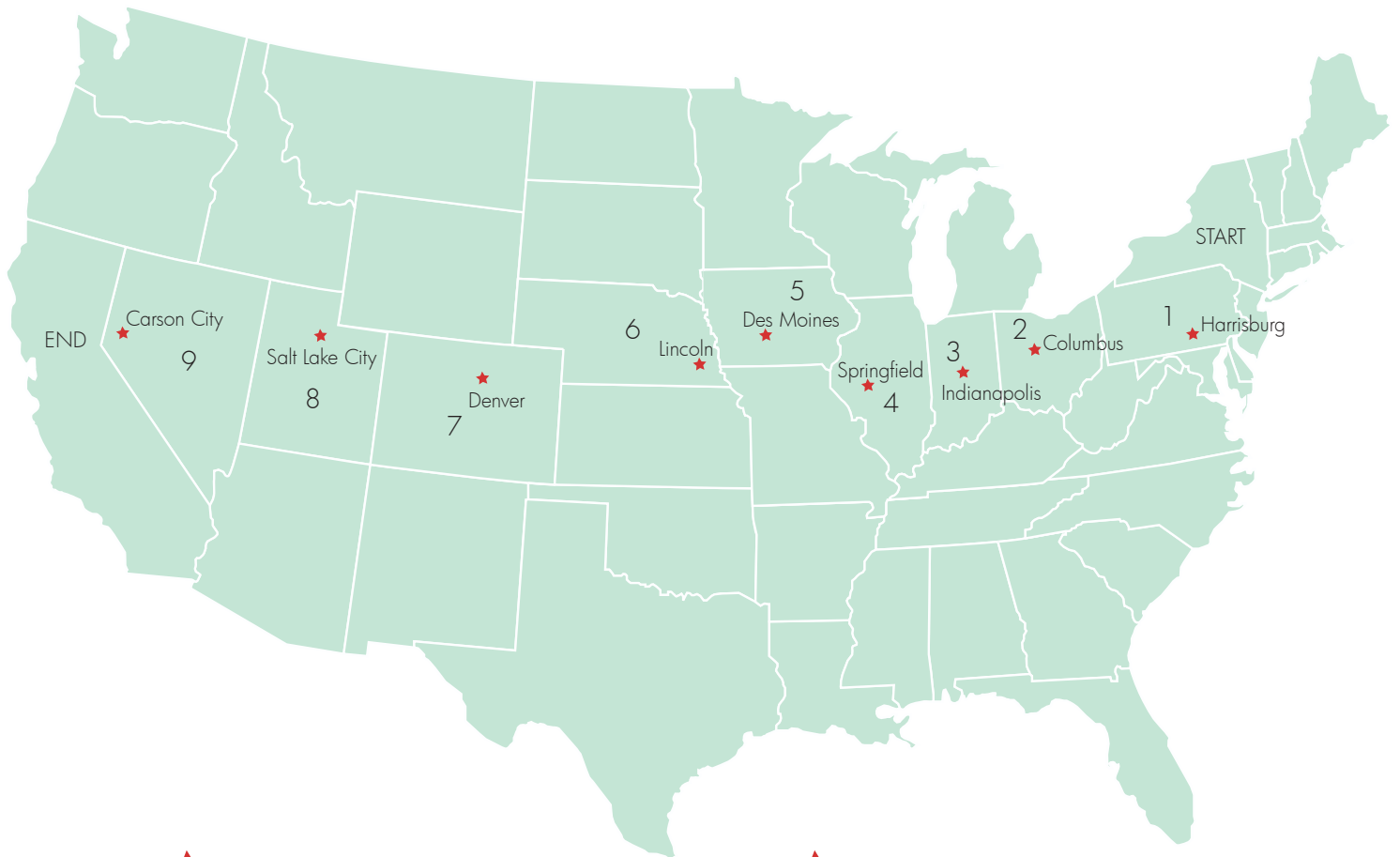
Illinois

Oklahoma

South Carolina

Road Trip!

Samantha and Jordan are going on a road trip from New York to California. They are going to stop at the capital of every state they pass through. Can you name the states they will pass through?



- ★ 1 _____
- ★ 2 _____
- ★ 3 _____
- ★ 4 _____
- ★ 5 _____

- ★ 6 _____
- ★ 7 _____
- ★ 8 _____
- ★ 9 _____

Food Road Trip Across The U.S.A!

Use your crayon to trace the route you would take to taste all the foods from around the country!



Color the States!

Color the state where you live **red**.

Color the states you have visited **green**.

Color the states you want to visit **blue**.



Note: Alaska and Hawaii are not to scale.

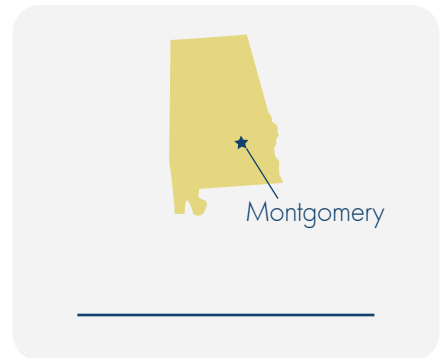
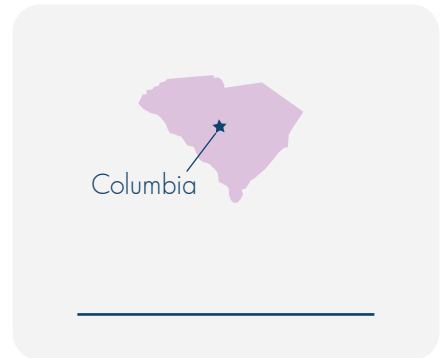
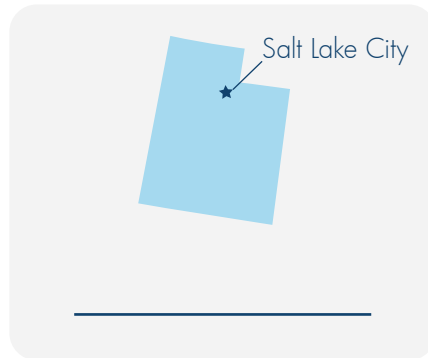
Color the States!

Look at the states you colored **green**. Why did you visit these states?

Look at the states you colored **blue**. Why do you want to visit these states?

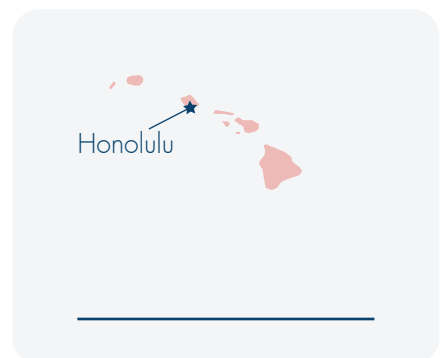
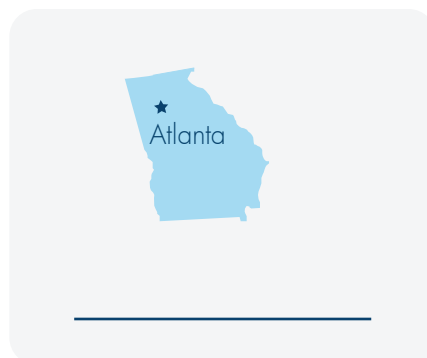
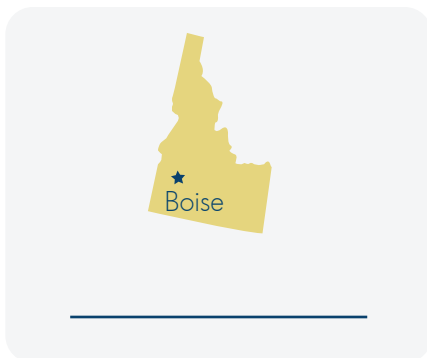
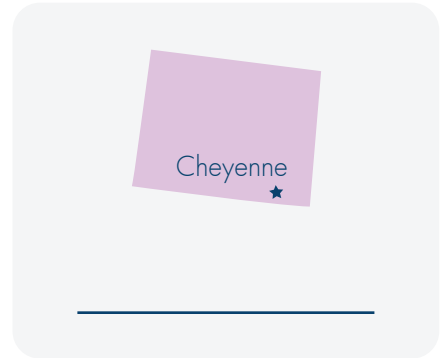
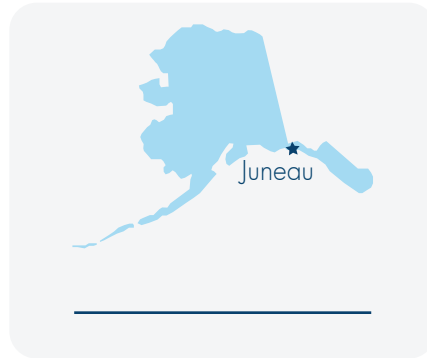
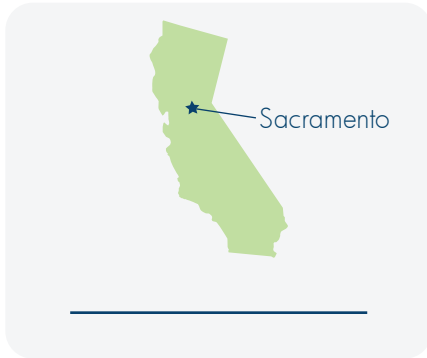
What's That State? 1

Use a map to help you identify the states by their shapes.
You can also use the state capitals as clues.



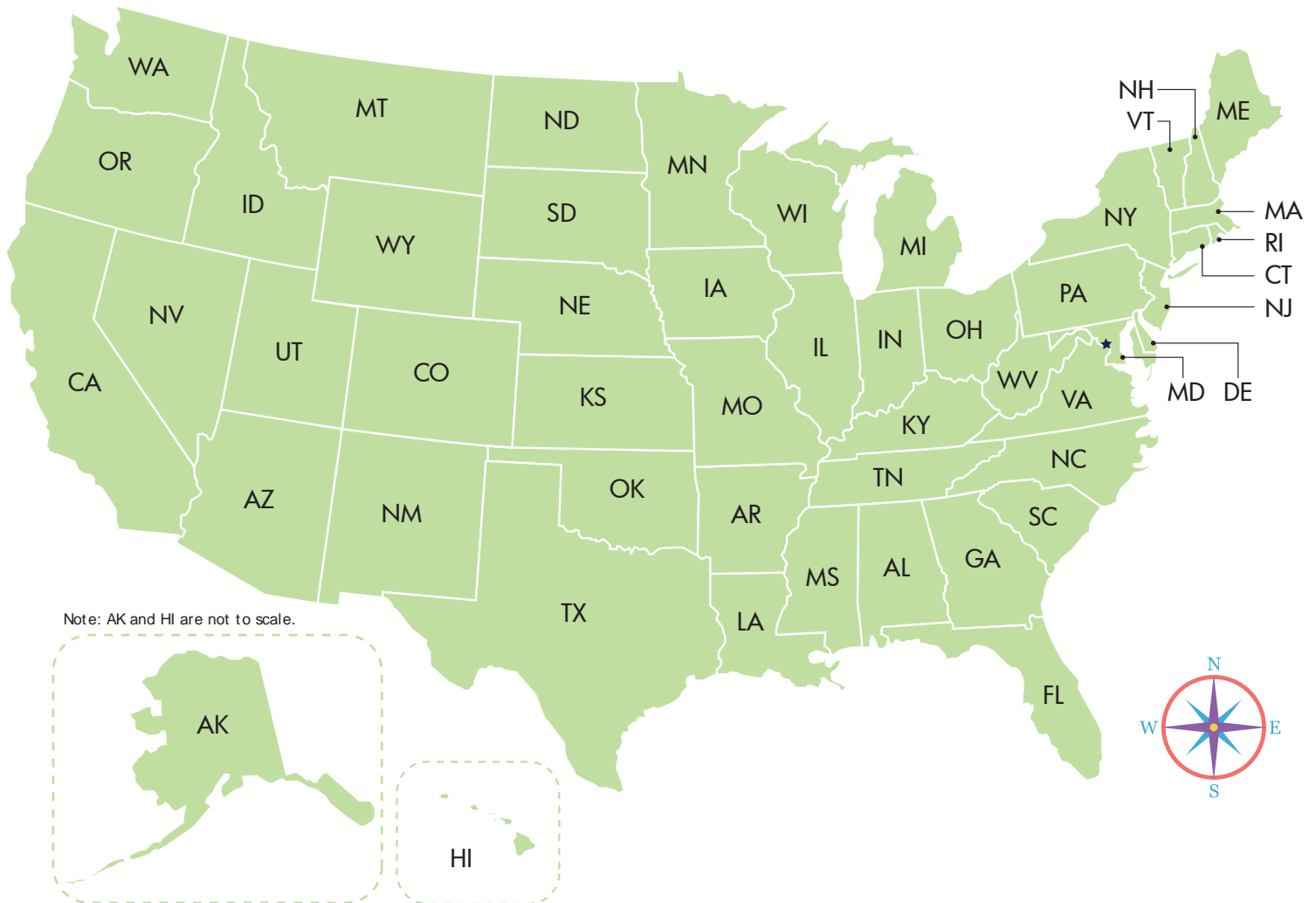
What's That State? 2

Use a map to help you identify the states by their shapes.
You can also use the state capitals as clues.



Make It Short!

Each state in the United States has its own two-letter postal abbreviation. Use the map on this page to find the postal abbreviation for every state.



Alabama _____

Alaska _____

Arizona _____

Arkansas _____

California _____

Colorado _____

Connecticut _____

Delaware _____

Continue to write the postal abbreviation for every state.

Florida _____
Georgia _____
Hawaii _____
Idaho _____
Illinois _____
Indiana _____
Iowa _____
Kansas _____
Kentucky _____
Louisiana _____
Maine _____
Maryland _____
Massachusetts _____
Michigan _____
Minnesota _____
Mississippi _____
Missouri _____
Montana _____
Nebraska _____
Nevada _____
New Hampshire _____

New Jersey _____
New Mexico _____
New York _____
North Carolina _____
North Dakota _____
Ohio _____
Oklahoma _____
Oregon _____
Pennsylvania _____
Rhode Island _____
South Carolina _____
South Dakota _____
Tennessee _____
Texas _____
Utah _____
Vermont _____
Virginia _____
Washington _____
West Virginia _____
Wisconsin _____
Wyoming _____

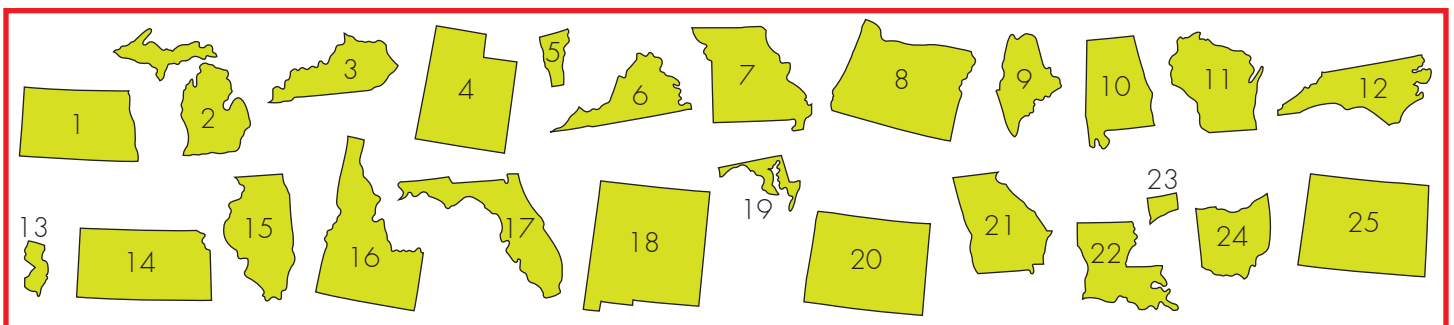
Scrambled States!

Unscramble the names of the states below. If you need a hint, take a look at the picture bank!

1.	THSOU KDAOTA
2.	CMIHGAIN
3.	YKNETKUC
4.	AUTH
5.	TEMOVRN
6.	GANIIVIR
7.	SMIUSRIO
8.	GEONOR
9.	IMEAN
10.	ABAALAM
11.	CISSIWNON
12.	HRNTO RALOACIN

13.	EWN EYEJSR
14.	SKASAN
15.	LSINIOIL
16.	HAIDO
17.	LDAFORI
18.	WNE CMIXOE
19.	YADARNLM
20.	GYMONIW
21.	OEGGIAR
22.	SOAILIANU
23.	TNCIOTCCEUN
24.	HIOO
25.	DOOLACRO

Picture Bank:



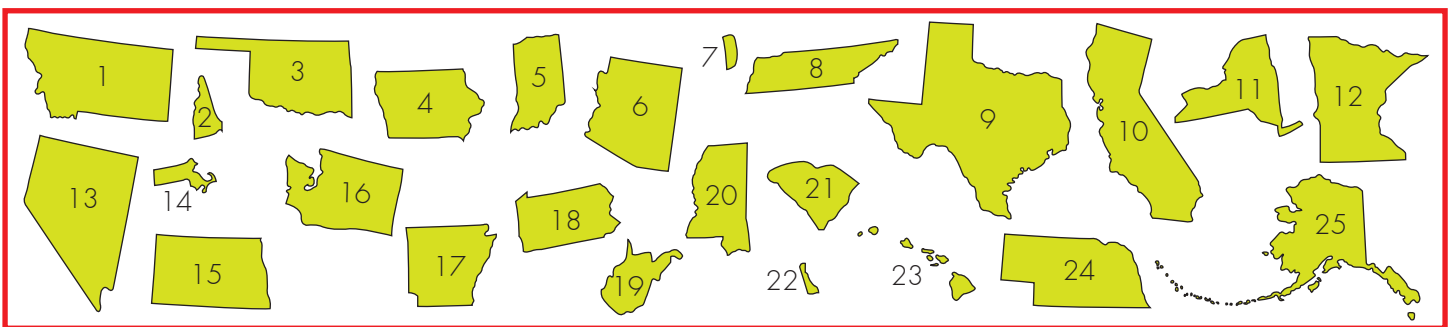
More Scrambled States!

Unscramble the names of the states below. If you need a hint, take a look at the picture bank!

1.	NAMOANT _____
2.	NWE PHIMASER _____
3.	HOAMOALK _____
4.	WAIO _____
5.	DAIANIN _____
6.	RZAINOA _____
7.	HEDOR ALSIDN _____
8.	NESTEESEN _____
9.	AXETS _____
10.	FLACOINARI _____
11.	EWN KYOR _____
12.	STMINEANO _____

13.	DANVAE _____
14.	SACASHETUSTMS _____
15.	RNHOT KADOAT _____
16.	GOHIWANTSN _____
17.	RASKAANS _____
18.	YALNPNEVIANS _____
19.	STEW NGIIVAIR _____
20.	PSIPISIMSSI _____
21.	UTSHO OCRAILAN _____
22.	WEAREALD _____
23.	IHAIAW _____
24.	BANEKASR _____
25.	KASAAL _____

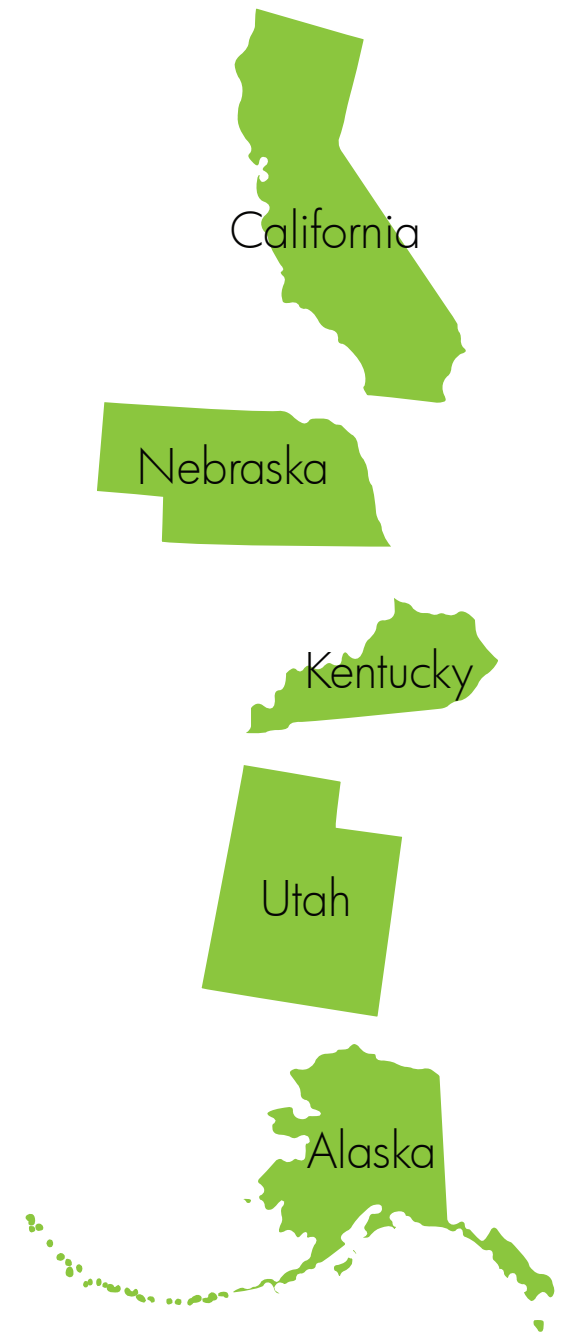
Picture Bank:



Extreme State Facts

Match each extreme fact to its state!

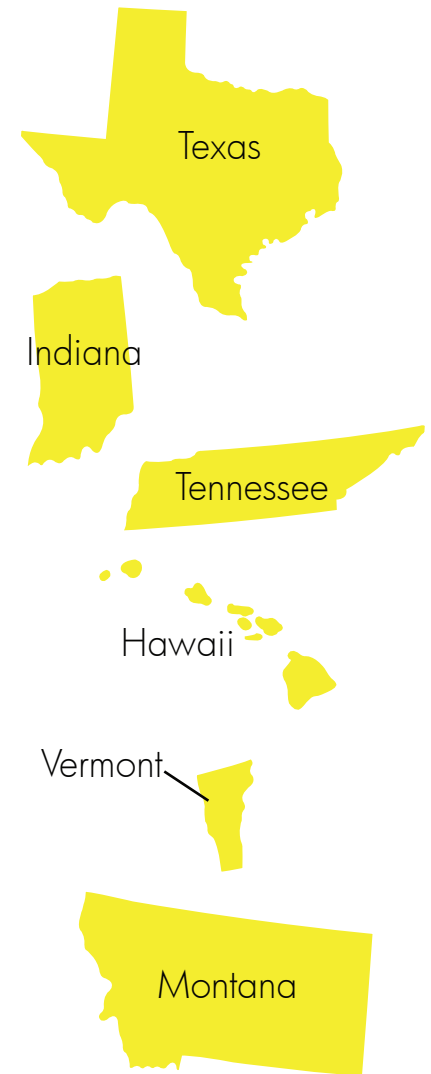
- The 49th state added to the United States also has the highest point in the U.S. (Mt. McKinley is 20,320 feet above sea level.)
- This western state has the largest salt lake in the western hemisphere. (The Great Salt Lake covers an average of 1 700 square miles.)
- This southern state has the largest underground cave in the world. (The Mammoth - Flint cave system is 300 miles long.)
- This western state is home to the oldest living things in the world. (General Sherman, a 3500 year old tree, and a stand of 4000 year old bristlecone pines.)
- This midwestern state has the smallest population in the United States. (Monowi has a population of 1.)



Notable State Facts

Molly has collected her state facts, but can't remember which facts go with which states. Can you help her by drawing a line between the facts and their matching states?

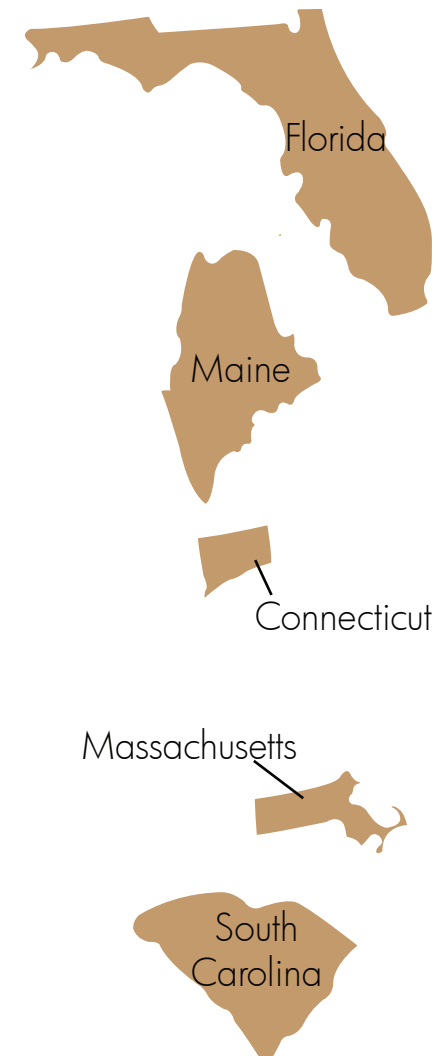
- This state is home to Grasshopper Glacier, named for the grasshoppers that can still be seen frozen in the ice.
- This state is the largest producer of maple syrup in the United States.
- Graceland, Elvis Presley's estate and burial site, is found in this state.
- This state is the site of the famous car race, the Indy 500.
- NASA is the headquarters for all piloted U.S. space projects and is found in this state.
- 'Iolani Palace, the only royal palace in the United States, is found in this state.



Going to the Coast

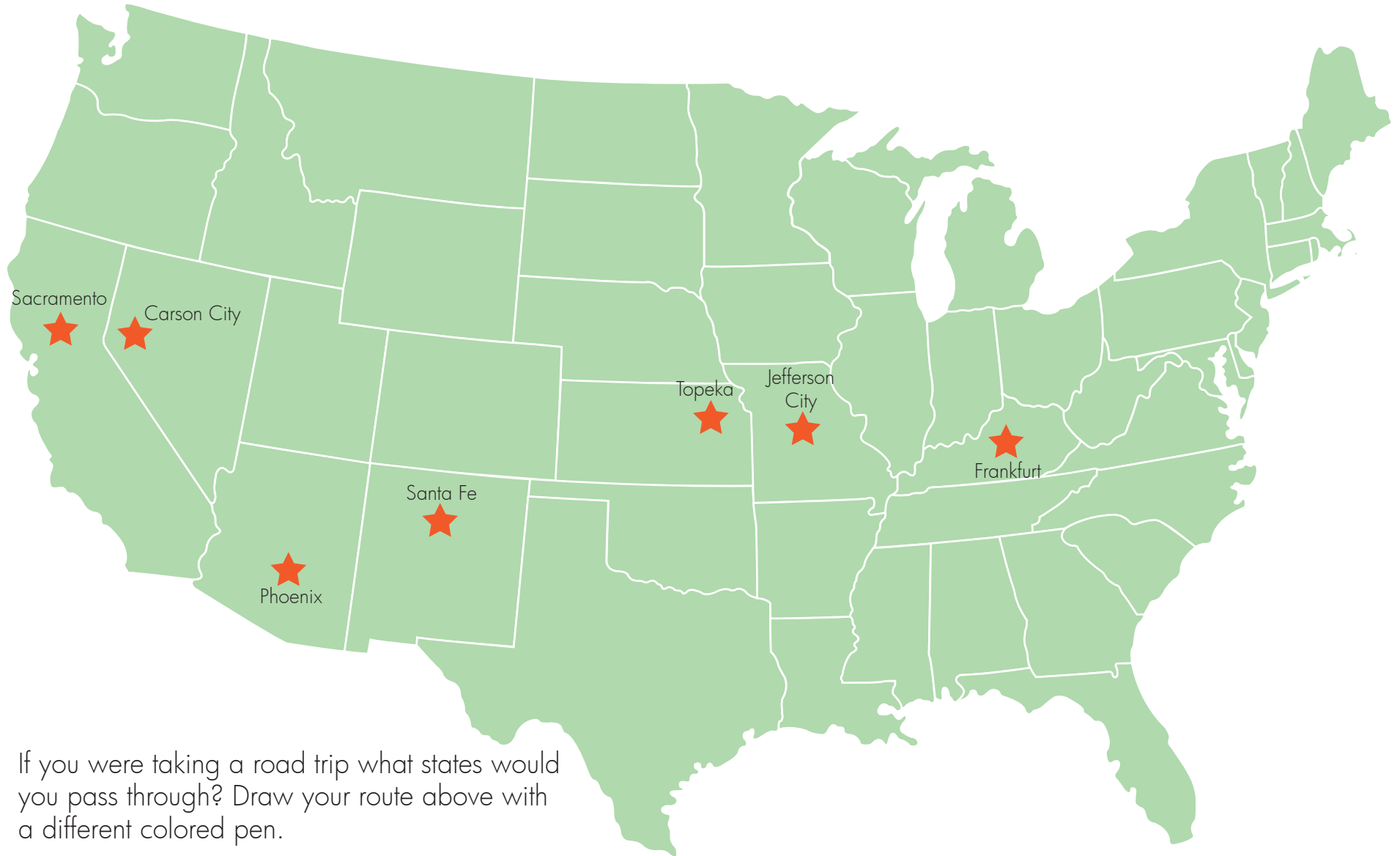
Match each fact with its east coast state!

- The most easterly point in the United States, West Quoddy Head, is found in this state.
- This state is where the Boston Tea Party occurred in 1773.
- The first battle of the Civil War took place at Fort Sumter in this state.
- Noah Webster, the author of the first dictionary, was born in this state in 1807.
- Known as the Venice of America, the city of Fort Lauderdale has 185 miles of local waterways and is found in this state.



Road Trip Across the U.S.A.

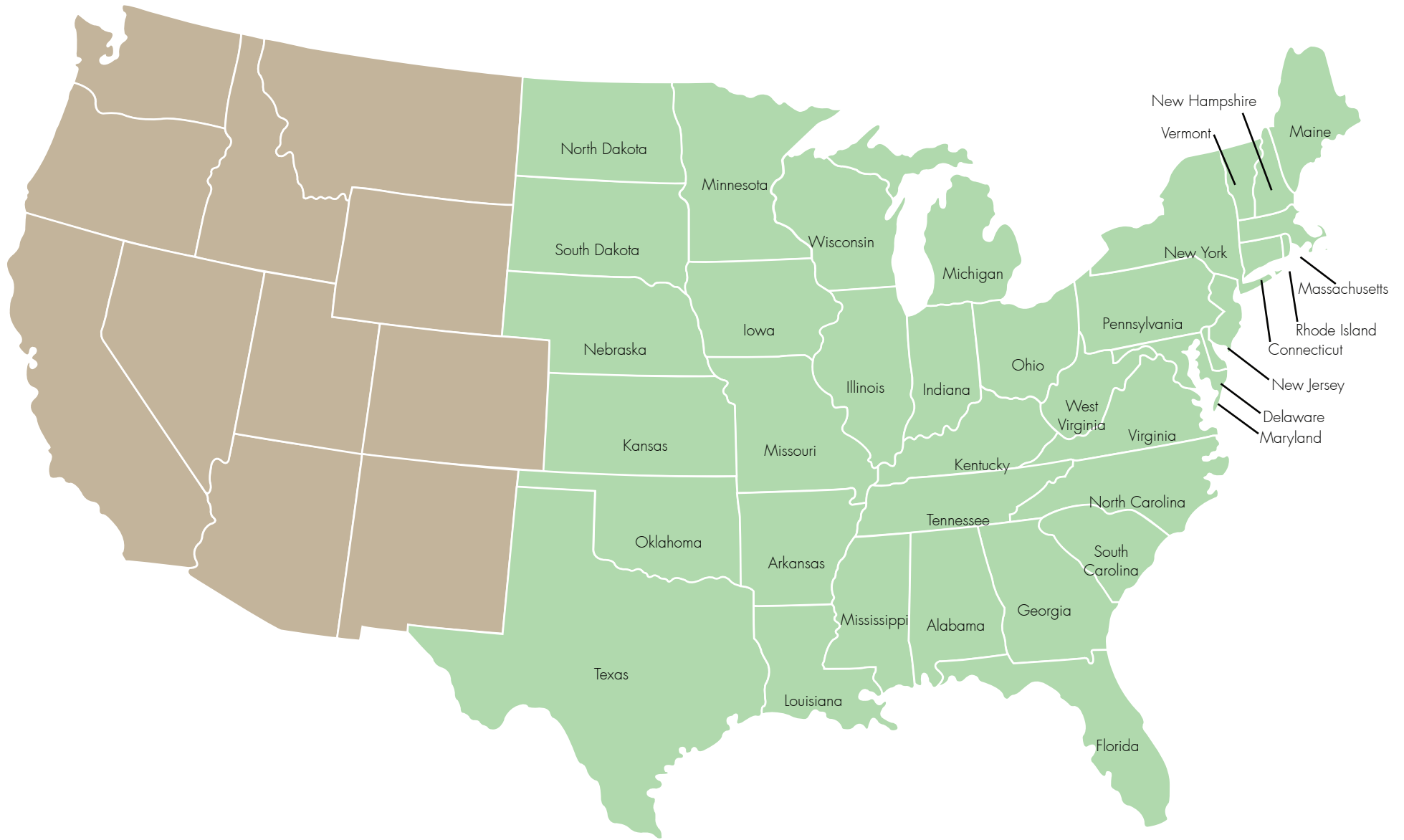
Tammy's family is taking a road trip! They want to visit the seven capital cities marked on the map. Draw a route for them to take and fill in the names of all the states they are going to pass through!



If you were taking a road trip what states would you pass through? Draw your route above with a different colored pen.

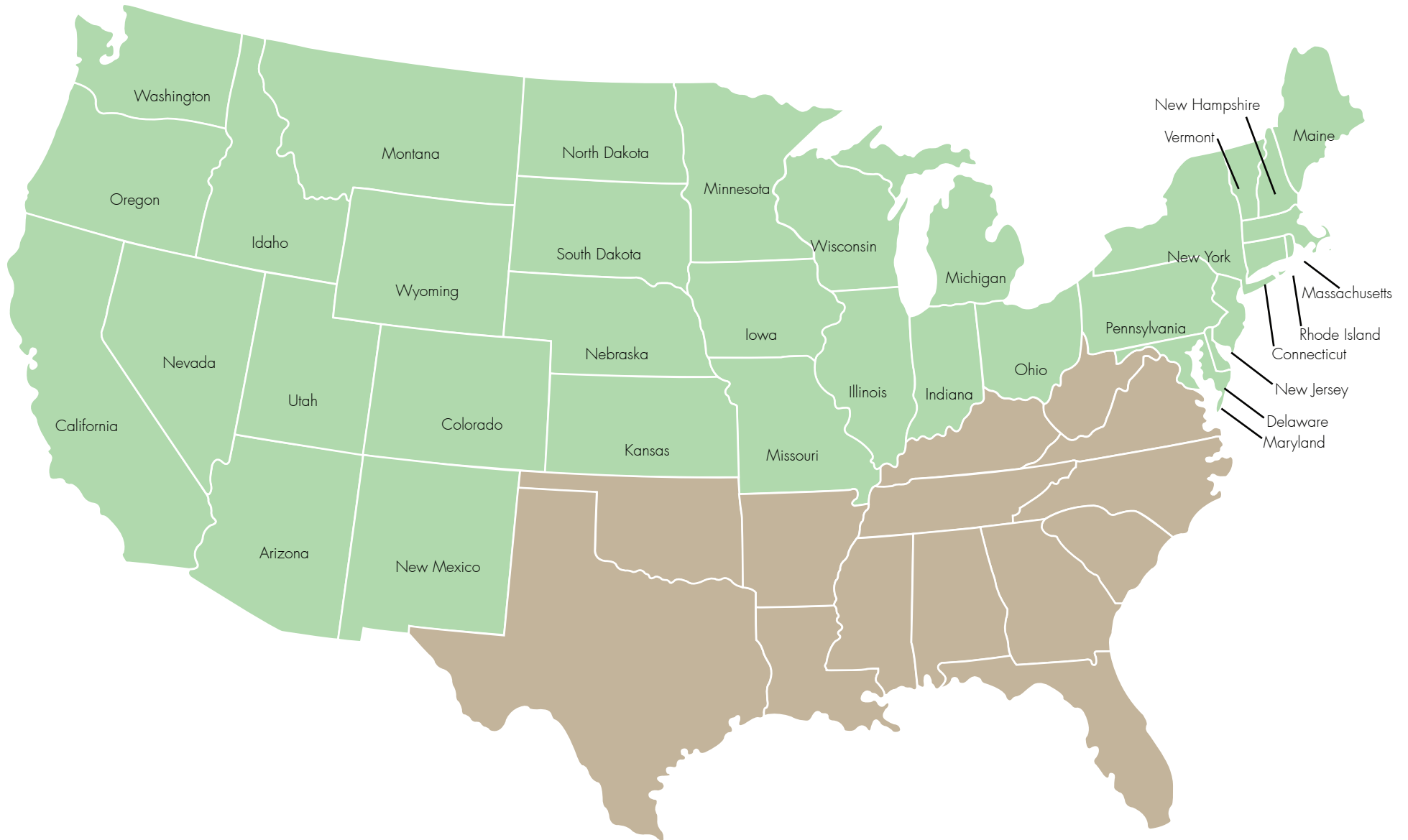
Name These States: The West

Fill in the names of the western states to complete the map below!



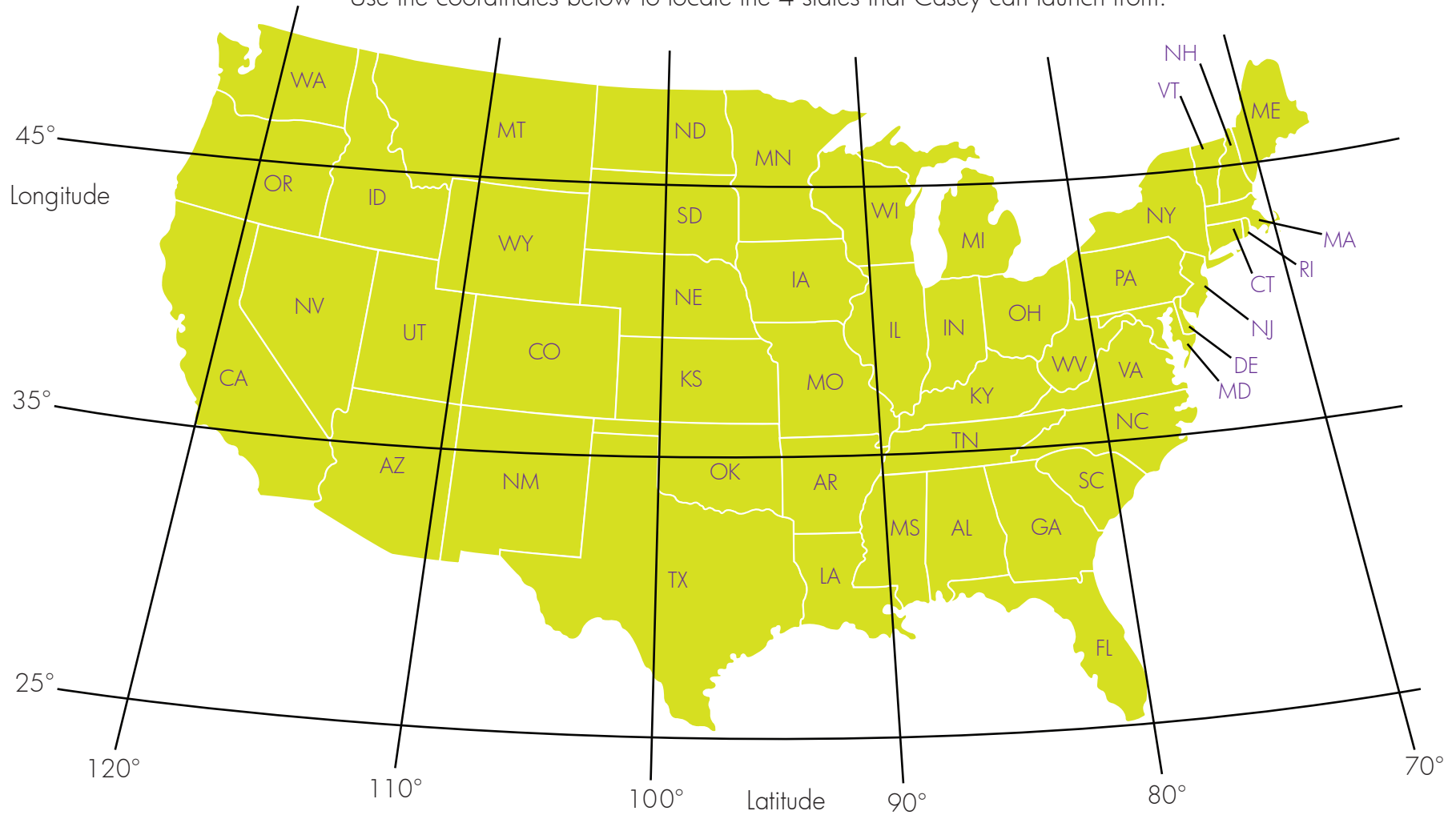
Name These States: The South

Fill in the names of the southern states to complete the map below!



Launch Coordinates

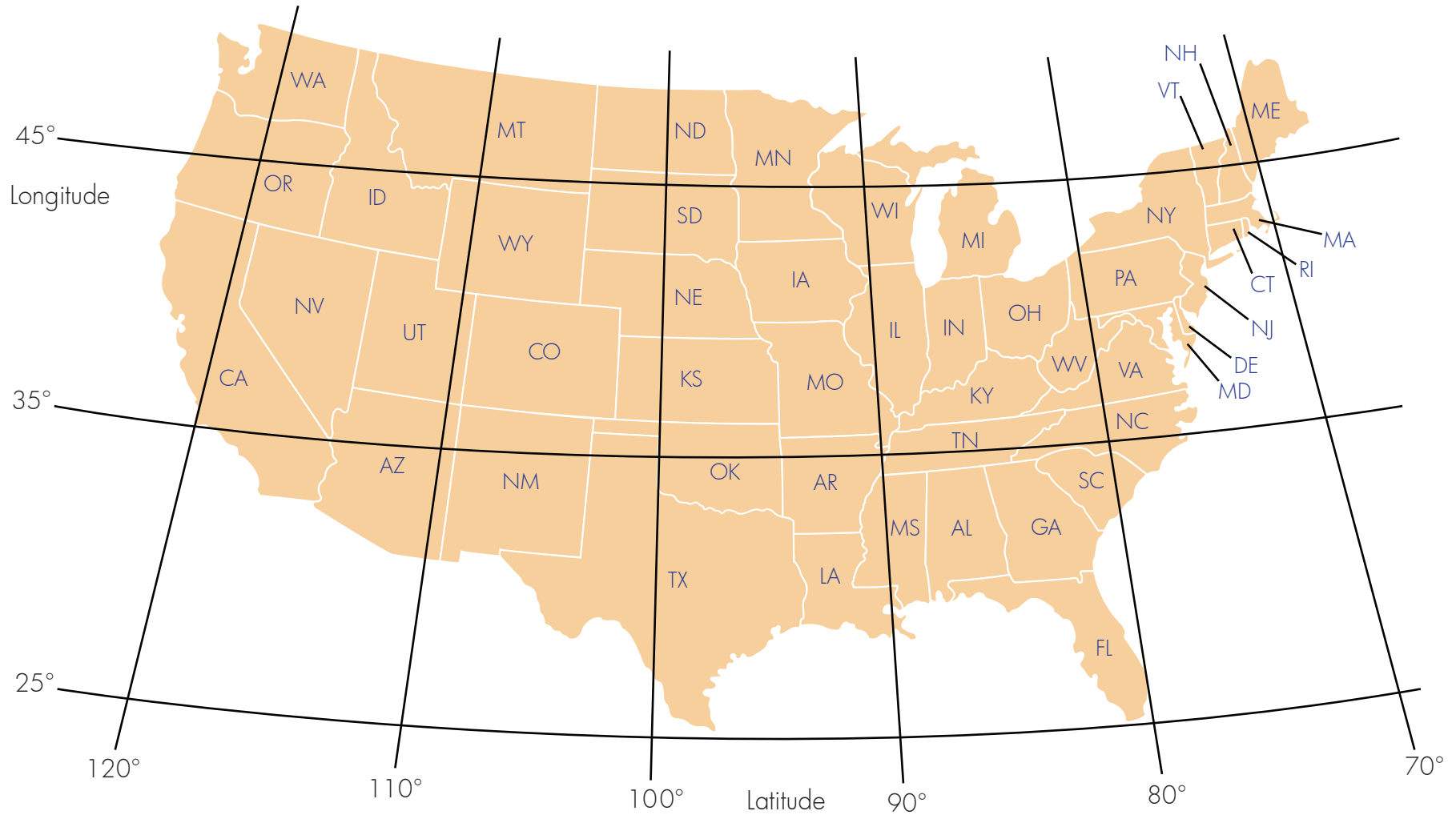
Casey is looking for the perfect place to launch his rocket ship. He has found 4 possible locations. Use the coordinates below to locate the 4 states that Casey can launch from.



- | | |
|---|---|
| 1. This location is at 30° north and 97° west: _____ | 2. This location is at 41° north and 78° west: _____ |
| 3. This location is at 39° north and 120° west: _____ | 4. This location is at 46° north and 108° west: _____ |

State Coordinates

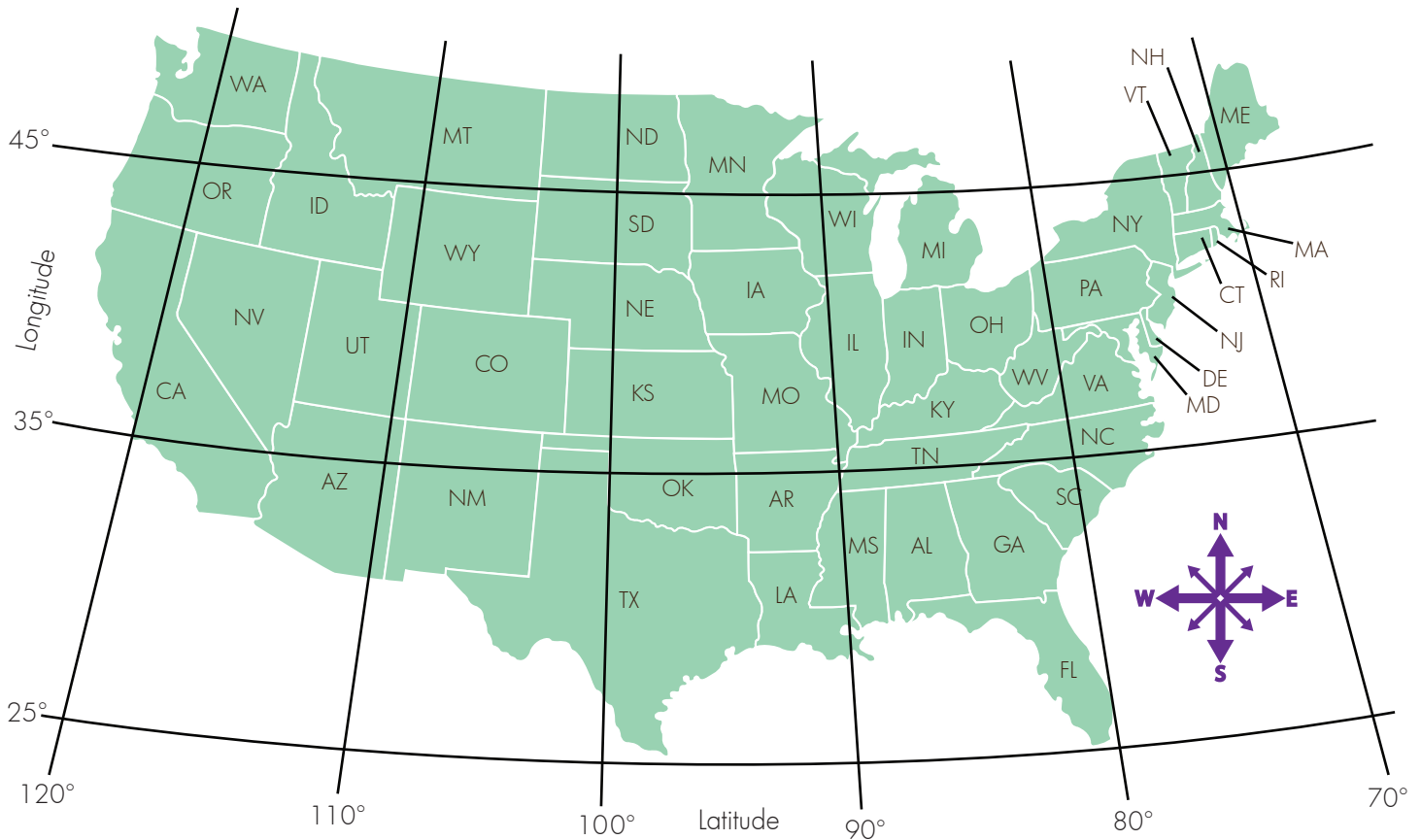
Can you name the states located at the coordinates given below?



1. This location is at 37° north and 105° west: _____
2. This location is at 27° north and 82° west: _____
3. This location is at 44° north and 75° west: _____
4. This location is at 38° north and 91° west: _____

State Scavenger Hunt

Zach and Ronnie are on a state scavenger hunt.
Use the clues below to help them find the states they're looking for!



1. Start in Wyoming. Move one state north and then 3 states to the east. What state are you in?
2. Start in Alabama. Move one state north. Follow the 35° latitude line west 4 states. What state are you in?
3. Start in east Michigan. Move to the state that is south and east. Move one state northeast. Then go one more state north. What state are you in?
4. Start in South Dakota. Follow the 100° longitude line 2 states south. Go 2 states west. Then go to the bordering northwest state. What state are you in?



How many states can you name that start with these letters?

A _____

C _____

D _____

F _____

H _____

K _____

L _____

M _____

N _____

O _____

P _____

R _____

S _____

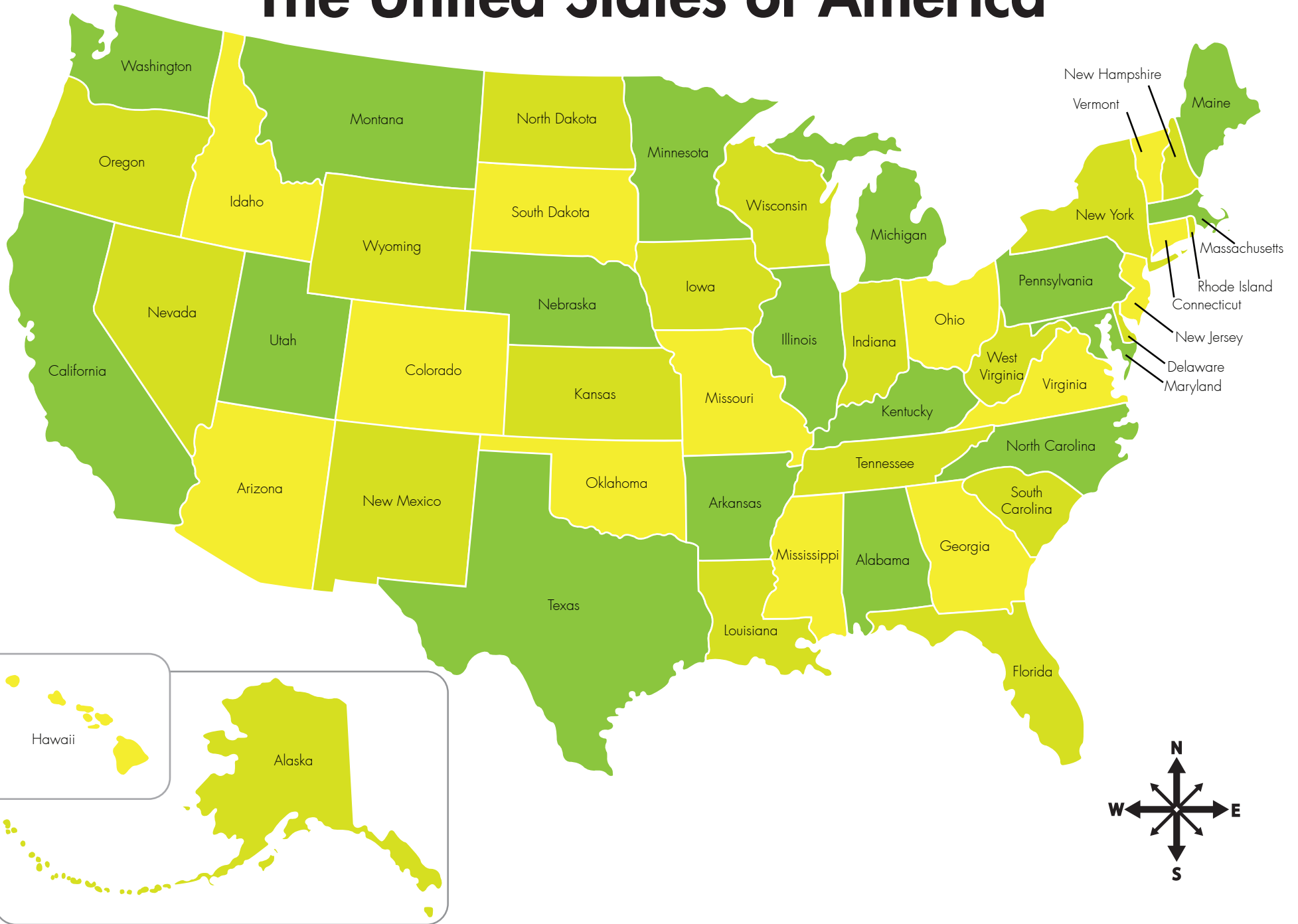
T _____

U _____

V _____


W _____

The United States of America



Great job!

is an Education.com social studies superstar



Answer Sheets

Learn the 50 States

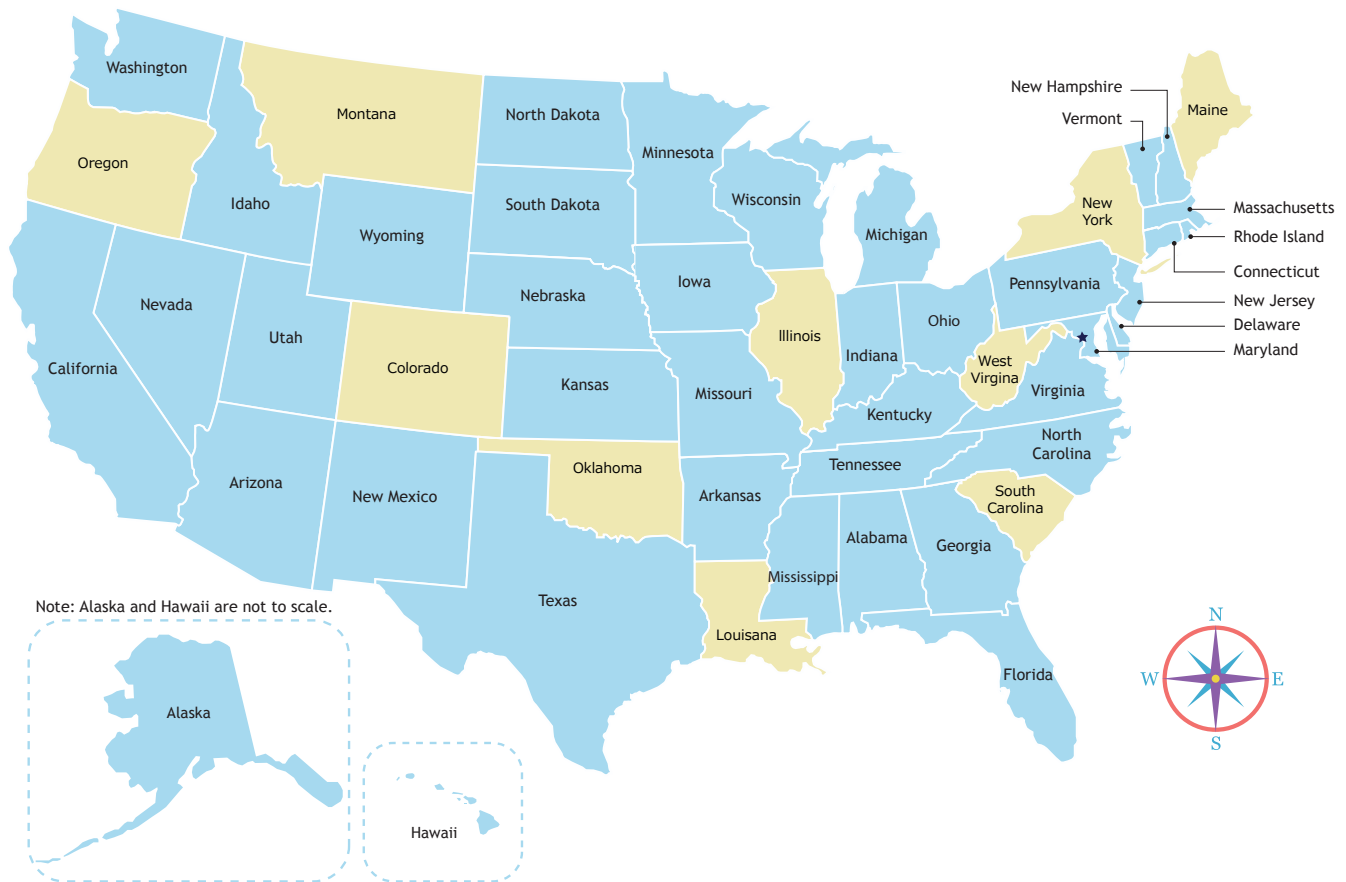
Name the States 1
Name the States 2
Make It Short!
Scrambled States!
Extreme State Facts
Notable State Facts
Going to the Coast
Launch Coordinates
State Coordinates
State Scavenger Hunt

Want more workbooks? Join Education.com Plus to save time and money.
<http://www.education.com/education-plus/>

Answer Sheet

Name the States 1

The United States map is missing some of the names of its states! Use the word bank to help you fill in the names.



New York

Maine

Montana

Oregon

Louisiana

West Virginia

Colorado

Illinois

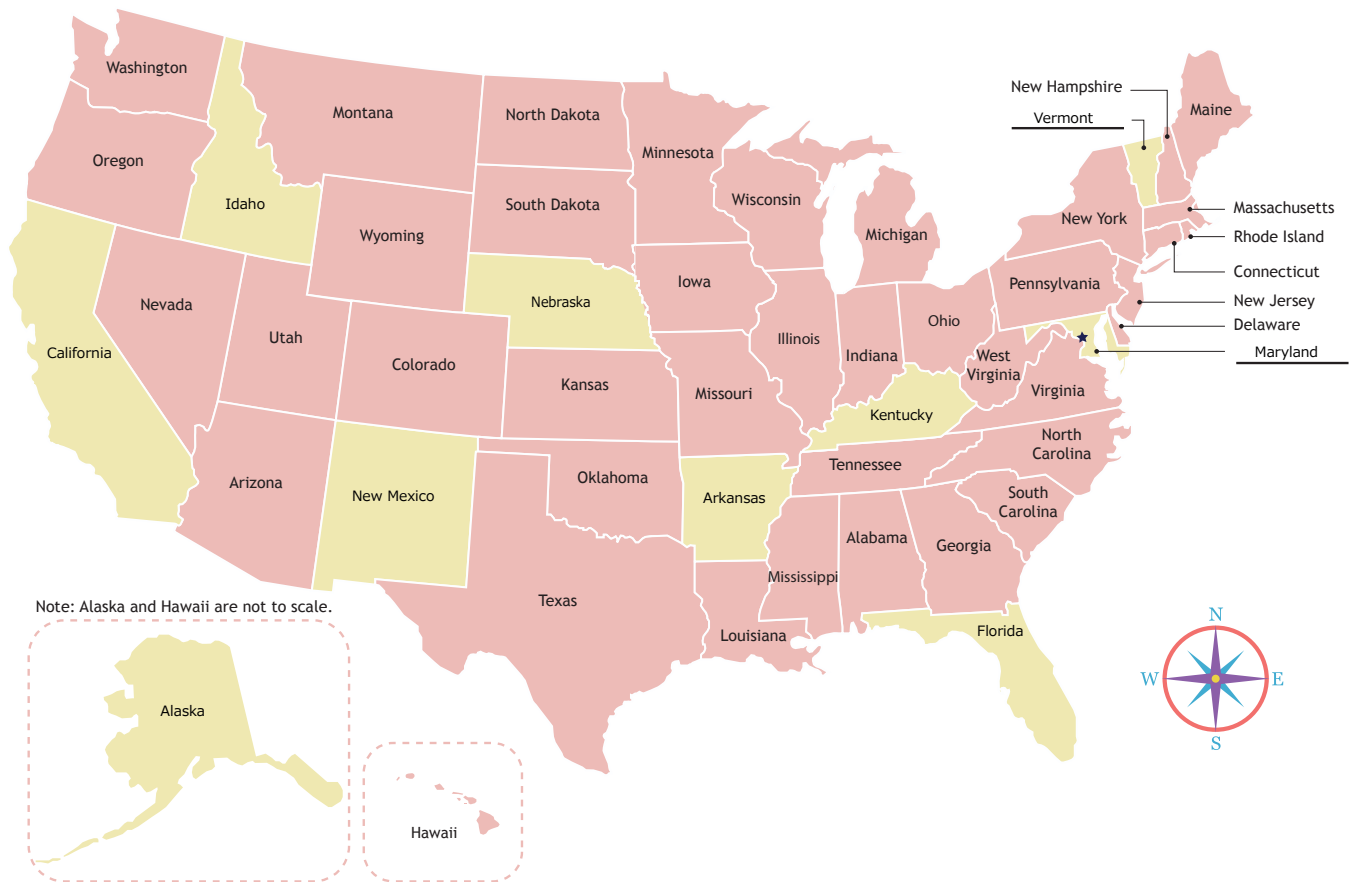
Oklahoma

South Carolina

Answer Sheet

Name the States 2

The United States map is missing some of the names of its states! Use the word bank to help you fill in the names.



Idaho
Florida
Arkansas
Maryland

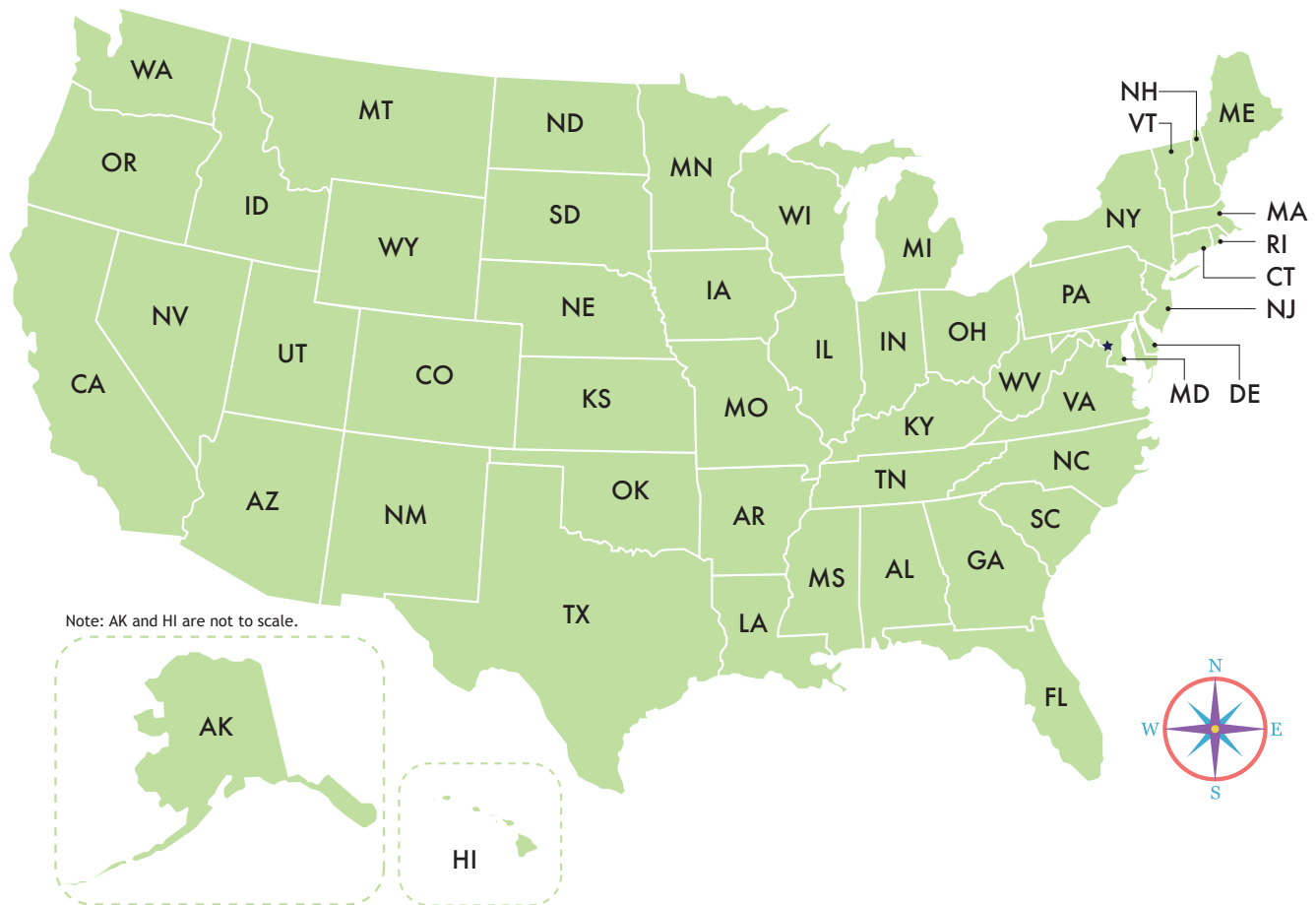
Alaska
New Mexico
Kentucky
Vermont

Nebraska
California

Answer Sheet

Make It Short!

Each state in the United States has its own two-letter postal abbreviation. Use the map on this page to find the postal abbreviation for every state.



Alabama AL

Alaska AK

Arizona AZ

Arkansas AR

California CA

Colorado CO

Connecticut CT

Delaware DE

Answer Sheet

Continue to write the postal abbreviation for every state.

Florida FL

Georgia GA

Hawaii HI

Idaho ID

Illinois IL

Indiana IN

Iowa IA

Kansas KS

Kentucky KY

Louisiana LA

Maine ME

Maryland MD

Massachusetts MA

Michigan MI

Minnesota MN

Mississippi MS

Missouri MO

Montana MT

Nebraska NE

Nevada NV

New Hampshire NH

New Jersey NJ

New Mexico NM

New York NY

North Carolina NC

North Dakota ND

Ohio OH

Oklahoma OK

Oregon OR

Pennsylvania PA

Rhode Island RI

South Carolina SC

South Dakota SD

Tennessee TN

Texas TX

Utah UT

Vermont VT

Virginia VA

Washington WA

West Virginia WV

Wisconsin WI

Wyoming WY

Answer Sheet

More Scrambled States!

Unscramble the names of the states below. If you need a hint, take a look at the picture bank!

1. NAMOANT
MONTANA

2. NWE PHIMAHSER
NEW HAMPSHIRE

3. HOAMOALK
OKLAHOMA

4. WAIO
IOWA

5. DAIANIN
INDIANA

6. RZAINOA
ARIZONA

7. HEDOR ALSIDN
RHODE ISLAND

8. NESTEESN
TENNESSEE

9. AXETS
TEXAS

10. FLACOINARI
CALIFORNIA

11. EWN KYOR
NEW YORK

12. STMINEANO
MINNESOTA

13. DANVAE
NEVADA

14. SACASHETUSTMS
MASSACHUSETTS

15. RNHOT KADOAT
NORTH DAKOTA

16. GOHIWANTSN
WASHINGTON

17. RASKAANS
ARKANSAS

18. YALNPNEVIANS
PENNSYLVANIA

19. STEW NGIIVAIR
WEST VIRGINIA

20. PSIPISIMSSI
MISSISSIPPI

21. UTSHO OCRAILAN
SOUTH CAROLINA

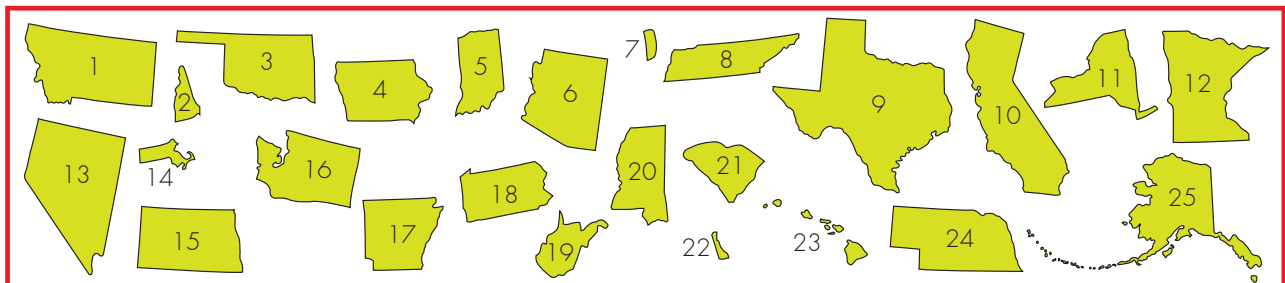
22. WEAREALD
DELAWARE

23. IHAIW
HAWAII

24. BANEKASR
NEBRASKA

25. KASAAL
ALASKA

Picture Bank:



Answer Sheet

Scrambled States!

Unscramble the names of the states below. If you need a hint, take a look at the picture bank!

1. THSOU KDAOTA
SOUTH DAKOTA

2. CMIHGAIN
MICHIGAN

3. YKNETKUC
KENTUCKY

4. AUTH
UTAH

5. TEMOVRN
VERMONT

6. GANIIVIR
VIRGINIA

7. SMIUSRIO
MISSOURI

8. GEONOR
OREGON

9. IMEAN
MAINE

10. ABAALAM
ALABAMA

11. CISSIWNON
WISCONSIN

12. HRNTO RALOACIN
NORTH CAROLINA

13. EWN EYEJSR
NEW JERSEY

14. SKASAN
KANSAS

15. LSINIOIL
ILLINOIS

16. HAIDO
IDAHO

17. LDAFORI
FLORIDA

18. WNE CMIXOE
NEW MEXICO

19. YADARNLM
MARYLAND

20. GYMONIW
WYOMING

21. OEGGIAR
GEORGIA

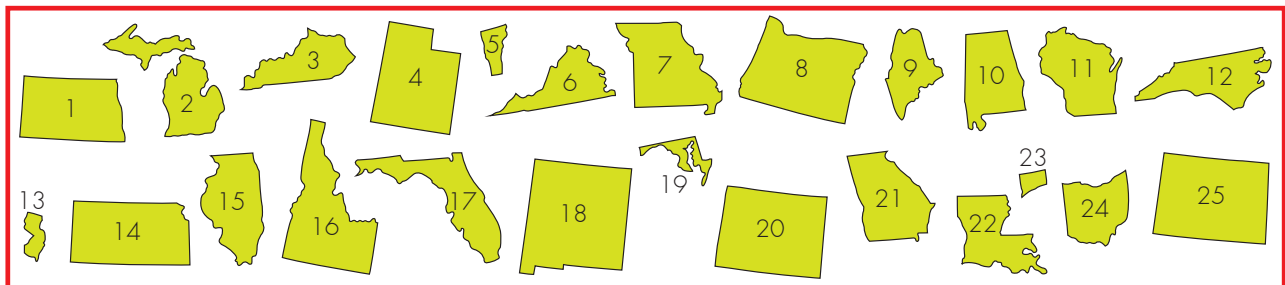
22. SOAILIANU
LOUISIANA

23. TNCIOTCCEUN
CONNECTICUT

24. HIOO
OHIO

25. DOOLACRO
COLORADO

Picture Bank:

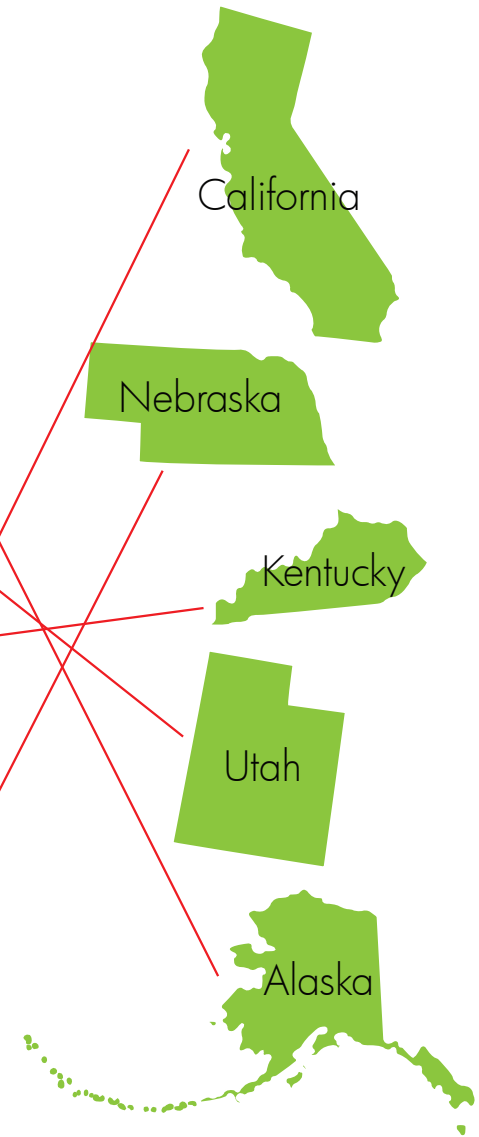


Answer Sheet

Extreme State Facts

Match each extreme fact to its state!

- The 49th state added to the United States also has the highest point in the U.S. (Mt. McKinley is 20,320 feet above sea level.)
- This western state has the largest salt lake in the western hemisphere. (The Great Salt Lake covers an average of 1700 square miles.)
- This southern state has the largest underground cave in the world. (The Mammoth - Flint cave system is 300 miles long.)
- This western state is home to the oldest living things in the world. (General Sherman, a 3500 year old tree, and a stand of 4000 year old bristlecone pines.)
- This midwestern state has the smallest population in the United States. (Monowi has a population of 1.)

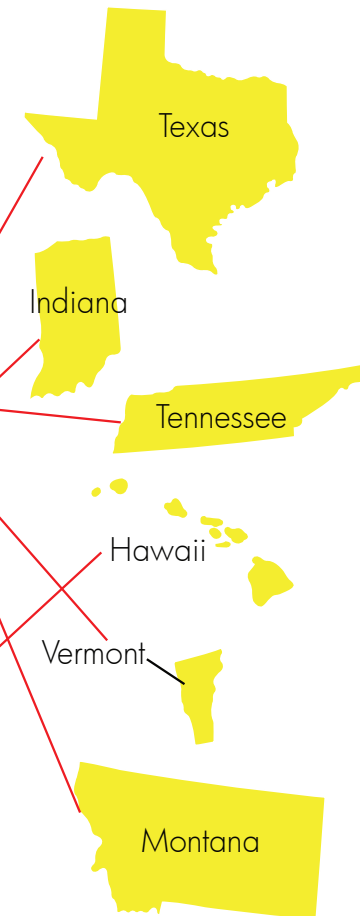


Answer Sheet

Notable State Facts

Molly has collected her state facts, but can't remember which facts go with which states. Can you help her by drawing a line between the facts and their matching states?

- This state is home to Grasshopper Glacier, named for the grasshoppers that can still be seen frozen in the ice.
- This state is the largest producer of maple syrup in the United States.
- Graceland, Elvis Presley's estate and burial site, is found in this state.
- This state is the site of the famous car race, the Indy 500.
- NASA is the headquarters for all piloted U.S. space projects and is found in this state.
- 'Iolani Palace, the only royal palace in the United States, is found in this state.

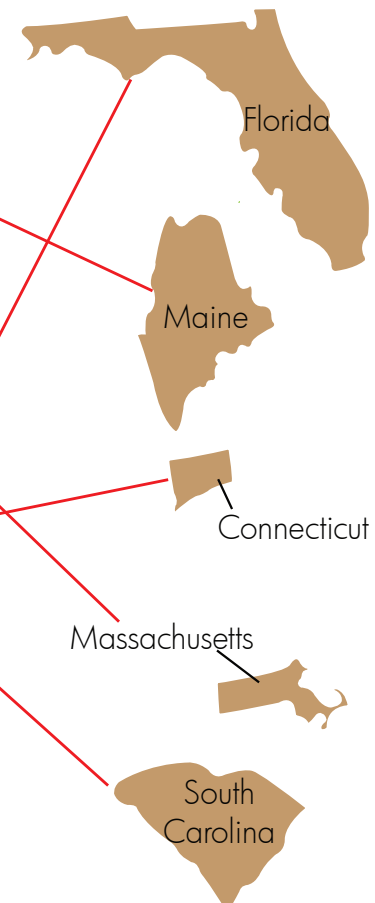


Answer Sheet

Going to the Coast

Match each fact with its east coast state!

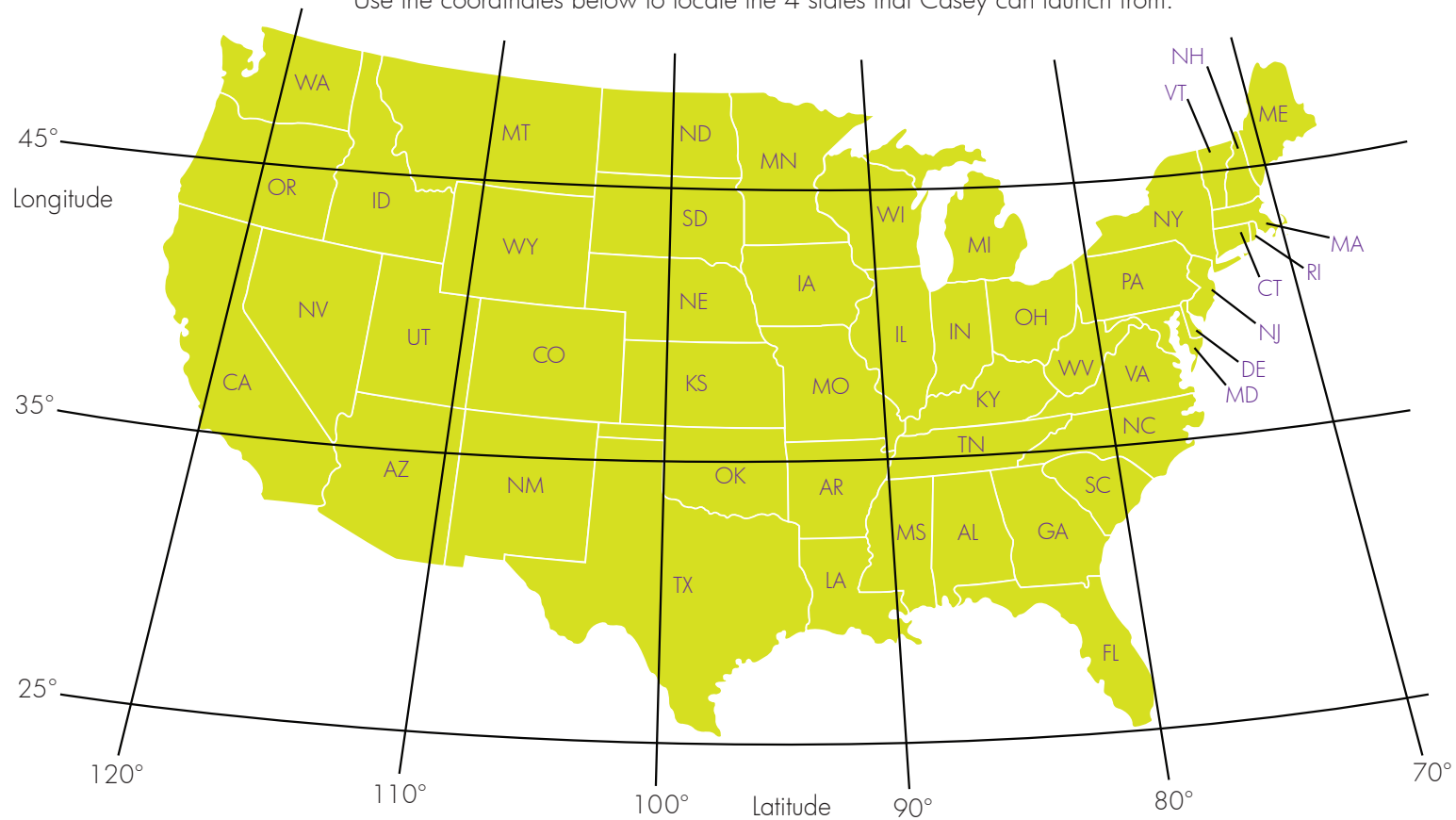
- The most easterly point in the United States, West Quoddy Head is found in this state.
- This state is where the Boston Tea Party occurred in 1773.
- The first battle of the Civil War took place at Fort Sumter in this state.
- Noah Webster, the author of the first dictionary was born in this state in 1807.
- Known as the Venice of America, the city of Fort Lauderdale has 185 miles of local waterways and is found in this state.



Answer Sheet

Launch Coordinates

Casey is looking for the perfect place to launch his rocket ship. He has found 4 possible locations. Use the coordinates below to locate the 4 states that Casey can launch from.

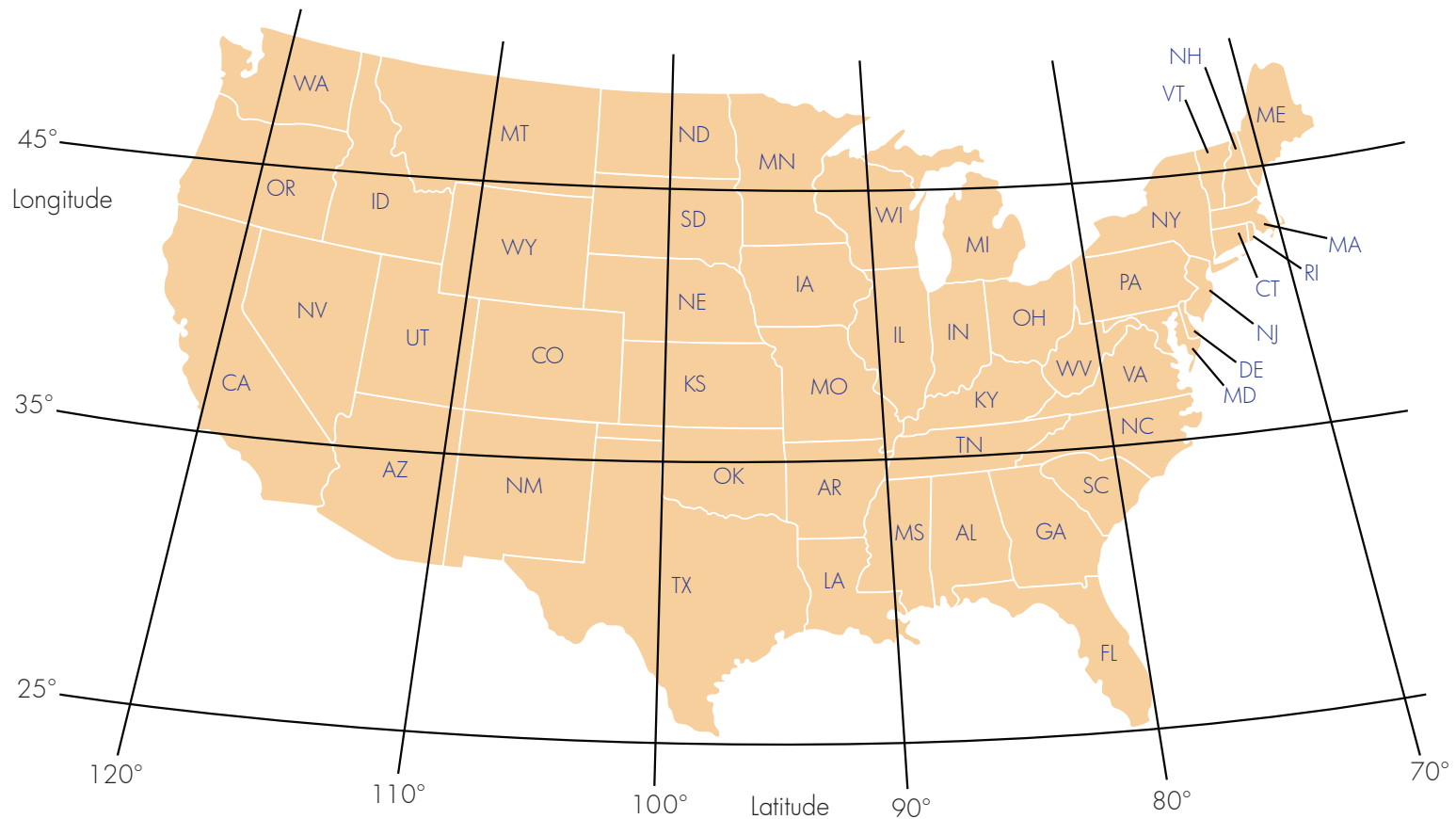


1. This location is at 30° north and 97° west: Texas 2. This location is at 41° north and 78° west: Pennsylvania
3. This location is at 39° north and 120° west: California 4. This location is at 46° north and 108° west: Montana

Answer Sheet

State Coordinates

Can you name the states located at the coordinates given below?

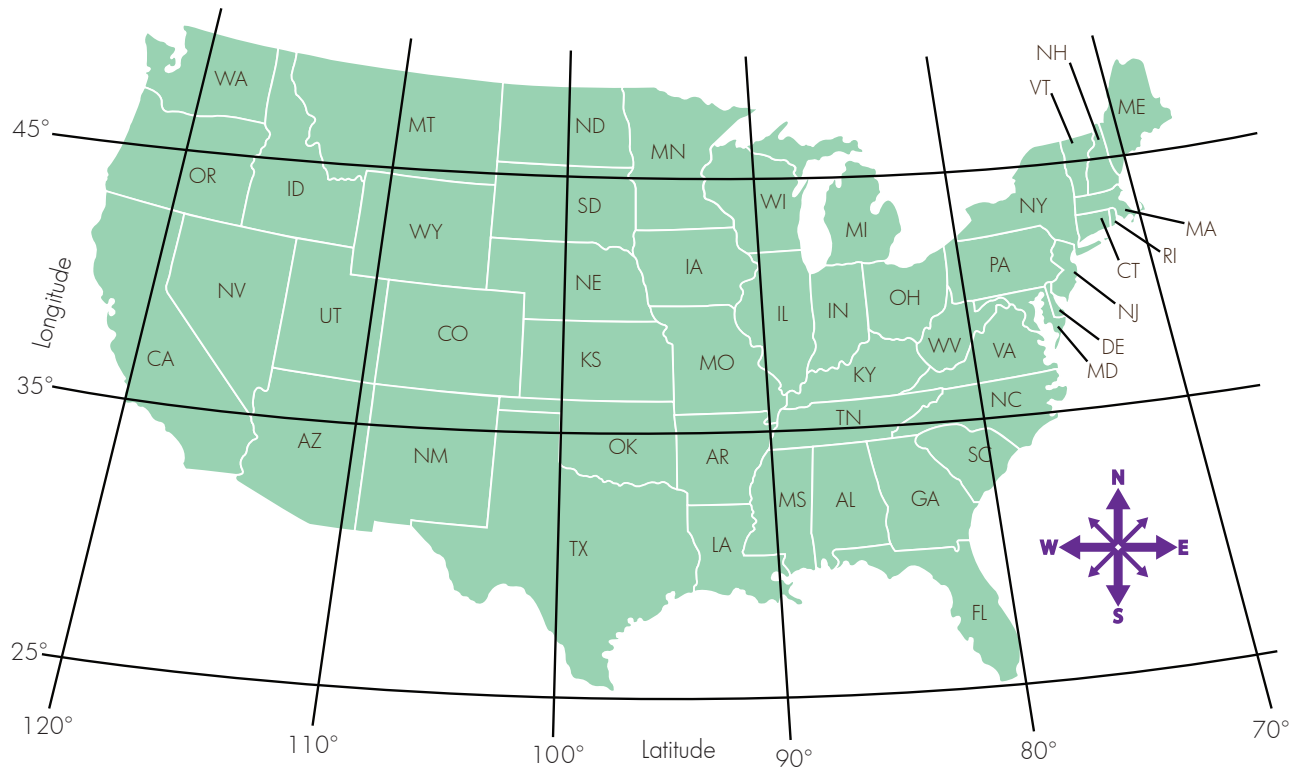


1. This location is at 37° north and 105° west: Colorado 2. This location is at 27° north and 82° west: Florida
3. This location is at 44° north and 75° west: New York 4. This location is at 38° north and 91° west: Missouri

Answer Sheet

State Scavenger Hunt

Zach and Ronnie are on a state scavenger hunt.
Use the clues below to help them find the states they're looking for!



1. Start in Wyoming. Move one state north and then 3 states to the east.
What state are you in? **Wisconsin**
2. Start in Alabama. Move one state north. Follow the 35° latitude line west 4 states. What state are you in? **New Mexico**
3. Start in east Michigan. Move to the state that is south and east.
Move one state northeast. Then go one more state north. What state are you in? **New York**
4. Start in South Dakota. Follow the 100° longitude line 2 states south.
Go 2 states west. Then go to the bordering northwest state. What state are you in? **Idaho**