

Tracking Time

2nd
GRADE

January

February

March

December

November

April

May

June

July

Sunday	Monday	Tuesday	Wednesday	Thursday	Friday	Saturday
1	2	3	4	5	6	7
8	9	10	11	12	13	14
15	16	17	18	19	20	21
22	23	24	25			
		31				



October

September

August

Table of Contents

Tracking Time


- 12 Months
 - Day & Date #11
 - Day & Date #12
 - Day & Date: January
 - Day & Date: February
 - Day & Date: March
 - Day & Date: April
 - Day & Date: May
 - Day & Date: June
 - Day & Date: July
 - Day & Date: August
 - Day & Date: September
 - Day & Date: October
 - Day & Date: November
 - Day & Date: December
 - Tell the Time! 1
 - Tell the Time! 2
- Quarter Till vs. Quarter Past
 - Draw the Time
 - A Trip Downtown
 - A Trip to the Zoo
- Elapsed Time: Easy
 - Time 2 Tell Time 1
 - Time 2 Tell Time 2
 - Time 2 Tell Time 3
 - Time 2 Tell Time 4
 - Time 2 Tell Time 5

Certificate of Completion


Want more workbooks? Join [Education.com Plus](http://www.education.com/education-plus/) to save time and money.
<http://www.education.com/education-plus/>

The 12 Months

Read this poem to help you remember how many days are in each month.
Then fill in the days below.



Thirty days hath September,
April, June, and November.
All the rest have thirty-one,
except February, it has twenty-eight we find,
unless it's leap year, then it has twenty-nine!



January has _____ days.

February has _____ days.

March has _____ days.

April has _____ days.

May has _____ days.

June has _____ days.

July has _____ days.

August has _____ days.

September has _____ days.

October has _____ days.

November has _____ days.

December has _____ days.



Day & Date #11

Answer the following questions using the calendar below.

1. What day on the calendar is November 24?

2. How many Wednesdays are there in November?

3. Ryan's birthday is on the third Tuesday of November.
Write the date.

5. Write the date of the first day of November in 2 different ways.

NOVEMBER 2011

S M T W T F S

		1	2	3	4	5
6	7	8	9	10	11	12
13	14	15	16	17	18	19
20	21	22	23	24	25	26
27	28	29	30			

4. Ann goes to the dentist on the first Friday of the month.
Write the date.

Day & Date #12

Answer the following questions using the calendar below.

1. What day on the calendar is December 6?

2. How many Mondays are there in December?

3. Tony goes to the circus on the second Tuesday of December. Write the date.

5. Write the date of the second day of December in 2 different ways.

DECEMBER 2011

S M T W T F S

				1	2	3
4	5	6	7	8	9	10
11	12	13	14	15	16	17
18	19	20	21	22	23	24
25	26	27	28	29	30	31

4. Flora's test is on the fifth Friday of the month. Write the date.

Answer the following questions using the calendar below.

1. What day on the calendar is January 17?

2. How many Fridays are there in January?

3. Dr. Martin Luther King Jr.'s birthday is on the sixteenth day of January. Write the date.

5. Choose a date in January and write it in 2 different ways.

JANUARY 2012

S M T W T F S

1	2	3	4	5	6	7
8	9	10	11	12	13	14
15	16	17	18	19	20	21
22	23	24	25	26	27	28
29	30	31				

4. Danny's party is three weeks from New Year's Day. Write the date.

Answer the following questions using the calendar below.

1. What day on the calendar is February 10?

2. How many Wednesdays are there in February?

3. Presidents' Day is on the twentieth day of February. Write the date.

5. Choose a date in February and write it in 2 different ways.

FEBRUARY 2012

S M T W T F S

			1	2	3	4
5	6	7	8	9	10	11
12	13	14	15	16	17	18
19	20	21	22	23	24	25
26	27	28	29			

4. Barbara has a test 3 days after Valentine's Day. Write the date.

DAY & DATE

March

Answer the following questions using the calendar below.

1. What day on the calendar is March 25?

2. How many Fridays are there in March?

3. St. Patrick's Day is on the seventeenth day of March. Write the date.

5. Choose a date in March and write it in 2 different ways.

MARCH 2012

S M T W T F S

				1	2	3
4	5	6	7	8	9	10
11	12	13	14	15	16	17
18	19	20	21	22	23	24
25	26	27	28	29	30	31

4. Hal is going on vacation on March 12. He will be gone for 2 weeks. When will he return?

DAY & DATE

April

Answer the following questions using the calendar below.

1. What day on the calendar is April 1?

2. How many Saturdays are there in April?

3. Easter is celebrated on the eighth day of April.
Write the date.

5. Choose a date in April and write it in 2 different ways.

APRIL 2012

S M T W T F S

1	2	3	4	5	6	7
8	9	10	11	12	13	14
15	16	17	18	19	20	21
22	23	24	25	26	27	28
29	30					

4. Mark's baseball game is on the last day of April.
Write the date.

Answer the following questions using the calendar below.

1. What day on the calendar is May 19?

2. How many Fridays are there in May?

3. Memorial Day is on the twenty-eighth day of March. Write the date.

5. Choose a date in May and write it in 2 different ways.

MAY 2012

S M T W T F S

		1	2	3	4	5
6	7	8	9	10	11	12
13	14	15	16	17	18	19
20	21	22	23	24	25	26
27	28	29	30	31		

4. Margaret has a field trip 1 week before Memorial Day. Write the date.

Answer the following questions using the calendar below.

1. What day on the calendar is June 13?

2. How many Tuesdays are there in June?

3. The first day of summer is on the twentieth day of June. Write the date.

5. Choose a date in June and write it in 2 different ways.

JUNE 2012

S M T W T F S

					1	2
3	4	5	6	7	8	9
10	11	12	13	14	15	16
17	18	19	20	21	22	23
24	25	26	27	28	29	30

4. Tim's last day of school is on the third Friday of the month. Write the date.

DAY & DATE

July

Answer the following questions using the calendar below.

1. What day on the calendar is July 27?

2. How many Tuesdays are there in July?

3. Independence Day is on the fourth day of July.
Write the date.

5. Choose a date in July and write it in 2 different ways.

JULY 2012

S M T W T F S

1	2	3	4	5	6	7
8	9	10	11	12	13	14
15	16	17	18	19	20	21
22	23	24	25	26	27	28
29	30	31				

4. Ted's birthday is exactly 2 weeks from Independence Day. Write the date.

Answer the following questions using the calendar below.

1. What day on the calendar is August 16?

2. How many Sundays are there in August?

3. Marvin is going rafting 3 weeks from August 1. Write the date.

5. Choose a date in August and write it in 2 different ways.

AUGUST 2012

S M T W T F S

			1	2	3	4
5	6	7	8	9	10	11
12	13	14	15	16	17	18
19	20	21	22	23	24	25
26	27	28	29	30	31	

4. Hailey will go rafting 1 week after Marvin. Write the date.

DAY & DATE

September

Answer the following questions using the calendar below.

1. What day on the calendar is September 5?

2. How many Thursdays are there in September?

3. Labor Day is on the third day of September.
Write the date.

5. Choose a date in September and write it in 2 different ways.

SEPTEMBER 2012

S M T W T F S

						1
2	3	4	5	6	7	8
9	10	11	12	13	14	15
16	17	18	19	20	21	22
23	24	25	26	27	28	29
30						

4. Janice goes back to school 1 week after Labor Day.
Write the date.

Answer the following questions using the calendar below.

1. What day on the calendar is October 26?

2. How many Tuesdays are there in October?

3. Columbus Day is on the eighth day of October.
Write the date.

5. Choose a date in October and write it in 2 different ways.

OCTOBER 2012

S M T W T F S

	1	2	3	4	5	6
7	8	9	10	11	12	13
14	15	16	17	18	19	20
21	22	23	24	25	26	27
28	29	30	31			

4. Halloween is on the last day of October.
Write the date.

DAY & DATE

November

Answer the following questions using the calendar below.

1. What day on the calendar is November 12?

2. How many Fridays are there in November?

3. Veteran's Day is on the eleventh day of November. Write the date.

5. Choose a date in November and write it in 2 different ways.

NOVEMBER 2012

S M T W T F S

				1	2	3
4	5	6	7	8	9	10
11	12	13	14	15	16	17
18	19	20	21	22	23	24
25	26	27	28	29	30	

4. Thanksgiving is on the fourth Thursday of November. Write the date.

Answer the following questions using the calendar below.

1. What day on the calendar is December 20?

2. How many Mondays are there in December?

3. Christmas is on the twenty-fifth day of December. Write the date.

5. Choose a date in December and write it in 2 different ways.

DECEMBER 2012


S M T W T F S

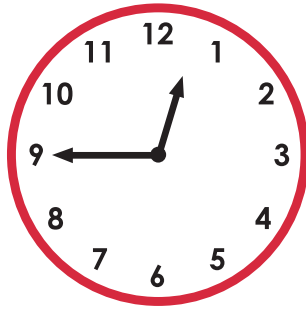
						1
2	3	4	5	6	7	8
9	10	11	12	13	14	15
16	17	18	19	20	21	22
23	24	25	26	27	28	29
30	31					

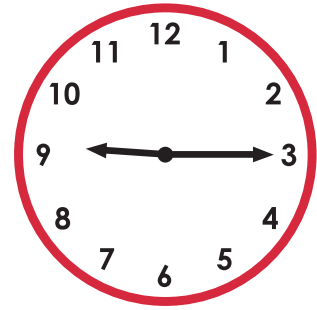
4. Hanukkah begins on the ninth day of December. Write the date.


Tell the Time! 1

Write the time underneath each clock.

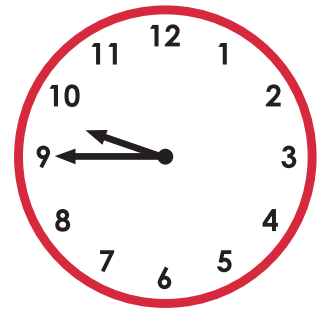


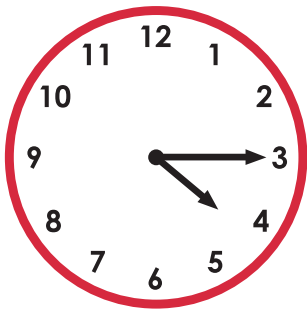











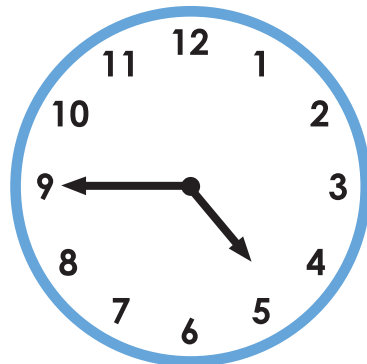
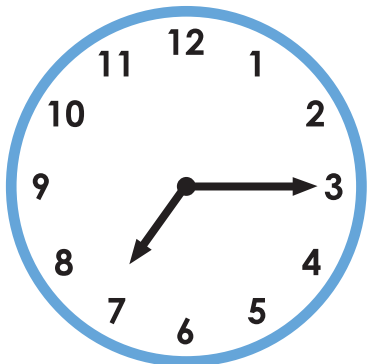
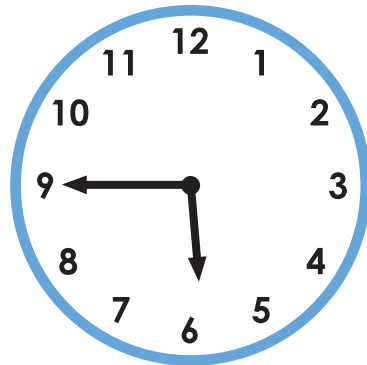

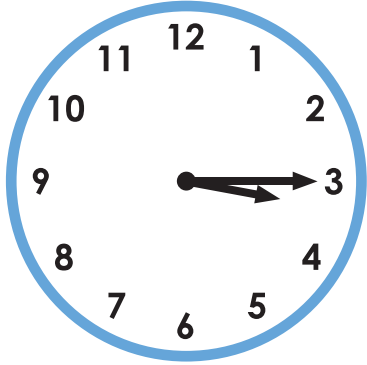






Tell the Time! 2

Write the time underneath each clock.



Quarter Till vs. Quarter Past



Quarter till means there are 15 minutes left until the next hour.
Quarter past means it is 15 minutes past the hour.

Look at the times below and write if the time is a quarter till or a quarter past the hour.


10:15

9:45

12:45



Read the conversation below and answer the question.



Michael: What time is it now?
Lucy: It's a quarter to eleven.
Michael: Oh great! I still have time.
Lucy: When does the show start?
Michael: At a quarter past eleven.




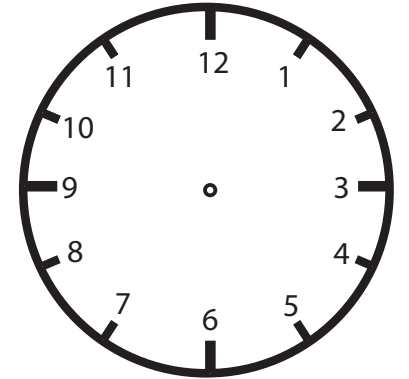
What time is the show? Write the time in digital form.

Draw the Time

Read the sentences and draw hands on the clocks to match the time.



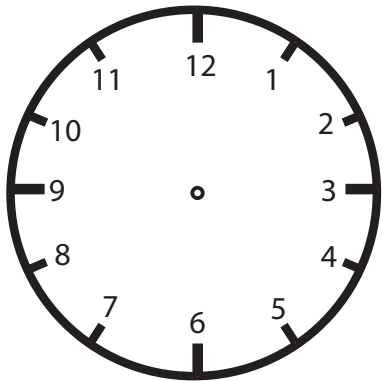
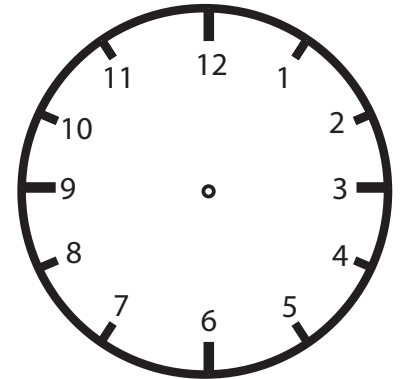
Steve's birthday party will start at half past three.




It's a quarter past ten already!
You should go to bed.



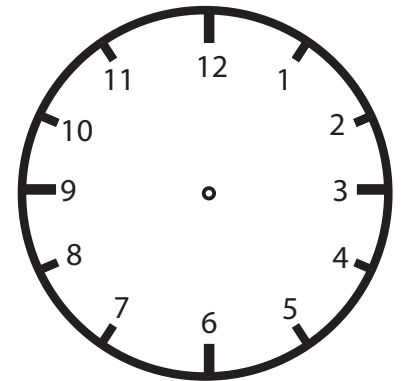
The plane will arrive at quarter
to noon.



Lucy finished reading at half past five.



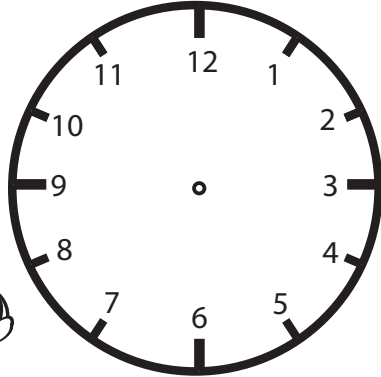

Ashley left her house at quarter to three.



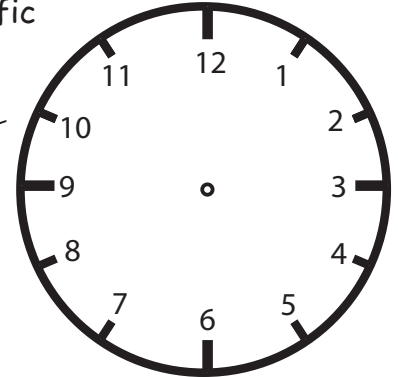

A Trip Downtown

Draw hands on each clock to show the correct time for each activity.

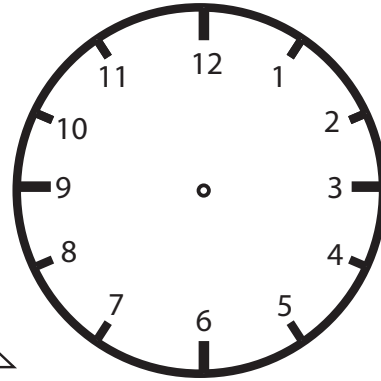

1. Leave the house at 9:30 am.





2. Stop at a traffic light at 9:45 am.



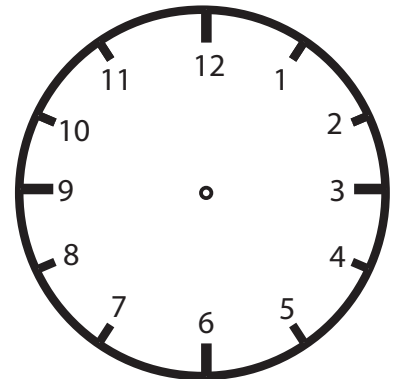

3. Wait for a pedestrian to cross the street at 10:10 am.



4. Arrive downtown at 10:25 am.



5. Meet your friend at 11:05 am.

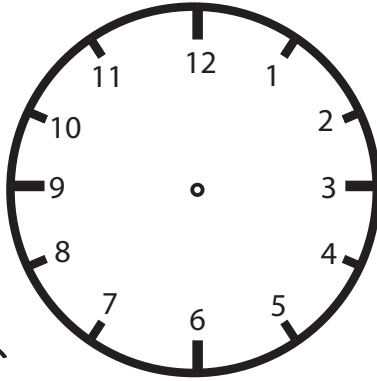



Challenge!

How long did your trip downtown take?


A Trip to the Zoo

Draw the hands of each clock to show the correct time for each activity.

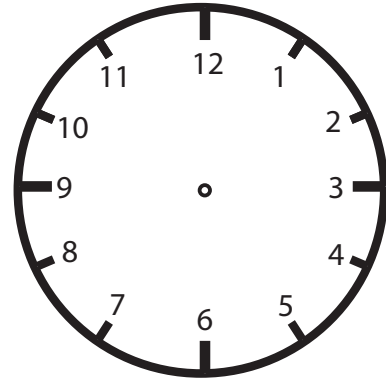
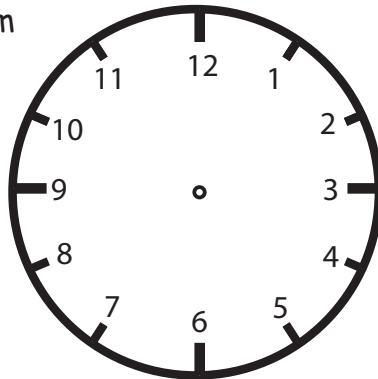


1. Arrive at the zoo at 11.35 am.

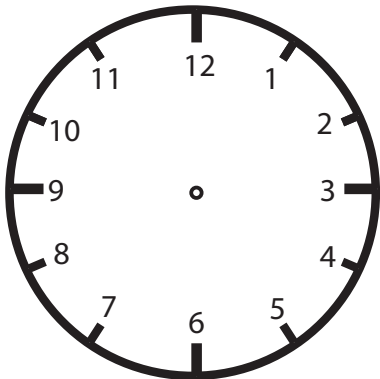
2. Watch the penguin show at 11:50 am.




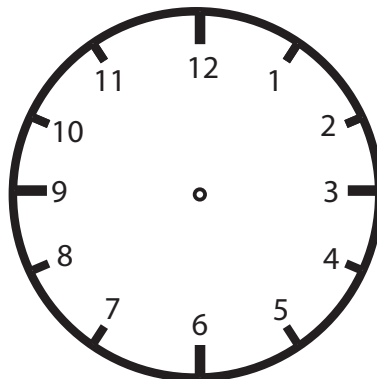
3. Visit the panda kingdom at 1.20 pm.



4. Have an ice cream at 3.45 pm.



5. Leave the zoo at 4.10 pm.



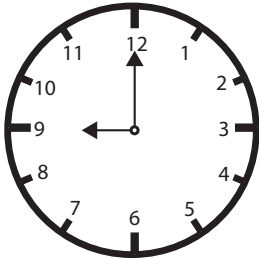
Challenge!

How much time did you spend in total at the zoo? _____


Elapsed Time: Easy

Read the analog clocks and write the time in digital form. Then answer the questions.



Start



Finish

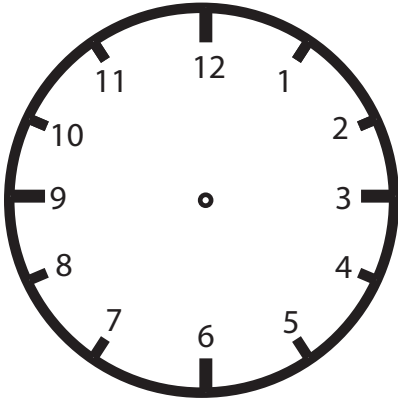
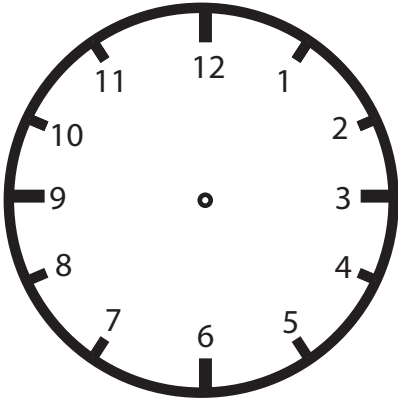


How many minutes have passed?



How many hours have passed?

Draw hands on the clocks to match the sentence: Judy went to the fair at 8:00pm and came home at 10:03pm.





How many hours and minutes have passed?

TIME 2 TELL TIME

1

Can you match the time shown?

Draw a line to connect the 2 clocks that show the same time



TIME 2 TELL TIME


2

Can you tell what time it is?


Write down the time you see on each clock.

EXAMPLE


HOUR	MINUTE
10	20




____ : ____




____ : ____



____ : ____



____ : ____




____ : ____

TIME 2 TELL TIME

Can you tell what time it is?


Circle the correct time shown on each clock

3




12:50 8:00

11:25 12:40




6:15 10:45

11:45 2:35



8:10 3:30

8:05 1:05



9:15 8:35


6:35 7:20

TIME 2 TELL TIME

4

Can you match the time shown?

Draw a line to connect the 2 clocks that show the same time



TIME 2 TELL TIME




Can you tell what time it is?


Write down the time you see on each clock.

EXAMPLE


HOUR	MINUTE
5	00




____ : ____




____ : ____



____ : ____



____ : ____



____ : ____

Great job!

is an Education.com math superstar

