

DIVIDE

and Conquer

3RD
Grade



$15 \div 3 =$



$10 \div 2 =$



$20 \div 4 =$



**DIVISION
CHAMPIONSHIP**




Table of Contents

Divide and Conquer

Finding the Quotient! *

Baseball Division #1 *

Baseball Division #2 *

Baseball Division #3 *

Baseball Division #4 *

Baseball Division #5 *

Basketball Division #1 *

Basketball Division #2 *

Basketball Division #3 *

Basketball Division #4 *

Basketball Division #5 *

Football Division #1 *

Football Division #2 *

Football Division #3 *

Football Division #4 *

Football Division #5 *

Donut Division *

Snail Division *

Mushroom Math *

Picnicking Signs *

Beach Math *

Let's Be Fair *

Divide 'Em Up *

Math-Go-Round #1

Math-Go-Round #2

Math-Go-Round #3

Math-Go-Round #4

Certificate of Completion

Answer Sheets

* *Has an Answer Sheet*

Want more workbooks? Join [Education.com Plus](http://www.education.com/education-plus/) to save time and money.
<http://www.education.com/education-plus/>

Finding the Quotient!

Divide to find the **quotient**.

Division is the process of finding how many times one number will fit into another number. Division is the opposite, or inverse, operation of multiplication.

$$\begin{array}{c} 12 \div 2 = 6 \\ \swarrow \quad \uparrow \quad \swarrow \\ \text{dividend} \quad \text{divisor} \quad \text{quotient} \end{array}$$

$$\begin{array}{r} 6 \leftarrow \text{quotient} \\ 2 \overline{)12} \leftarrow \text{dividend} \end{array}$$

The number you are dividing is the **dividend**.

The number you are dividing by is the **divisor**.

The answer to a division problem is the **quotient**.

$$16 \div 2 = 8 \quad 2 \overline{)16}$$

HINT:

Use your multiplication facts to help you find the answer.

$$2 \times ? = 16$$

The answer is 8.

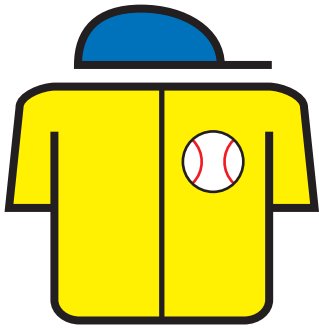
$$12 \div 4 = \square \quad 4 \overline{)12}$$

$$15 \div 3 = \square \quad 3 \overline{)15}$$


$$9 \div 3 = \square \quad 3 \overline{)9}$$

$$10 \div 5 = \square \quad 5 \overline{)10}$$

BASEBALL DIVISION #1



Batter up! Step up to the plate and swing for the fences. Solve the following division problems and you'll be an All-Star!



$$40 \div 8 = \underline{\quad}$$

$$21 \div 7 = \underline{\quad}$$

$$18 \div 3 = \underline{\quad}$$

$$27 \div 3 = \underline{\quad}$$

$$8 \div 4 = \underline{\quad}$$

$$44 \div 11 = \underline{\quad}$$

$$72 \div 9 = \underline{\quad}$$

$$12 \div 6 = \underline{\quad}$$

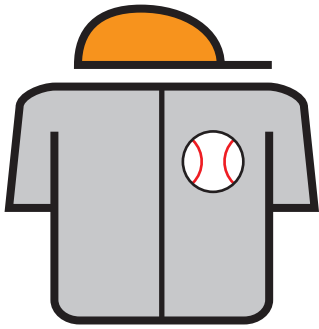
$$10 \div 2 = \underline{\quad}$$

$$9 \div 3 = \underline{\quad}$$


$$28 \div 7 = \underline{\quad}$$

$$8 \div 2 = \underline{\quad}$$

BASEBALL DIVISION #2



Batter up! Step up to the plate and swing for the fences. Solve the following division problems and you'll be an All-Star!



$$10 \div 1 = \underline{\quad}$$

$$25 \div 5 = \underline{\quad}$$

$$48 \div 8 = \underline{\quad}$$

$$21 \div 3 = \underline{\quad}$$

$$6 \div 3 = \underline{\quad}$$

$$36 \div 3 = \underline{\quad}$$

$$9 \div 1 = \underline{\quad}$$

$$30 \div 5 = \underline{\quad}$$

$$12 \div 3 = \underline{\quad}$$

$$20 \div 2 = \underline{\quad}$$

$$36 \div 9 = \underline{\quad}$$


$$9 \div 3 = \underline{\quad}$$

BASEBALL

DIVISION #3



Batter up! Step up to the plate and swing for the fences. Solve the following division problems and you'll be an All-Star!



$$42 \div 7 = \underline{\quad}$$

$$20 \div 4 = \underline{\quad}$$

$$18 \div 6 = \underline{\quad}$$

$$16 \div 4 = \underline{\quad}$$

$$36 \div 6 = \underline{\quad}$$

$$24 \div 2 = \underline{\quad}$$

$$6 \div 2 = \underline{\quad}$$

$$10 \div 5 = \underline{\quad}$$

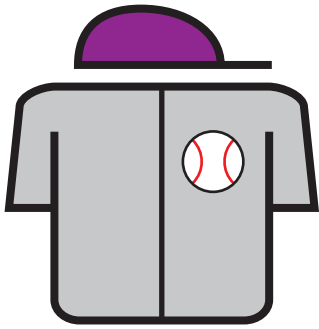
$$24 \div 8 = \underline{\quad}$$

$$8 \div 4 = \underline{\quad}$$


$$45 \div 9 = \underline{\quad}$$

$$7 \div 1 = \underline{\quad}$$

BASEBALL DIVISION #4



Batter up! Step up to the plate and swing for the fences. Solve the following division problems and you'll be an All-Star!



$$10 \div 1 = \underline{\quad}$$

$$14 \div 7 = \underline{\quad}$$

$$18 \div 9 = \underline{\quad}$$

$$20 \div 5 = \underline{\quad}$$

$$56 \div 8 = \underline{\quad}$$

$$16 \div 4 = \underline{\quad}$$

$$28 \div 7 = \underline{\quad}$$

$$9 \div 9 = \underline{\quad}$$

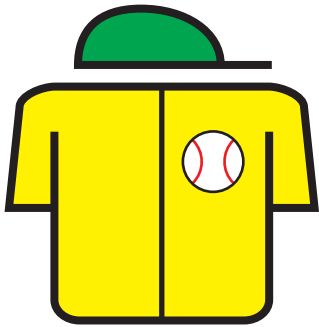
$$12 \div 4 = \underline{\quad}$$

$$4 \div 2 = \underline{\quad}$$


$$10 \div 5 = \underline{\quad}$$

$$30 \div 5 = \underline{\quad}$$

BASEBALL DIVISION #5



Batter up! Step up to the plate and swing for the fences. Solve the following division problems and you'll be an All-Star!



$$18 \div 9 = \underline{\quad}$$

$$30 \div 3 = \underline{\quad}$$

$$16 \div 8 = \underline{\quad}$$

$$14 \div 2 = \underline{\quad}$$

$$49 \div 7 = \underline{\quad}$$

$$15 \div 3 = \underline{\quad}$$

$$6 \div 2 = \underline{\quad}$$

$$12 \div 3 = \underline{\quad}$$

$$6 \div 1 = \underline{\quad}$$

$$54 \div 6 = \underline{\quad}$$

$$12 \div 6 = \underline{\quad}$$

$$28 \div 4 = \underline{\quad}$$




BASKETBALL DIVISION #1

Ready to take the court and run a fast break to learning? Solve the following division problems and you'll be an All-Star!


★ ☆ ★
 $8 \div 8 = \underline{\quad}$




★ ☆ ★
 $20 \div 2 = \underline{\quad}$




★ ☆ ★
 $48 \div 6 = \underline{\quad}$




★ ☆ ★
 $12 \div 6 = \underline{\quad}$




★ ☆ ★
 $15 \div 3 = \underline{\quad}$




★ ☆ ★
 $21 \div 7 = \underline{\quad}$




★ ☆ ★
 $18 \div 3 = \underline{\quad}$




★ ☆ ★
 $14 \div 2 = \underline{\quad}$




★ ☆ ★
 $10 \div 2 = \underline{\quad}$




★ ☆ ★
 $6 \div 1 = \underline{\quad}$



★ ☆ ★
 $20 \div 4 = \underline{\quad}$



★ ☆ ★
 $40 \div 5 = \underline{\quad}$







BASKETBALL DIVISION #2

Ready to take the court and run a fast break to learning? Solve the following division problems and you'll be an All-Star!


★ ☆ ★
 $6 \div 3 = \underline{\quad}$




★ ☆ ★
 $10 \div 1 = \underline{\quad}$




★ ☆ ★
 $35 \div 7 = \underline{\quad}$




★ ☆ ★
 $12 \div 6 = \underline{\quad}$




★ ☆ ★
 $27 \div 3 = \underline{\quad}$




★ ☆ ★
 $25 \div 5 = \underline{\quad}$




★ ☆ ★
 $14 \div 7 = \underline{\quad}$



★ ☆ ★
 $21 \div 3 = \underline{\quad}$




★ ☆ ★
 $12 \div 3 = \underline{\quad}$



★ ☆ ★
 $3 \div 1 = \underline{\quad}$



★ ☆ ★
 $48 \div 8 = \underline{\quad}$



★ ☆ ★
 $9 \div 3 = \underline{\quad}$






BASKETBALL DIVISION #3

Ready to take the court and run a fast break to learning? Solve the following division problems and you'll be an All-Star!


★ ☆ ★
 $9 \div 3 = \underline{\quad}$




★ ☆ ★
 $16 \div 8 = \underline{\quad}$




★ ☆ ★
 $36 \div 6 = \underline{\quad}$




★ ☆ ★
 $10 \div 2 = \underline{\quad}$




★ ☆ ★
 $36 \div 9 = \underline{\quad}$




★ ☆ ★
 $20 \div 4 = \underline{\quad}$




★ ☆ ★
 $18 \div 6 = \underline{\quad}$




★ ☆ ★
 $42 \div 7 = \underline{\quad}$




★ ☆ ★
 $24 \div 8 = \underline{\quad}$




★ ☆ ★
 $8 \div 4 = \underline{\quad}$



★ ☆ ★
 $40 \div 4 = \underline{\quad}$



★ ☆ ★
 $7 \div 1 = \underline{\quad}$






BASKETBALL DIVISION #4

Ready to take the court and run a fast break to learning? Solve the following division problems and you'll be an All-Star!


★ ☆ ★
 $6 \div 3 = \underline{\quad}$




★ ☆ ★
 $16 \div 4 = \underline{\quad}$




★ ☆ ★
 $30 \div 3 = \underline{\quad}$




★ ☆ ★
 $12 \div 6 = \underline{\quad}$




★ ☆ ★
 $22 \div 2 = \underline{\quad}$




★ ☆ ★
 $14 \div 7 = \underline{\quad}$




★ ☆ ★
 $49 \div 7 = \underline{\quad}$



★ ☆ ★
 $35 \div 7 = \underline{\quad}$




★ ☆ ★
 $12 \div 4 = \underline{\quad}$




★ ☆ ★
 $4 \div 2 = \underline{\quad}$



★ ☆ ★
 $10 \div 5 = \underline{\quad}$



★ ☆ ★
 $8 \div 2 = \underline{\quad}$







BASKETBALL DIVISION #5

Ready to take the court and run a fast break to learning? Solve the following division problems and you'll be an All-Star!

★ ☆ ★
 $10 \div 1 = \underline{\quad}$




★ ☆ ★
 $15 \div 3 = \underline{\quad}$




★ ☆ ★
 $6 \div 2 = \underline{\quad}$




★ ☆ ★
 $32 \div 8 = \underline{\quad}$




★ ☆ ★
 $18 \div 9 = \underline{\quad}$




★ ☆ ★
 $24 \div 4 = \underline{\quad}$




★ ☆ ★
 $16 \div 8 = \underline{\quad}$




★ ☆ ★
 $14 \div 2 = \underline{\quad}$




★ ☆ ★
 $33 \div 3 = \underline{\quad}$




★ ☆ ★
 $8 \div 2 = \underline{\quad}$




★ ☆ ★
 $12 \div 6 = \underline{\quad}$



★ ☆ ★
 $45 \div 5 = \underline{\quad}$



FOOTBALL DIVISION #1



Kick off! Time to take the field and score a touchdown for the home team. Solve the following division problems and you'll be an All-Pro!

$10 \div 2 = \underline{\quad}$

$9 \div 3 = \underline{\quad}$

$20 \div 4 = \underline{\quad}$

$8 \div 2 = \underline{\quad}$

$15 \div 3 = \underline{\quad}$

$21 \div 7 = \underline{\quad}$

$18 \div 3 = \underline{\quad}$

$14 \div 2 = \underline{\quad}$


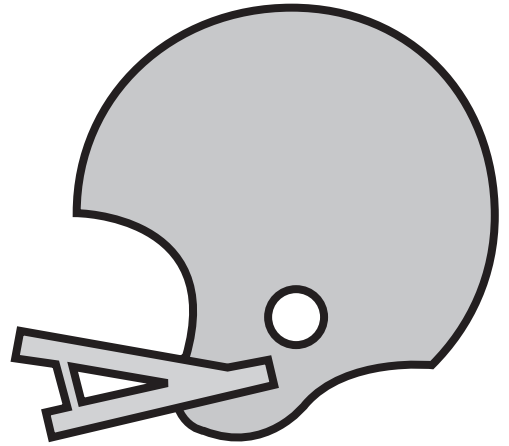
$8 \div 4 = \underline{\quad}$

$16 \div 4 = \underline{\quad}$

$6 \div 2 = \underline{\quad}$

$12 \div 6 = \underline{\quad}$

FOOTBALL DIVISION #2



Kick off! Time to take the field and score a touchdown for the home team. Solve the following division problems and you'll be an All-Pro!

$12 \div 3 = \underline{\quad}$

$5 \div 1 = \underline{\quad}$

$15 \div 5 = \underline{\quad}$

$9 \div 3 = \underline{\quad}$

$16 \div 4 = \underline{\quad}$

$25 \div 5 = \underline{\quad}$

$14 \div 7 = \underline{\quad}$

$21 \div 3 = \underline{\quad}$


$6 \div 3 = \underline{\quad}$

$10 \div 2 = \underline{\quad}$

$8 \div 2 = \underline{\quad}$

$12 \div 6 = \underline{\quad}$

FOOTBALL DIVISION #3



Kick off! Time to take the field and score a touchdown for the home team. Solve the following division problems and you'll be an All-Pro!

$24 \div 8 = \underline{\quad}$

$8 \div 4 = \underline{\quad}$

$12 \div 4 = \underline{\quad}$

$7 \div 1 = \underline{\quad}$

$15 \div 3 = \underline{\quad}$

$20 \div 4 = \underline{\quad}$

$18 \div 6 = \underline{\quad}$

$16 \div 4 = \underline{\quad}$

$9 \div 3 = \underline{\quad}$

$16 \div 8 = \underline{\quad}$

$6 \div 2 = \underline{\quad}$

$10 \div 5 = \underline{\quad}$

FOOTBALL DIVISION #4



Kick off! Time to take the field and score a touchdown for the home team. Solve the following division problems and you'll be an All-Pro!



$12 \div 4 = \underline{\quad}$

$4 \div 2 = \underline{\quad}$

$10 \div 5 = \underline{\quad}$

$8 \div 2 = \underline{\quad}$

$22 \div 2 = \underline{\quad}$

$14 \div 7 = \underline{\quad}$

$18 \div 9 = \underline{\quad}$

$20 \div 5 = \underline{\quad}$


$6 \div 3 = \underline{\quad}$

$16 \div 4 = \underline{\quad}$

$4 \div 1 = \underline{\quad}$

$12 \div 6 = \underline{\quad}$

FOOTBALL DIVISION #5



Kick off! Time to take the field and score a touchdown for the home team. Solve the following division problems and you'll be an All-Pro!



$10 \div 5 = \underline{\quad}$	$8 \div 2 = \underline{\quad}$	$12 \div 6 = \underline{\quad}$	$4 \div 2 = \underline{\quad}$
---------------------------------	--------------------------------	---------------------------------	--------------------------------

$18 \div 9 = \underline{\quad}$	$24 \div 4 = \underline{\quad}$	$16 \div 8 = \underline{\quad}$	$14 \div 2 = \underline{\quad}$
---------------------------------	---------------------------------	---------------------------------	---------------------------------

$9 \div 3 = \underline{\quad}$	$15 \div 3 = \underline{\quad}$	$6 \div 2 = \underline{\quad}$	$12 \div 3 = \underline{\quad}$
--------------------------------	---------------------------------	--------------------------------	---------------------------------

Donut Division!

Find the quotient.

$$\begin{array}{r} \square \\ 4 \overline{) 16} \end{array}$$

$$\begin{array}{r} \square \\ 2 \overline{) 18} \end{array}$$

$$\begin{array}{r} \square \\ 9 \overline{) 27} \end{array}$$

$$\begin{array}{r} \square \\ 6 \overline{) 54} \end{array}$$

$$\begin{array}{r} \square \\ 8 \overline{) 8} \end{array}$$

$$\begin{array}{r} \square \\ 3 \overline{) 21} \end{array}$$

$$\begin{array}{r} \square \\ 4 \overline{) 20} \end{array}$$

$$\begin{array}{r} \square \\ 8 \overline{) 64} \end{array}$$

$$\begin{array}{r} \square \\ 2 \overline{) 10} \end{array}$$

$$\begin{array}{r} \square \\ 3 \overline{) 12} \end{array}$$

$$\begin{array}{r} \square \\ 6 \overline{) 48} \end{array}$$

$$\begin{array}{r} \square \\ 7 \overline{) 28} \end{array}$$

$$\begin{array}{r} \square \\ 7 \overline{) 49} \end{array}$$

$$\begin{array}{r} \square \\ 8 \overline{) 56} \end{array}$$

$$\begin{array}{r} \square \\ 6 \overline{) 24} \end{array}$$

$$\begin{array}{r} \square \\ 5 \overline{) 25} \end{array}$$

$$\begin{array}{r} \square \\ 3 \overline{) 18} \end{array}$$

$$\begin{array}{r} \square \\ 9 \overline{) 63} \end{array}$$


$$\begin{array}{r} \square \\ 7 \overline{) 70} \end{array}$$

$$\begin{array}{r} \square \\ 11 \overline{) 66} \end{array}$$



Snail Division

Find the quotient.



$$\begin{array}{r} \square \\ 3 \overline{)9} \end{array}$$

$$\begin{array}{r} \square \\ 5 \overline{)15} \end{array}$$

$$\begin{array}{r} \square \\ 4 \overline{)4} \end{array}$$

$$\begin{array}{r} \square \\ 2 \overline{)14} \end{array}$$

$$\begin{array}{r} \square \\ 5 \overline{)40} \end{array}$$

$$\begin{array}{r} \square \\ 2 \overline{)22} \end{array}$$

$$\begin{array}{r} \square \\ 3 \overline{)18} \end{array}$$

$$\begin{array}{r} \square \\ 9 \overline{)36} \end{array}$$

$$\begin{array}{r} \square \\ 3 \overline{)24} \end{array}$$

$$\begin{array}{r} \square \\ 7 \overline{)21} \end{array}$$

$$\begin{array}{r} \square \\ 2 \overline{)8} \end{array}$$

$$\begin{array}{r} \square \\ 8 \overline{)32} \end{array}$$

$$\begin{array}{r} \square \\ 4 \overline{)16} \end{array}$$

$$\begin{array}{r} \square \\ 6 \overline{)36} \end{array}$$

$$\begin{array}{r} \square \\ 3 \overline{)30} \end{array}$$

$$\begin{array}{r} \square \\ 4 \overline{)12} \end{array}$$

$$\begin{array}{r} \square \\ 2 \overline{)10} \end{array}$$

$$\begin{array}{r} \square \\ 3 \overline{)27} \end{array}$$

$$\begin{array}{r} \square \\ 1 \overline{)5} \end{array}$$

$$\begin{array}{r} \square \\ 6 \overline{)24} \end{array}$$



Mushroom Math

Multiply or divide.



$$\begin{array}{r} \square \\ 2 \overline{)14} \end{array}$$

$$\begin{array}{r} 5 \\ \times 4 \\ \hline \end{array}$$

$$\begin{array}{r} \square \\ 7 \overline{)42} \end{array}$$

$$\begin{array}{r} 6 \\ \times 8 \\ \hline \end{array}$$

$$\begin{array}{r} \square \\ 8 \overline{)72} \end{array}$$

$$\begin{array}{r} 9 \\ \times 4 \\ \hline \end{array}$$

$$\begin{array}{r} 7 \\ \times 3 \\ \hline \end{array}$$

$$\begin{array}{r} \square \\ 3 \overline{)15} \end{array}$$

$$\begin{array}{r} \square \\ 7 \overline{)21} \end{array}$$

$$\begin{array}{r} 2 \\ \times 8 \\ \hline \end{array}$$

$$\begin{array}{r} \square \\ 6 \overline{)24} \end{array}$$

$$\begin{array}{r} 6 \\ \times 6 \\ \hline \end{array}$$

$$\begin{array}{r} 7 \\ \times 5 \\ \hline \end{array}$$

$$\begin{array}{r} \square \\ 8 \overline{)64} \end{array}$$

$$\begin{array}{r} 10 \\ \times 2 \\ \hline \end{array}$$

$$\begin{array}{r} \square \\ 3 \overline{)18} \end{array}$$

$$\begin{array}{r} 62 \\ \times 4 \\ \hline \end{array}$$

$$\begin{array}{r} \square \\ 11 \overline{)44} \end{array}$$

$$\begin{array}{r} \square \\ 10 \overline{)50} \end{array}$$

$$\begin{array}{r} 33 \\ \times 5 \\ \hline \end{array}$$

Picnicking Signs

The multiplication and division signs are having a picnic. While they're gone, it's up to you to fill in the missing **multiplication** or **division sign** in each equation.

$8 \square 2 = 16$

$3 \square 7 = 21$

$24 \square 4 = 6$

$4 \square 4 = 16$

$54 \square 6 = 9$

$12 \square 3 = 4$

$9 \square 3 = 27$

$7 \square 9 = 63$

$64 \square 8 = 8$

$36 \square 4 = 9$

$4 \square 5 = 20$

$21 \square 7 = 3$

$2 \square 9 = 18$

$8 \square 4 = 32$

$40 \square 8 = 5$

$56 \square 7 = 8$

$30 \square 5 = 6$

$6 \square 3 = 18$

$5 \square 6 = 30$


$49 \square 7 = 7$

$2 \square 6 = 12$



Beach Math

Multiply or divide.



$$\begin{array}{r} 8 \\ \times 3 \\ \hline \end{array}$$

$$\begin{array}{r} \square \\ 4 \overline{) 24} \end{array}$$

$$\begin{array}{r} 6 \\ \times 7 \\ \hline \end{array}$$

$$\begin{array}{r} \square \\ 9 \overline{) 45} \end{array}$$

$$\begin{array}{r} \square \\ 3 \overline{) 27} \end{array}$$

$$\begin{array}{r} 9 \\ \times 6 \\ \hline \end{array}$$

$$\begin{array}{r} 3 \\ \times 4 \\ \hline \end{array}$$

$$\begin{array}{r} \square \\ 5 \overline{) 25} \end{array}$$

$$\begin{array}{r} \square \\ 9 \overline{) 81} \end{array}$$

$$\begin{array}{r} \square \\ 3 \overline{) 12} \end{array}$$

$$\begin{array}{r} \square \\ 7 \overline{) 28} \end{array}$$

$$\begin{array}{r} 7 \\ \times 8 \\ \hline \end{array}$$

$$\begin{array}{r} 2 \\ \times 7 \\ \hline \end{array}$$

$$\begin{array}{r} 5 \\ \times 5 \\ \hline \end{array}$$

$$\begin{array}{r} 8 \\ \times 8 \\ \hline \end{array}$$

$$\begin{array}{r} \square \\ 8 \overline{) 32} \end{array}$$

$$\begin{array}{r} 45 \\ \times 4 \\ \hline \end{array}$$

$$\begin{array}{r} 66 \\ \times 2 \\ \hline \end{array}$$

$$\begin{array}{r} \square \\ 7 \overline{) 49} \end{array}$$



Let's Be Fair

Read each word problem and find the **quotient**.

James has 15 cookies.
He wants to divide them and give
an equal number to his 3 friends.
How many cookies should he give
each friend?

$$\boxed{15} \div \boxed{3} = \boxed{5}$$



_____ cookies

Kenny has 14 juice boxes.
He wants to divide them and give
an equal number to his 7 friends.
How many juice boxes should he
give each friend?

$$\boxed{} \div \boxed{} = \boxed{}$$



_____ juice boxes

Samantha has 28 books.
She wants to divide them and
make 4 equal stacks to lend to her
friends. How many books should
she put in each stack?

$$\boxed{} \div \boxed{} = \boxed{}$$



_____ books

Chris has 8 bouncy balls.
He wants to divide them and give
an equal number to his 8 friends.
How many bouncy balls should
he give each friend?

$$\boxed{} \div \boxed{} = \boxed{}$$



_____ bouncy balls

Mary is throwing a party.
She has 20 soap hearts and
wants to divide them equally into
5 party favor bags. How many
soap hearts should she put in
each bag?

$$\boxed{} \div \boxed{} = \boxed{}$$



_____ soap hearts

Ada is bringing balloons to the
class party. She has 30 balloons
and wants to divide them equally
among the 10 students in her
class. How many balloons should
each student get?

$$\boxed{} \div \boxed{} = \boxed{}$$




_____ balloons

Divide 'Em Up

Solve each **division word problem**. Show your work!

Ms. Bran brought 4 evenly divided boxes of muffins to class. There are 36 muffins altogether. How many muffins are in each box?

.....



Pookie's Pet Store has 24 tropical fish. They keep 3 fish in each tank. How many fish tanks are there?

.....



Sally divided her 48 spools of thread evenly into 6 boxes. How many spools of thread did she put in each box?

.....



Ivan scooped 16 scoops of ice cream evenly onto 8 cones. How many scoops of ice cream are on each cone?

.....



Chris has 28 cactus plants. He keeps his cactus plants in even rows of 7. How many cactus plants are in each row?

.....



There are 50 toes in the swimming pool. Each person has 10 toes. How many people are in the pool?

.....



Math-Go-Round

Division | Difficulty: ★☆☆☆

Find a friend and practice your division skills. Find two coins or game pieces and place them on the square labeled **START**. Choose one of the problems to solve and move your game piece clockwise around the board to that problem's answer.

Keep track of the number of corners you go around on each move. For each one, give yourself a point. The player with the most points at the end is the winner.

Keep score with the table below.

	Player 1	Player 2
Round 1		
Round 2		
Round 3		
Round 4		
Round 5		
Round 6		
Round 7		
Round 8		
Total	_____	_____

START +1 Point	33	23	13	11	+1 Point
24	$2 \overline{)46}$	$3 \overline{)93}$	$5 \overline{)55}$	$2 \overline{)28}$	14
31	$4 \overline{)48}$	$3 \overline{)63}$	$5 \overline{)50}$	$3 \overline{)39}$	12
41	$2 \overline{)48}$	$4 \overline{)88}$	$3 \overline{)99}$	$2 \overline{)82}$	22
20	$3 \overline{)96}$	$4 \overline{)80}$	$2 \overline{)84}$	$2 \overline{)68}$	34
+1 Point	21	42	10	32	+1 Point

Math-Go-Round

Division | Difficulty: ★★☆☆☆

Find a friend and practice your division skills. Find two coins or game pieces and place them on the square labeled **START**. Choose one of the problems to solve and move your game piece clockwise around the board to that problem's answer.

Keep track of the number of corners you go around on each move. For each one, give yourself a point. The player with the most points at the end is the winner.

Keep score with the table below.

	Player 1	Player 2
Round 1		
Round 2		
Round 3		
Round 4		
Round 5		
Round 6		
Round 7		
Round 8		
Total	_____	_____

START +1 Point	13	16	14	9	+1 Point
37	$4 \overline{)96}$	$5 \overline{)65}$	$3 \overline{)45}$	$4 \overline{)68}$	18
24	$6 \overline{)48}$	$5 \overline{)70}$	$2 \overline{)74}$	$2 \overline{)56}$	19
8	$8 \overline{)80}$	$4 \overline{)72}$	$7 \overline{)84}$	$6 \overline{)96}$	15
12	$9 \overline{)81}$	$2 \overline{)58}$	$5 \overline{)95}$	$3 \overline{)78}$	10
+1 Point	29	17	26	28	+1 Point

Math-Go-Round

Division | Difficulty: ★★☆☆

Find a friend and practice your division skills. Find two coins or game pieces and place them on the square labeled **START**. Choose one of the problems to solve and move your game piece clockwise around the board to that problem's answer.

Keep track of the number of corners you go around on each move. For each one, give yourself a point. The player with the most points at the end is the winner.

Keep score with the table below.

	Player 1	Player 2
Round 1		
Round 2		
Round 3		
Round 4		
Round 5		
Round 6		
Round 7		
Round 8		
Total	_____	_____

START +1 Point	37	62	61	73	+1 Point
19	$5 \overline{)180}$	$6 \overline{)270}$	$9 \overline{)171}$	$2 \overline{)164}$	82
36	$3 \overline{)186}$	$7 \overline{)511}$	$8 \overline{)144}$	$7 \overline{)245}$	71
38	$9 \overline{)432}$	$6 \overline{)222}$	$8 \overline{)216}$	$9 \overline{)522}$	18
45	$3 \overline{)114}$	$4 \overline{)284}$	$7 \overline{)364}$	$6 \overline{)366}$	58
+1 Point	27	52	35	48	+1 Point

Math-Go-Round

Division | Difficulty: ★★★★★

Find a friend and practice your division skills. Find two coins or game pieces and place them on the square labeled **START**. Choose one of the problems to solve and move your game piece clockwise around the board to that problem's answer.

Keep track of the number of corners you go around on each move. For each one, give yourself a point. The player with the most points at the end is the winner.

Keep score with the table below.

Player 1 Player 2


Round 1		
Round 2		
Round 3		
Round 4		
Round 5		
Round 6		
Round 7		
Round 8		

Total _____

START + 1 Point	26 _{R23}	35 _{R3}	35 _{R17}	12 _{R12}	+ 1 Point
53 _{R11}	14)621	21)527	27)962	19)308	16 _{R14}
80 _{R7}	12)967	11)152	34)455	16)270	44 _{R5}
16 _{R4}	25)673	26)324	14)458	15)806	24 _{R1}
32 _{R10}	13)638	32)863	23)553	11)388	13 _{R9}
+ 1 Point	25 _{R2}	26 _{R31}	48 _{R1}	13 _{R13}	+ 1 Point

Great job!

is an Education.com math superstar



Answer Sheets

Divide and Conquer

Finding the Quotient!

Baseball Division #1

Baseball Division #2

Baseball Division #3

Baseball Division #4

Baseball Division #5

Basketball Division #1

Basketball Division #2

Basketball Division #3

Basketball Division #4

Basketball Division #5

Football Division #1

Football Division #2

Football Division #3

Football Division #4

Football Division #5

Donut Division

Snail Division

Mushroom Math

Picnicking Signs

Beach Math

Let's Be Fair

Divide 'Em Up

Want more workbooks? Join Education.com Plus to save time and money.
<http://www.education.com/education-plus/>

Answer Sheet

Finding the Quotient!

Divide to find the **quotient**.

Division is the process of finding how many times one number will fit into another number. Division is the opposite, or inverse, operation of multiplication.

$$\begin{array}{ccc} 12 \div 2 = 6 \\ \swarrow \quad \uparrow \quad \searrow \\ \text{dividend} \quad \text{divisor} \quad \text{quotient} \end{array}$$

$$\begin{array}{r} 6 \leftarrow \text{quotient} \\ \text{divisor} \rightarrow 2 \overline{)12} \leftarrow \text{dividend} \end{array}$$

The number you are dividing is the **dividend**.

The number you are dividing by is the **divisor**.

The answer to a division problem is the **quotient**.

$$16 \div 2 = 8 \quad 2 \overline{)16} \quad 8$$

HINT:

Use your multiplication facts to help you find the answer.

$$2 \times ? = 16$$

The answer is 8.

$$12 \div 4 = 3 \quad 4 \overline{)12} \quad 3$$

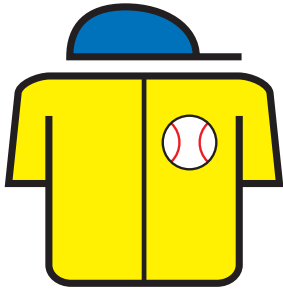
$$15 \div 3 = 5 \quad 3 \overline{)15} \quad 5$$

$$9 \div 3 = 3 \quad 3 \overline{)9} \quad 3$$

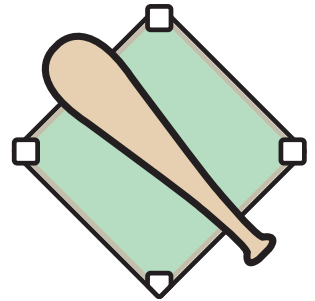
$$10 \div 5 = 2 \quad 5 \overline{)10} \quad 2$$

Answer Sheet

BASEBALL DIVISION #1



Batter up! Step up to the plate and swing for the fences. Solve the following division problems and you'll be an All-Star!



$$40 \div 8 = \underline{5}$$

$$21 \div 7 = \underline{3}$$

$$18 \div 3 = \underline{6}$$

$$27 \div 3 = \underline{9}$$

$$8 \div 4 = \underline{2}$$

$$44 \div 11 = \underline{4}$$

$$72 \div 9 = \underline{8}$$

$$12 \div 6 = \underline{2}$$

$$10 \div 2 = \underline{5}$$

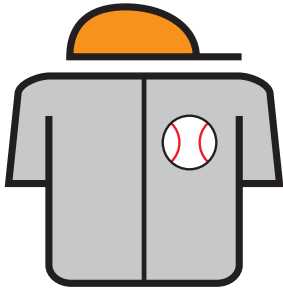
$$9 \div 3 = \underline{3}$$

$$28 \div 7 = \underline{4}$$

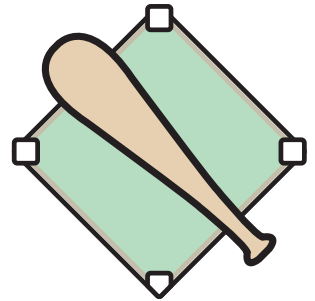
$$8 \div 2 = \underline{4}$$

Answer Sheet

BASEBALL DIVISION #2



Batter up! Step up to the plate and swing for the fences. Solve the following division problems and you'll be an All-Star!



$$10 \div 1 = \underline{10}$$

$$25 \div 5 = \underline{5}$$

$$48 \div 8 = \underline{6}$$

$$21 \div 3 = \underline{7}$$

$$6 \div 3 = \underline{2}$$

$$36 \div 3 = \underline{12}$$

$$9 \div 1 = \underline{9}$$

$$30 \div 5 = \underline{6}$$

$$12 \div 3 = \underline{4}$$

$$20 \div 2 = \underline{10}$$

$$36 \div 9 = \underline{4}$$

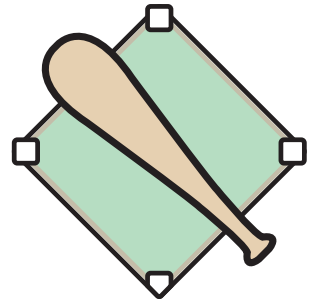
$$9 \div 3 = \underline{3}$$

Answer Sheet

BASEBALL DIVISION #3



Batter up! Step up to the plate and swing for the fences. Solve the following division problems and you'll be an All-Star!



$$42 \div 7 = \underline{6}$$

$$20 \div 4 = \underline{5}$$

$$18 \div 6 = \underline{3}$$

$$16 \div 4 = \underline{4}$$

$$36 \div 6 = \underline{6}$$

$$24 \div 2 = \underline{12}$$

$$6 \div 2 = \underline{3}$$

$$10 \div 5 = \underline{2}$$

$$24 \div 8 = \underline{3}$$

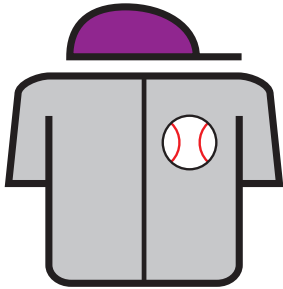
$$8 \div 4 = \underline{2}$$

$$45 \div 9 = \underline{5}$$

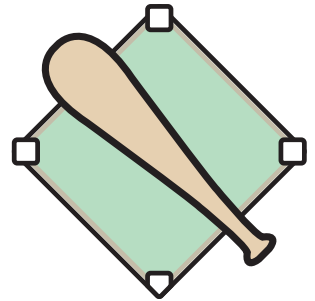
$$7 \div 1 = \underline{7}$$

Answer Sheet

BASEBALL DIVISION #4



Batter up! Step up to the plate and swing for the fences. Solve the following division problems and you'll be an All-Star!



$$10 \div 1 = \underline{11}$$

$$14 \div 7 = \underline{2}$$

$$18 \div 9 = \underline{2}$$

$$20 \div 5 = \underline{4}$$

$$56 \div 8 = \underline{7}$$

$$16 \div 4 = \underline{4}$$

$$28 \div 7 = \underline{4}$$

$$9 \div 9 = \underline{1}$$

$$12 \div 4 = \underline{3}$$

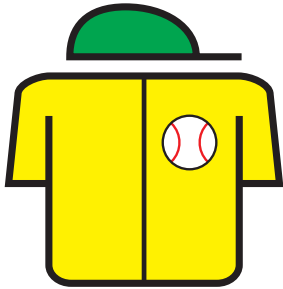
$$4 \div 2 = \underline{2}$$

$$10 \div 5 = \underline{2}$$

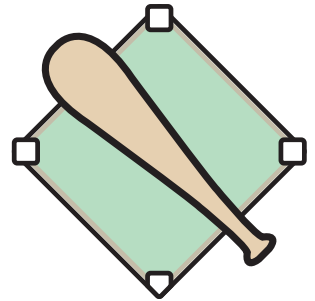
$$30 \div 5 = \underline{6}$$

Answer Sheet

BASEBALL DIVISION #5



Batter up! Step up to the plate and swing for the fences. Solve the following division problems and you'll be an All-Star!



$$18 \div 9 = \underline{2}$$

$$30 \div 3 = \underline{10}$$

$$16 \div 8 = \underline{2}$$

$$14 \div 2 = \underline{7}$$

$$49 \div 7 = \underline{7}$$

$$15 \div 3 = \underline{5}$$

$$6 \div 2 = \underline{3}$$

$$12 \div 3 = \underline{4}$$

$$6 \div 1 = \underline{6}$$

$$54 \div 6 = \underline{9}$$

$$12 \div 6 = \underline{2}$$

$$28 \div 4 = \underline{7}$$

Answer Sheet



BASKETBALL DIVISION #1

Ready to take the court and run a fast break to learning? Solve the following division problems and you'll be an All-Star!

★ ☆ ★
 $8 \div 8 = \underline{1}$



★ ☆ ★
 $20 \div 2 = \underline{10}$



★ ☆ ★
 $48 \div 6 = \underline{8}$



★ ☆ ★
 $12 \div 6 = \underline{2}$



★ ☆ ★
 $15 \div 3 = \underline{5}$



★ ☆ ★
 $21 \div 7 = \underline{3}$



★ ☆ ★
 $18 \div 3 = \underline{6}$



★ ☆ ★
 $14 \div 2 = \underline{7}$



★ ☆ ★
 $10 \div 2 = \underline{5}$



★ ☆ ★
 $6 \div 1 = \underline{6}$



★ ☆ ★
 $20 \div 4 = \underline{5}$



★ ☆ ★
 $40 \div 5 = \underline{8}$



Answer Sheet



BASKETBALL DIVISION #2

Ready to take the court and run a fast break to learning? Solve the following division problems and you'll be an All-Star!

★ ☆ ★
 $6 \div 3 = \underline{2}$



★ ☆ ★
 $10 \div 1 = \underline{10}$



★ ☆ ★
 $35 \div 7 = \underline{5}$



★ ☆ ★
 $12 \div 6 = \underline{2}$



★ ☆ ★
 $27 \div 3 = \underline{9}$



★ ☆ ★
 $25 \div 5 = \underline{5}$



★ ☆ ★
 $14 \div 7 = \underline{2}$



★ ☆ ★
 $21 \div 3 = \underline{7}$



★ ☆ ★
 $12 \div 3 = \underline{4}$



★ ☆ ★
 $3 \div 1 = \underline{3}$



★ ☆ ★
 $48 \div 8 = \underline{6}$



★ ☆ ★
 $9 \div 3 = \underline{3}$



Answer Sheet



BASKETBALL DIVISION #3

Ready to take the court and run a fast break to learning? Solve the following division problems and you'll be an All-Star!

★ ☆ ★
 $9 \div 3 = \underline{3}$



★ ☆ ★
 $16 \div 8 = \underline{2}$



★ ☆ ★
 $36 \div 6 = \underline{6}$



★ ☆ ★
 $10 \div 2 = \underline{5}$



★ ☆ ★
 $36 \div 9 = \underline{4}$



★ ☆ ★
 $20 \div 4 = \underline{5}$



★ ☆ ★
 $18 \div 6 = \underline{2}$



★ ☆ ★
 $42 \div 7 = \underline{6}$



★ ☆ ★
 $24 \div 8 = \underline{3}$



★ ☆ ★
 $8 \div 4 = \underline{2}$



★ ☆ ★
 $40 \div 4 = \underline{10}$



★ ☆ ★
 $7 \div 1 = \underline{7}$



Answer Sheet



BASKETBALL DIVISION #4

Ready to take the court and run a fast break to learning? Solve the following division problems and you'll be an All-Star!

★ ☆ ★
 $6 \div 3 = \underline{2}$



★ ☆ ★
 $16 \div 4 = \underline{4}$



★ ☆ ★
 $30 \div 3 = \underline{10}$



★ ☆ ★
 $12 \div 6 = \underline{2}$



★ ☆ ★
 $22 \div 2 = \underline{11}$



★ ☆ ★
 $14 \div 7 = \underline{2}$



★ ☆ ★
 $49 \div 7 = \underline{7}$



★ ☆ ★
 $35 \div 7 = \underline{5}$



★ ☆ ★
 $12 \div 4 = \underline{3}$



★ ☆ ★
 $4 \div 2 = \underline{2}$



★ ☆ ★
 $10 \div 5 = \underline{2}$



★ ☆ ★
 $8 \div 2 = \underline{4}$



Answer Sheet



BASKETBALL DIVISION #5

Ready to take the court and run a fast break to learning? Solve the following division problems and you'll be an All-Star!

★ ☆ ★
 $10 \div 1 = \underline{10}$



★ ☆ ★
 $15 \div 3 = \underline{5}$



★ ☆ ★
 $6 \div 2 = \underline{3}$



★ ☆ ★
 $32 \div 8 = \underline{4}$



★ ☆ ★
 $18 \div 9 = \underline{2}$



★ ☆ ★
 $24 \div 4 = \underline{6}$



★ ☆ ★
 $16 \div 8 = \underline{2}$



★ ☆ ★
 $14 \div 2 = \underline{7}$



★ ☆ ★
 $33 \div 3 = \underline{11}$



★ ☆ ★
 $8 \div 2 = \underline{4}$



★ ☆ ★
 $12 \div 6 = \underline{2}$




★ ☆ ★
 $45 \div 5 = \underline{9}$



Answer Sheet

FOOTBALL DIVISION #1



Kick off! Time to take the field and score a touchdown for the home team. Solve the following division problems and you'll be an All-Pro!

$10 \div 2 = \underline{5}$

$9 \div 3 = \underline{3}$

$20 \div 4 = \underline{5}$

$8 \div 2 = \underline{4}$

$15 \div 3 = \underline{5}$

$21 \div 7 = \underline{3}$

$18 \div 3 = \underline{6}$

$14 \div 2 = \underline{7}$

$8 \div 4 = \underline{2}$

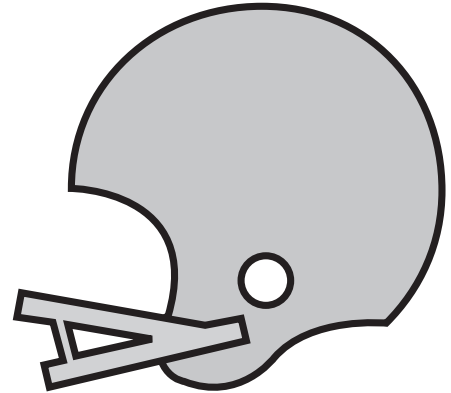
$16 \div 4 = \underline{4}$

$6 \div 2 = \underline{3}$

$12 \div 6 = \underline{3}$

Answer Sheet

FOOTBALL DIVISION #2



Kick off! Time to take the field and score a touchdown for the home team. Solve the following division problems and you'll be an All-Pro!

$12 \div 3 = \underline{4}$

$5 \div 1 = \underline{5}$

$15 \div 5 = \underline{3}$

$9 \div 3 = \underline{3}$

$16 \div 4 = \underline{4}$

$25 \div 5 = \underline{5}$

$14 \div 7 = \underline{2}$

$21 \div 3 = \underline{7}$

$6 \div 3 = \underline{3}$



$10 \div 2 = \underline{5}$

$8 \div 2 = \underline{4}$

$12 \div 6 = \underline{2}$

Answer Sheet

FOOTBALL DIVISION #3



Kick off! Time to take the field and score a touchdown for the home team. Solve the following division problems and you'll be an All-Pro!

$24 \div 8 = \underline{3}$

$8 \div 4 = \underline{2}$

$12 \div 4 = \underline{3}$

$7 \div 1 = \underline{7}$

$15 \div 3 = \underline{5}$

$20 \div 4 = \underline{5}$

$18 \div 6 = \underline{2}$

$16 \div 4 = \underline{4}$

$9 \div 3 = \underline{3}$

$16 \div 8 = \underline{2}$

$6 \div 2 = \underline{3}$

$10 \div 5 = \underline{2}$

Answer Sheet

FOOTBALL DIVISION #4



Kick off! Time to take the field and score a touchdown for the home team. Solve the following division problems and you'll be an All-Pro!

$12 \div 4 = \underline{3}$

$4 \div 2 = \underline{2}$

$10 \div 5 = \underline{2}$

$8 \div 2 = \underline{4}$

$22 \div 2 = \underline{11}$

$14 \div 7 = \underline{2}$

$18 \div 9 = \underline{2}$

$20 \div 5 = \underline{4}$

$6 \div 3 = \underline{2}$


$16 \div 4 = \underline{4}$

$4 \div 1 = \underline{4}$

$12 \div 6 = \underline{2}$

Answer Sheet

FOOTBALL DIVISION #5



Kick off! Time to take the field and score a touchdown for the home team. Solve the following division problems and you'll be an All-Pro!

$10 \div 5 = \underline{2}$

$8 \div 2 = \underline{4}$

$12 \div 6 = \underline{2}$

$4 \div 2 = \underline{2}$

$18 \div 9 = \underline{2}$

$24 \div 4 = \underline{6}$

$16 \div 8 = \underline{2}$

$14 \div 2 = \underline{7}$

$9 \div 3 = \underline{3}$

$15 \div 3 = \underline{5}$

$6 \div 2 = \underline{3}$

$12 \div 3 = \underline{4}$

Answer Sheet

Donut Division!

Find the quotient.

$$\begin{array}{r} 4 \\ \hline 4 \overline{)16} \end{array}$$

$$\begin{array}{r} 9 \\ \hline 2 \overline{)18} \end{array}$$

$$\begin{array}{r} 3 \\ \hline 9 \overline{)27} \end{array}$$

$$\begin{array}{r} 9 \\ \hline 6 \overline{)54} \end{array}$$

$$\begin{array}{r} 1 \\ \hline 8 \overline{)8} \end{array}$$

$$\begin{array}{r} 7 \\ \hline 3 \overline{)21} \end{array}$$

$$\begin{array}{r} 5 \\ \hline 4 \overline{)20} \end{array}$$

$$\begin{array}{r} 8 \\ \hline 8 \overline{)64} \end{array}$$

$$\begin{array}{r} 5 \\ \hline 2 \overline{)10} \end{array}$$

$$\begin{array}{r} 4 \\ \hline 3 \overline{)12} \end{array}$$

$$\begin{array}{r} 8 \\ \hline 6 \overline{)48} \end{array}$$

$$\begin{array}{r} 4 \\ \hline 7 \overline{)28} \end{array}$$

$$\begin{array}{r} 7 \\ \hline 7 \overline{)49} \end{array}$$

$$\begin{array}{r} 7 \\ \hline 8 \overline{)56} \end{array}$$

$$\begin{array}{r} 4 \\ \hline 6 \overline{)24} \end{array}$$

$$\begin{array}{r} 5 \\ \hline 5 \overline{)25} \end{array}$$

$$\begin{array}{r} 6 \\ \hline 3 \overline{)18} \end{array}$$

$$\begin{array}{r} 7 \\ \hline 9 \overline{)63} \end{array}$$

$$\begin{array}{r} 10 \\ \hline 7 \overline{)70} \end{array}$$


$$\begin{array}{r} 6 \\ \hline 11 \overline{)66} \end{array}$$



Answer Sheet

Snail Division

Find the quotient.



$$\begin{array}{r} 3 \\ \hline 3 \overline{)9} \end{array}$$

$$\begin{array}{r} 3 \\ \hline 5 \overline{)15} \end{array}$$

$$\begin{array}{r} 1 \\ \hline 4 \overline{)4} \end{array}$$

$$\begin{array}{r} 7 \\ \hline 2 \overline{)14} \end{array}$$

$$\begin{array}{r} 8 \\ \hline 5 \overline{)40} \end{array}$$

$$\begin{array}{r} 11 \\ \hline 2 \overline{)22} \end{array}$$

$$\begin{array}{r} 6 \\ \hline 3 \overline{)18} \end{array}$$

$$\begin{array}{r} 4 \\ \hline 9 \overline{)36} \end{array}$$

$$\begin{array}{r} 8 \\ \hline 3 \overline{)24} \end{array}$$

$$\begin{array}{r} 3 \\ \hline 7 \overline{)21} \end{array}$$

$$\begin{array}{r} 4 \\ \hline 2 \overline{)8} \end{array}$$

$$\begin{array}{r} 4 \\ \hline 8 \overline{)32} \end{array}$$

$$\begin{array}{r} 4 \\ \hline 4 \overline{)16} \end{array}$$

$$\begin{array}{r} 6 \\ \hline 6 \overline{)36} \end{array}$$

$$\begin{array}{r} 10 \\ \hline 3 \overline{)30} \end{array}$$

$$\begin{array}{r} 3 \\ \hline 4 \overline{)12} \end{array}$$

$$\begin{array}{r} 5 \\ \hline 2 \overline{)10} \end{array}$$

$$\begin{array}{r} 9 \\ \hline 3 \overline{)27} \end{array}$$

$$\begin{array}{r} 5 \\ \hline 1 \overline{)5} \end{array}$$

$$\begin{array}{r} 4 \\ \hline 6 \overline{)24} \end{array}$$



Answer Sheet

Mushroom Math

Multiply or divide.



$$\begin{array}{r} 7 \\ 2 \overline{)14} \end{array}$$

$$\begin{array}{r} 5 \\ \times 4 \\ \hline 20 \end{array}$$

$$\begin{array}{r} 6 \\ 7 \overline{)42} \end{array}$$

$$\begin{array}{r} 6 \\ \times 8 \\ \hline 48 \end{array}$$

$$\begin{array}{r} 9 \\ 8 \overline{)72} \end{array}$$

$$\begin{array}{r} 9 \\ \times 4 \\ \hline 36 \end{array}$$

$$\begin{array}{r} 7 \\ \times 3 \\ \hline 21 \end{array}$$

$$\begin{array}{r} 5 \\ 3 \overline{)15} \end{array}$$

$$\begin{array}{r} 3 \\ 7 \overline{)21} \end{array}$$

$$\begin{array}{r} 2 \\ \times 8 \\ \hline 16 \end{array}$$

$$\begin{array}{r} 4 \\ 6 \overline{)24} \end{array}$$

$$\begin{array}{r} 6 \\ \times 6 \\ \hline 36 \end{array}$$

$$\begin{array}{r} 7 \\ \times 5 \\ \hline 35 \end{array}$$

$$\begin{array}{r} 8 \\ 8 \overline{)64} \end{array}$$

$$\begin{array}{r} 10 \\ \times 2 \\ \hline 20 \end{array}$$

$$\begin{array}{r} 6 \\ 3 \overline{)18} \end{array}$$

$$\begin{array}{r} 62 \\ \times 4 \\ \hline 248 \end{array}$$

$$\begin{array}{r} 4 \\ 11 \overline{)44} \end{array}$$

$$\begin{array}{r} 5 \\ 10 \overline{)50} \end{array}$$

$$\begin{array}{r} 33 \\ \times 5 \\ \hline 165 \end{array}$$

Answer Sheet

Picnicking Signs

The multiplication and division signs are having a picnic. While they're gone, it's up to you to fill in the missing **multiplication** or **division sign** in each equation.

$8 \times 2 = 16$

$3 \times 7 = 21$

$24 \div 4 = 6$

$4 \times 4 = 16$

$54 \div 6 = 9$

$12 \div 3 = 4$

$9 \times 3 = 27$

$7 \times 9 = 63$

$64 \div 8 = 8$

$36 \div 4 = 9$

$4 \times 5 = 20$

$21 \div 7 = 3$

$2 \times 9 = 18$

$8 \times 4 = 32$

$40 \div 8 = 5$

$56 \div 7 = 8$

$30 \div 5 = 6$

$6 \times 3 = 18$

$5 \times 6 = 30$

$49 \div 7 = 7$

$2 \times 6 = 12$



Answer Sheet

Beach Math

Multiply or divide.



$$\begin{array}{r} 8 \\ \times 3 \\ \hline 24 \end{array}$$

$$\begin{array}{r} 6 \\ 4 \overline{)24} \end{array}$$

$$\begin{array}{r} 6 \\ \times 7 \\ \hline 42 \end{array}$$

$$\begin{array}{r} 5 \\ 9 \overline{)45} \end{array}$$

$$\begin{array}{r} 9 \\ 3 \overline{)27} \end{array}$$

$$\begin{array}{r} 9 \\ \times 6 \\ \hline 54 \end{array}$$

$$\begin{array}{r} 3 \\ \times 4 \\ \hline 12 \end{array}$$

$$\begin{array}{r} 5 \\ 5 \overline{)25} \end{array}$$

$$\begin{array}{r} 9 \\ 9 \overline{)81} \end{array}$$

$$\begin{array}{r} 4 \\ 3 \overline{)12} \end{array}$$

$$\begin{array}{r} 4 \\ 7 \overline{)28} \end{array}$$

$$\begin{array}{r} 7 \\ \times 8 \\ \hline 56 \end{array}$$

$$\begin{array}{r} 2 \\ \times 7 \\ \hline 14 \end{array}$$

$$\begin{array}{r} 5 \\ \times 5 \\ \hline 25 \end{array}$$

$$\begin{array}{r} 8 \\ \times 8 \\ \hline 64 \end{array}$$

$$\begin{array}{r} 4 \\ 8 \overline{)32} \end{array}$$

$$\begin{array}{r} 45 \\ \times 4 \\ \hline 180 \end{array}$$

$$\begin{array}{r} 66 \\ \times 2 \\ \hline 132 \end{array}$$

$$\begin{array}{r} 7 \\ 7 \overline{)49} \end{array}$$



Answer Sheet

Let's Be Fair

Read each word problem and find the **quotient**.

James has 15 cookies.
He wants to divide them and give
an equal number to his 3 friends.
How many cookies should he give
each friend?

$$15 \div 3 = 5$$

5 cookies



Kenny has 14 juice boxes.
He wants to divide them and give
an equal number to his 7 friends.
How many juice boxes should he
give each friend?

$$14 \div 7 = 2$$

2 juice boxes



Samantha has 28 books.
She wants to divide them and
make 4 equal stacks to lend to her
friends. How many books should
she put in each stack?

$$28 \div 4 = 7$$

7 books



Chris has 8 bouncy balls.
He wants to divide them and give
an equal number to his 8 friends.
How many bouncy balls should
he give each friend?

$$8 \div 8 = 1$$

1 bouncy balls



Mary is throwing a party.
She has 20 soap hearts and
wants to divide them equally into
5 party favor bags. How many
soap hearts should she put in
each bag?

$$20 \div 5 = 4$$

4 soap hearts



Ada is bringing balloons to the
class party. She has 30 balloons
and wants to divide them equally
among the 10 students in her
class. How many balloons should
each student get?

$$30 \div 10 = 3$$

3 balloons



Answer Sheet

Divide 'Em Up

Solve each division word problem. Show your work!

Ms. Bran brought 4 evenly divided boxes of muffins to class. There are 36 muffins altogether. How many muffins are in each box?

$$36 \div 4 = 9$$

There are 9 muffins in each box.



Pookie's Pet Store has 24 tropical fish. They keep 3 fish in each tank. How many fish tanks are there?

$$24 \div 3 = 8$$

There are 8 tropical fish in each tank.



Sally divided her 48 spools of thread evenly into 6 boxes. How many spools of thread did she put in each box?

$$48 \div 6 = 8$$

There are 8 spools in each box.



Ivan scooped 16 scoops of ice cream evenly onto 8 cones. How many scoops of ice cream are on each cone?

$$16 \div 8 = 2$$

There are 2 scoops on each cone.



Chris has 28 cactus plants. He keeps his cactus plants in even rows of 7. How many cactus plants are in each row?

$$28 \div 7 = 4$$

There are 4 cactus plants in each row.



There are 50 toes in the swimming pool. Each person has 10 toes. How many people are in the pool?

$$50 \div 10 = 5$$

There are 5 people in the pool.

