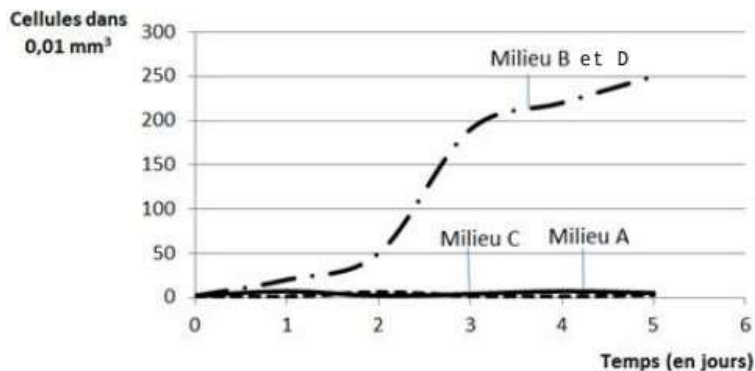


Fiche réponse - Le métabolisme des cellules

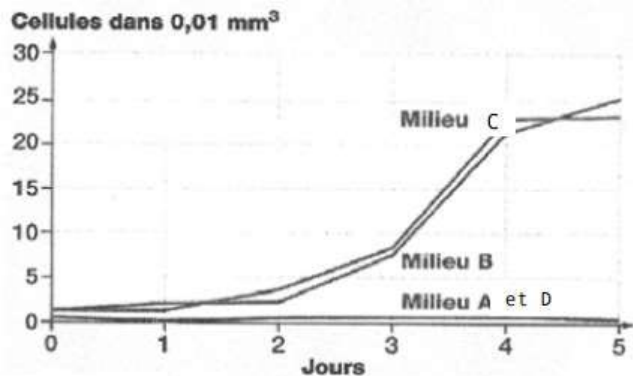
Document 1 : les milieux de culture

| | Milieu A | Milieu B | Milieu C | Milieu D |
|---------------|----------|----------|----------|----------|
| Eau distillée | 1000 mL | 1000 mL | 1000 mL | 1000 mL |
| Sels minéraux | - | 3,75 g | 3,75 g | - |
| MO | - | 30 g | - | 30 g |

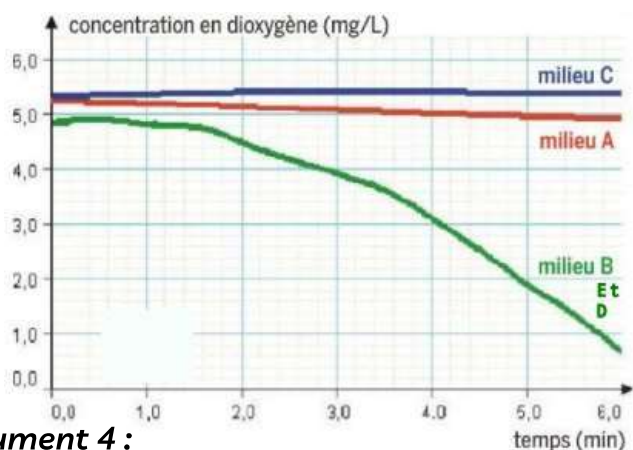
Culture de levures



Culture d'euglènes

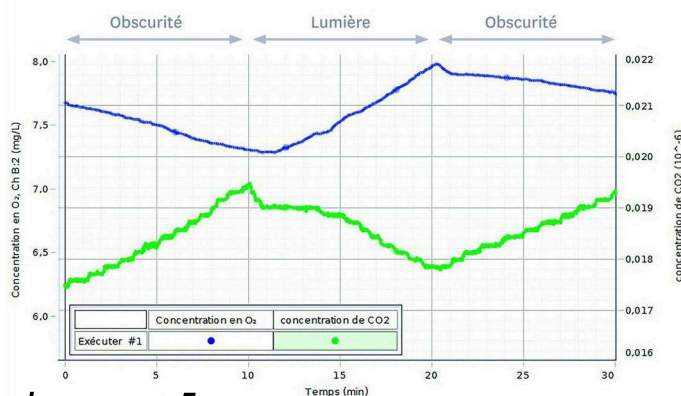


Document 2 :



document 4 :

Document 3 :



document 5 :

| TABLEAU BILAN | EUGLÈNES | LEVURES |
|-------------------------------------------------------------------|----------|---------|
| 1. PARTICULARITÉS DE LA STRUCTURE CELLULAIRE (ORGANITES PRÉSENTS) | | |
| 2. BESOINS DES CELLULES | | |
| 3. MÉTABOLISME | | |
| 4. MÉCANISME | | |