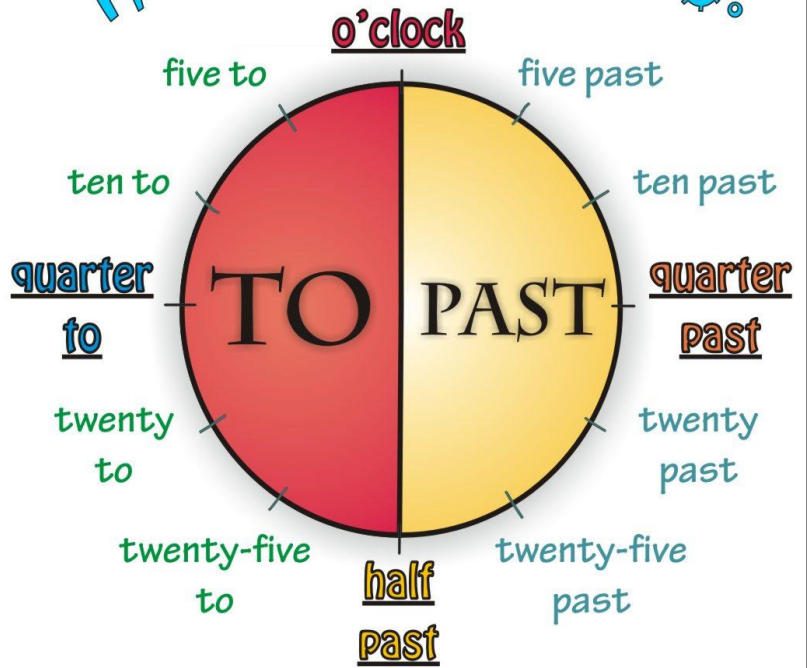


Telling the time (2)

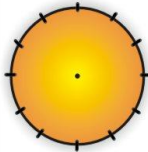
What's the time? It's half past two.

CIRCLE THE CORRECT ANSWER:

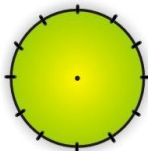
- It's quarter past seven.
A. 7.15 B. 7.45 C. 8.15
- It's twenty-five to ten.
A. 9.25 B. 10.25 C. 9.35
- It's half past six.
A. 6.30 B. 7.30 C. 5.30
- It's five past four.
A. 3.55 B. 4.05 C. 5.04
- It's ten to nine.
A. 9.10 B. 9.51 C. 8.50



DRAW TIMES:



It's half past seven.



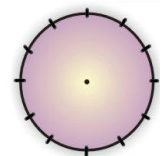
It's twenty past five.

MATCH:

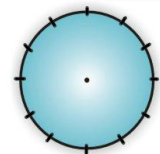
- | | |
|------------------------------|-------|
| It's half past ten. | 3.10 |
| It's five to nine. | 7.40 |
| It's twenty to eight. | 5.50 |
| It's quarter past eleven. | 10.30 |
| It's twenty-five past seven. | 11.15 |
| It's ten to six. | 7.25 |
| It's ten past three. | 1.45 |
| It's quarter to two. | 8.55 |

WRITE SENTENCES:

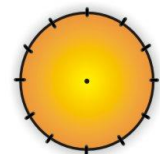
- 12.00
- 6.30
- 4.15
- 1.45
- 8.10
- 11.50
- 6.40
- 3.20
- 5.25



It's quarter to six.



It's ten to ten.



It's five to two.