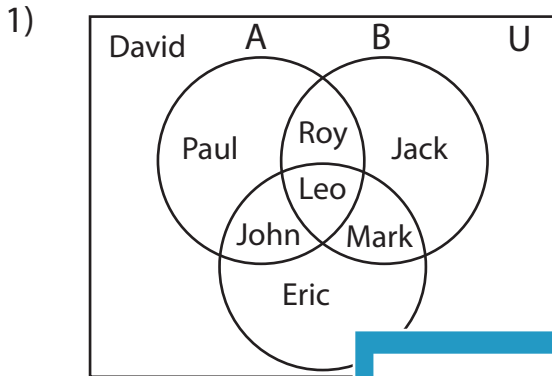


Venn Diagram

L2S2

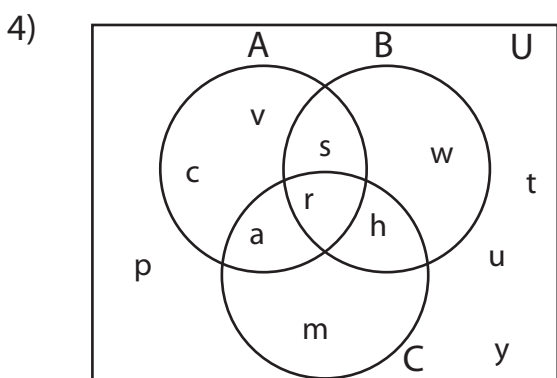
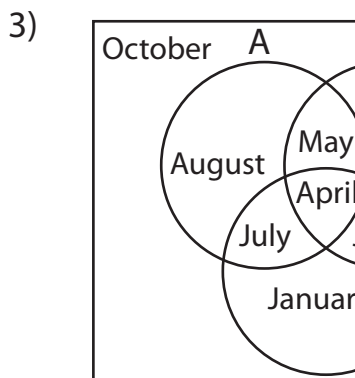
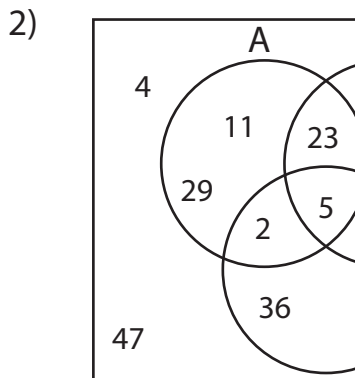
Perform the below mention boolean algebraic operation for the given set of elements.



i) $A' - C'$ = _____

ii) $(C - A)'$ = _____

iii) $C - B'$ = _____



i) $A - B$ = _____

ii) $B' - C'$ = _____

iii) $(A \cap C)'$ = _____

PREVIEW

Access the largest collection of
worksheets for just **\$19.95** per year!

Members, please
log in to
download this
worksheet.

Log in

Not a member?
Please sign up to
gain complete
access.

Sign up

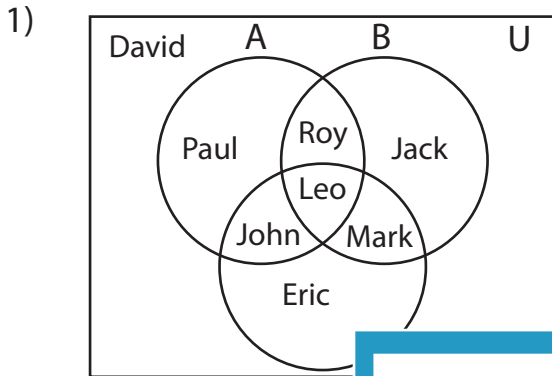
www.mathworksheets4kids.com

Answer key

Venn Diagram

L2S2

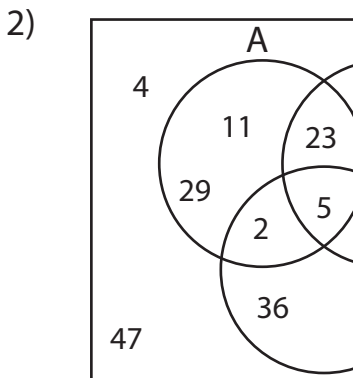
Perform the below mention boolean algebraic operation for the given set of elements.



i) $A' - C'$ = {Eric, Mark}

ii) $(C - A)'$ = {David, Eric, Jack, Mark, Paul, Roy}

iii) $C - B'$ = {Leo, Mark}



3, 36}

Access the largest collection of worksheets for just **\$19.95** per year!

19, 36, 47}

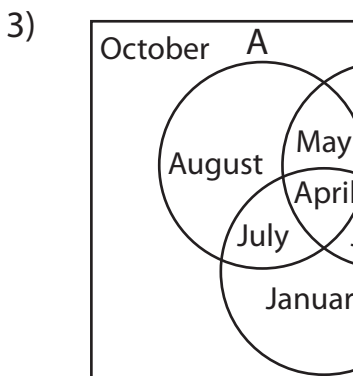
Members, please log in to download this worksheet.

Log in

Not a member? Please sign up to gain complete access.

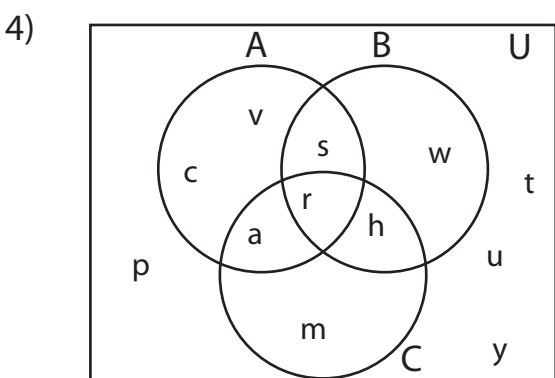
Sign up

www.mathworksheets4kids.com



, April, May, June, October}

gust, October}



i) $A - B$ = {a, c, v}

ii) $B' - C'$ = {a, m}

iii) $(A \cap C)'$ = {c, h, m, p, s, t, u, v, w, y}