

Algebra

**student approved rigor**

**CSI**

**best selling unit review activities**

The Real Number  
System



# CSI ALGEBRA

## The Real Number System

<b>IDEAL UNIT:</b> The Real Number System	<b>TIME RANGE:</b> 45-60 Minutes	<b>SUPPLIES:</b> Pencil & Paper
<b>TOPICS OF FOCUS:</b> <ul style="list-style-type: none"><li>- The Real Number System</li><li>- Properties of Real Numbers</li><li>- Irrational Numbers</li><li>- Square Root Approximation</li><li>- Perfect Squares</li></ul>		
<b>COMMON CORE ALIGNMENT:</b> <p>This particular unit was mapped to the curriculum of most algebra textbooks. CSI activities are ideal as a small group unit review or an enrichment activity.</p>		
7.NS.2	Apply and extend previous understandings of multiplication and division and of fractions to multiply and divide rational numbers.	
7.NS.3	Solve real-world and mathematical problems involving the four operations with rational numbers.	
8.NS.1	Understand informally that every number has a decimal expansion; the rational numbers are those with decimal expansions that terminate in 0s or eventually repeat. Know that other numbers are called irrational.	
8.NS.2	Use rational approximations of irrational numbers to compare the size of irrational numbers, locate them approximately on a number line diagram, and estimate the value of expressions (e.g., $\pi^2$ ).	
8.EE.2	Use square root and cube root symbols to represent solutions to equations of the form $x^2 = p$ and $x^3 = p$ , where $p$ is a positive rational number. Evaluate square roots of small perfect squares and cube roots of small perfect cubes. Know that $\sqrt{2}$ is irrational.	



# CSI

## General Procedures

\*A.) As an optional hook, you can provide or read students the letter from Chief Harris. These are relatively the same for each CSI activity and introduce the criminal, world region the crimes take place and the math topic.

B.) Provide groups (ideally 2-3), the possible suspects, 6 crime scene puzzles and worksheet. You may choose to laminate the criminals or crime scenes for easier reuse. They also work well printed as a packet.

C.) Students will work to solve the crime. Generally, it takes between 45-60 minutes to complete. You can drop hints or provide assistance to help groups that are behind the pace. There are some problems that push advanced critical thinking in applications and others that focus on repeated skill practice. Previewing which crime scenes might be the most challenging so you can be prepared to help small groups or the whole class is a good idea.

Answers in this document are provided, but not with much detail because there have been instances of students or their parents purchasing the documents when teachers have opted to use it as a summative assessment.

D.) At the end of each scene, students will receive a clue that will substitute into the “Cryptic Text Message”. This provides an element of self-checking because if the Cryptic Text does not lead to a criminal, they know they need to recheck their work. In the end, students will determine which suspect should be arrested. *The gender, race and ethnicity of the guilty “suspect” is intentionally varied across the entire CSI series.*

\*E.) There is an emphasis on “evidence” since this is an investigation. This means detailed work and the ability to argue their logic. You may like for students to create a portfolio of evidence proving that they have arrested the right person and will demonstrate their understanding of their mathematical content present in the problem.

\*F.) Some teachers enjoy having their students present and defend their evidence to the class in a brief oral presentation.

\*Optional Extensions

# THE EVIDENCE



INVESTIGATOR: \_\_\_\_\_

1.

**CLUE**

2.

**CLUE**

3.

**CLUE**



**4.**

**CLUE**

**5.**

**CLUE**

**6.**

**CLUE**

**CRYPTIC TEXT MESSAGE**

**SUSPECT**

# CSI: The Real Number System



Detectives,

A thief, working under the alias Guapo Arcsin, has caused a ruckus all throughout Central America. It is believed that Guapo is a member of the evil genius group, the Mathemagicians. From what the detectives have gathered thus far from the previous thefts, the Mathemagicians are building a world conquering device.

Fortunately, Guapo has left behind a trail of notes and a cryptic text message that he has told us will calculate toward his favorite number. Thus far there are six suspects that police have questioned. It is hoped that someone with a relatively strong number sense can crack some codes that have puzzled the detectives on the case so far.

Your job is to bring Guapo to justice and save the planet. You need to be prepared to state your case and demonstrate your understanding of the following skills that Guapo is known to use in his notes.



- The Real Number System
- Properties of Real Numbers
- Irrational Numbers
- Square Root Approximation
- Perfect Squares and Cubes

In your investigation, be sure to show all of your work. We need to have clear evidence that supports your calculations and conclusions. This is not a time to be sloppy. The slightest miscalculation or illegible footnote could result in a not guilty verdict.







Oh, did I mention that use of a calculator might prematurely set off his world conquering device? Good luck to you, gumshoe.

*Chief Harris*

# THE SUSPECTS

Who is Guapo Arcsine?



<p>Name Stillman</p> <p>Occupation College Student</p> <p>Favorite Number -7</p>		<p>Name Charmelle</p> <p>Occupation Mechanical Engineer</p> <p>Favorite Number <math>\pi</math></p>	
<p>Name Hiram</p> <p>Occupation Doctor</p> <p>Favorite Number 61</p>		<p>Name Logan</p> <p>Occupation Politician</p> <p>Favorite Number 13</p>	
<p>Name Pedro</p> <p>Occupation Firefighter</p> <p>Favorite Number 1/5</p>		<p>Name Eden</p> <p>Occupation Organic Farmer</p> <p>Favorite Number 0</p>	

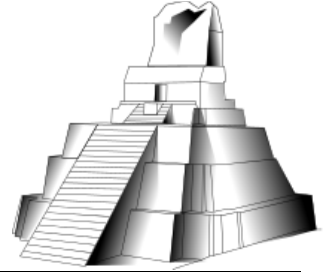
## Scene #1 Machu Picchu - Peru



At about 12:24, Guapo Arcsin broke into the famous Incan ruins and stole an Intihuatana stone. The Intihuatana is a ritual South American stone used to tell time.

Hello Peru Peeps and Police,

To let you know upfront, I plan on conquering the world. Okay, now that I have your attention, I figure I'll give you a fighting chance to stop me. MuHahahahahaha. I found this puzzle carved into an Incan temple.



Determine which properties of real numbers are illustrated in these examples.

1.	$3 + 7 = 7 + 3$	2.	$4 + (-4) = 0$
3.	$9 \cdot 1 = 9$	4.	$8 \cdot (6 \cdot 5) = (8 \cdot 6) \cdot 5$

Figure out which property is left out.

<i>Transitive Property</i>	<i>Commutative Property of Addition</i>	<i>Associative Property of Multiplication</i>	<i>Multiplicative Identity</i>	<i>Additive Inverse Property</i>
↓	↓	↓	↓	↓
<b>E = 81</b>	<b>C = 64</b>	<b>A = 81</b>	<b>M = 81</b>	<b>L = 81</b>

Sincerely Yours,  
Guapo Arcsin

P.S. Please be aware I will later send you a CRYPTIC PUZZLE SOLVER TEXT MESSAGE.

## Scene #2 Mayan Ruins -- Mexico

Four rare limestone cornerstones were extracted from the ruins of a Mayan ceremonial platform. These stones could perhaps lay the foundation for a devastating world conquering device.

My Dearest,

Since I haven't been captured yet, I've been thinking about developing my own number system like the Mayans. I need to review the Real Number System first. *Write the numbers in the correct categories.*

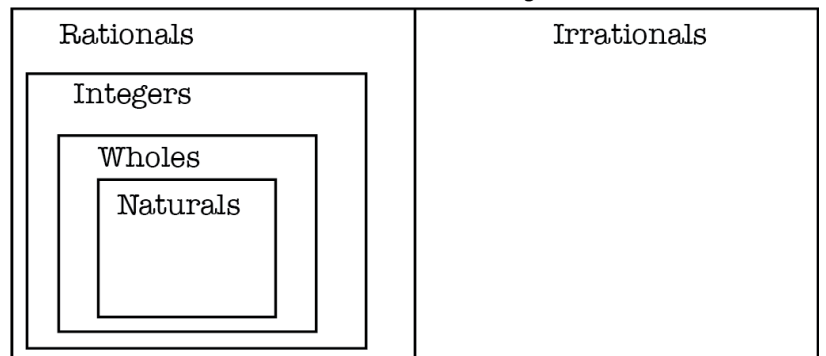


7	$\pi$	$\sqrt{2}$
$\frac{1}{4}$	$.\overline{333}$	0
-3	$-\frac{5}{6}$	0.94183 ...

Are there more integers or irrationals?

<i>More Integers</i>	<i>More Irrationals</i>	<i>The Same</i>
↓	↓	↓
<b>L = -6</b>	<b>m = -6</b>	<b>r = -6</b>

### The Real Number System





Scene #5 St. Cecilia Acatitlan - Mexico



An unknown amount of rubble and multiple Aztec jade masks depicting various gods were stolen. Guapo has successfully robbed the Aztecs, Incans, and Mayans. It's unknown what he's capable of...he must be stopped quickly.

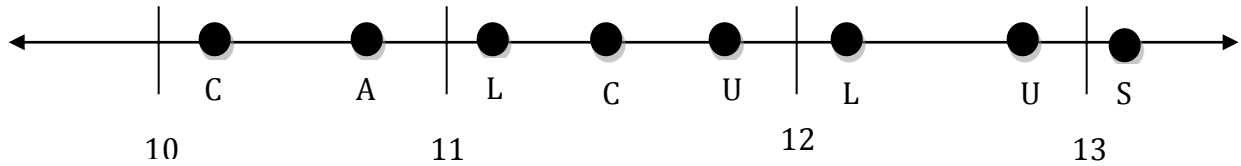


What's Good?

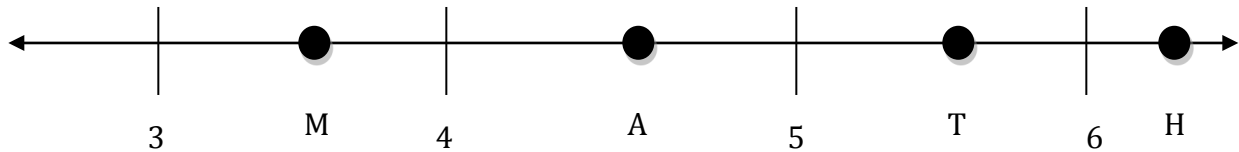


I am inspired by the native abstract art to approximate some irrational numbers. Just like you trying to catch me, these go on, and on, forever.

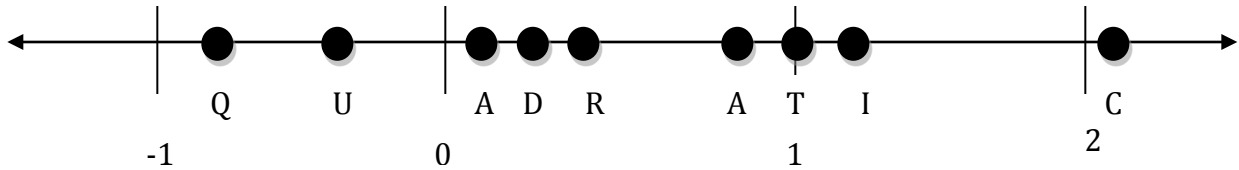
Which point most accurately represents  $\sqrt{168}$ ?



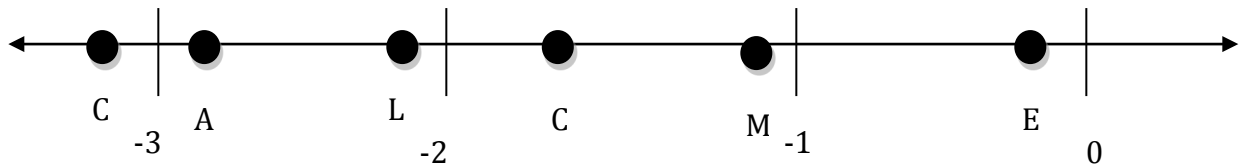
Which point most accurately represents  $\sqrt{\text{number\_of\_letter\_in\_the\_alphabet}}$ ?  
Use your previous answer. (HINT: C=3, A=1, L=12 etc.)



Which point most accurately represents  $\sqrt{|\text{number\_of\_letter\_in\_the\_alphabet} - 6|}$ ?



Which point most accurately represents  $\sqrt{(\text{number\_of\_letter\_in\_the\_alphabet}) - 5}$ ?



Round your last answer to the nearest integer and you might have figured out me out.

Final Letter = Rounded Answer \_\_\_\_\_ = \_\_\_\_\_

We will be deploying our device soon. Good luck.

Happy Holidays,

Guapo Arcsin

Scene #6 Museo Nacional de Antropologia - Mexico City



Three rare, blind naked mole rats were stolen from the National Museum of Anthropology. We suspect Guapo Arcsin will be using their abnormal DNA as part of his World Conquering Device.



I thought I'd go out with a bang since I had some extra time for this puzzle. I'm sure you won't figure it out. **What is L?**

$$L = 36a(a - c) - 24c(2a - 3c) + 2a(-2(3a + c)) + 77$$

**L = \_\_\_\_\_**

So fine, whatever, you were actually able to distribute and combine like terms. Whoopdidoo. Too bad that doesn't tell you the value of L. Here's the problem. I even did it for you.

**UNLESS I'M LYING.**

$4 + 3 = 3 + 4 = 7$  is an example of the **a**ssociative property

$3 + (1+5) = (3+1) + 5 = 9$  is an example of the **C**ommutative property

So  $a = 7$  and  $c = 9$

HAHAHAHAHA see I just gave you an answer! **Or did I?** MUHAHAHAHA. Better figure it out quickly before you plug them in to find L. I'd surely hate if you did it wrong.

**CRYPTIC PUZZLE SOLVER TEXT MESSAGE**

omg u arent gonna figure this out.  
my num is perfect!

$$L A - M + E - R + 1 - C + A \cdot 5$$

rofl Guapo 'Too Slick' Arcsin

# INTERESTED IN UNLIMITED ACCESS?

CLICK TO VISIT  
[WWW.CLARKCREATIVEEDUCATION.COM](http://WWW.CLARKCREATIVEEDUCATION.COM)

Home About ▾ Blog Shop ▾ Curriculum Organizer

Home of 21st Century Math Projects

Cart My Account ▾

home of the world's most innovative curriculum

Join the thousands of teachers already launching engagement to another stratosphere

Subscribe to Entire Courses

Purchase items on TpT

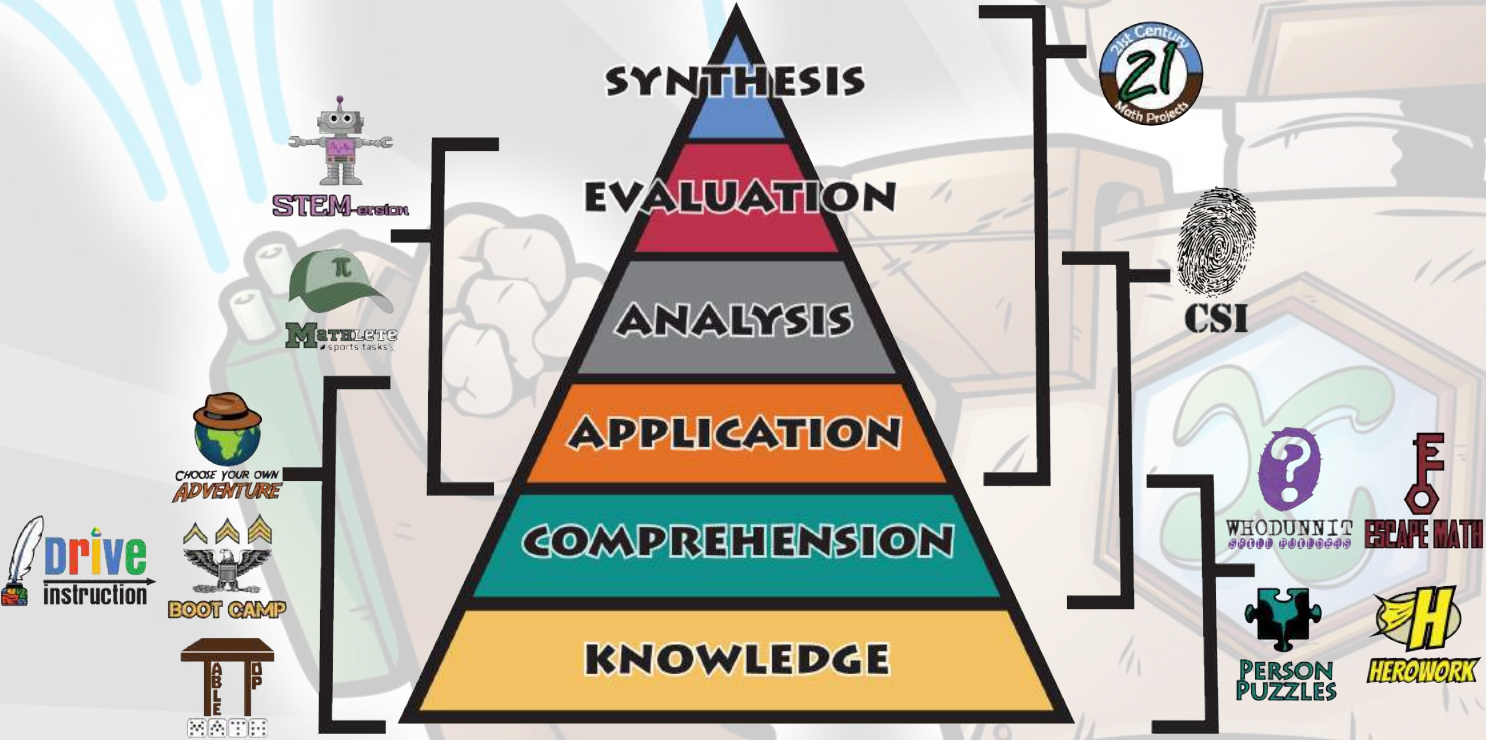
Can you escape the room?  
pulse-pounding classroom activities

get unlimited access to a course for less than \$1 a day.

USE COUPONCODE: TPTER  
FOR 25% OFF ANY SUBSCRIPTION

# CONTENT TYPES

WE'VE GOT YOU COVERED



# CLICK TO BROWSE



# WHERE IT FITS



WARM-UPS, NOTES, SLIDES,  
INTERACTIVE NOTEBOOKS,  
EXIT TICKETS & TESTS

## ASSIGNMENT TYPES

### SKILL PRACTICE



### GAMES & ACTIVITIES




### PROJECTS



## HOW MUCH TIME?

### QUICK

~15-20 minutes



### "A CLASS PERIOD"

~45-60 minutes



### EXTENDED

3+ Days (can be modified)



**TO SEE MORE (OR DANCE)**

**WATCH THE VIDEO**

**DOWNLOAD THE USER GUIDE**

# TERMS OF USE

This product includes a license for **one** teacher only for personal use in their classroom. Licenses are **non-transferable**, meaning they can not be passed from one teacher to another. No part of this resource is to be shared with a colleague or used by an entire grade level, school, or district without purchasing the proper number of licenses. If you are a coach, principal, or district interested in transferable licenses to accommodate yearly staff changes, please contact me for a quote at [teach@clarkcreativeeducation.com](mailto:teach@clarkcreativeeducation.com)

This resource or answers to the questions may not be uploaded to the internet where it is publicly available in any form including classroom/personal websites, network drives or student Prezis (which can be made private), unless the site is password protected and can only be accessed by students.

Thank you for respecting my work!



# CSI - Algebra - Unit 2 - The Real Number System




## Scene #1 Machu Picchu - Peru

At about 12:24, Guapo Arcsin broke into the famous Incan ruins and stole an Intihuatana stone. The Intihuatana is a ritual South American stone used to tell time.

Hello Peru Peeps and Police,

To let you know upfront, I plan on conquering the world. Okay, now that I have your attention, I figure I'll give you a fighting chance to stop me. MuHahahahahaha. I found this puzzle carved into an Incan temple.



Determine which properties of real numbers are illustrated in these examples.

1. Commutative Property of Addition $3 + 7 = 7 + 3$	2. Additive Inverse Property $4 + (-4) = 0$
3. Multiplicative Identity $9 \cdot 1 = 9$	4. Associative Property of Multiplication $8 \cdot (6 \cdot 5) = (8 \cdot 6) \cdot 5$

Figure out which property is left out.

Transitive Property ↓ <b>E = 81</b>	Commutative Property of Addition ↓ <b>C = 64</b>	Associative Property of Multiplication ↓ <b>A = 81</b>	Multiplicative Identity ↓ <b>M = 81</b>	Additive Inverse Property ↓ <b>L = 81</b>
---	--	--	---	---

Sincerely Yours,  
Guapo Arcsin

P.S. Please be aware I will later send you a CRYPTIC PUZZLE SOLVER TEXT MESSAGE.

## Scene #2 Mayan Ruins -- Mexico

Four rare limestone cornerstones were extracted from the ruins of a Mayan ceremonial platform. These stones could perhaps lay the foundation for a devastating world conquering device.

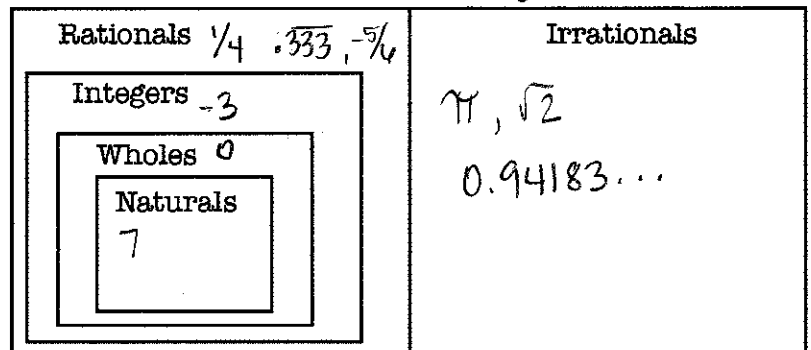
My Dearest,

Since I haven't been captured yet, I've been thinking about developing my own number system like the Mayans. I need to review the Real Number System first. Write the numbers in the correct categories.



7	$\pi$	$\sqrt{2}$
$1/4$	$.333$	0
-3	$-5/6$	0.94183...

### The Real Number System



Are there more integers or irrationals?

More Integers ↓ <b>L = -6</b>	More Irrationals ↓ <b>m = -6</b>	The Same ↓ <b>r = -6</b>
-------------------------------------	--	--------------------------------

**Scene #3 Andes Mountains -- Colombia**



Thursday night, Guapo Arcsin traversed the mountains and shaved two dozen alpacas. While it's unclear what he plans to do with the wool, there are now many cold and confused alpacas. He carved this note into the mountain.

Greetings Police Officer,

I see that my puzzles have befuddled even the best of you. I've made the next one even harder. Remember my World Conquering Device will go off at the touch of a calculator.



- |     |   |
|-----|---|
| 1.) | A is a Rational Number  |
| 2.) | A's numerator is the smallest Natural Number  |
| 3.) | A's denominator is a Prime, positive Integer. How many classifications of Real Numbers are there? |

$$A = \frac{1}{5}$$


Give up yet? Your Friend,  
Guapo Arcsin

**Scene #4 Panama Canal -- Panama**

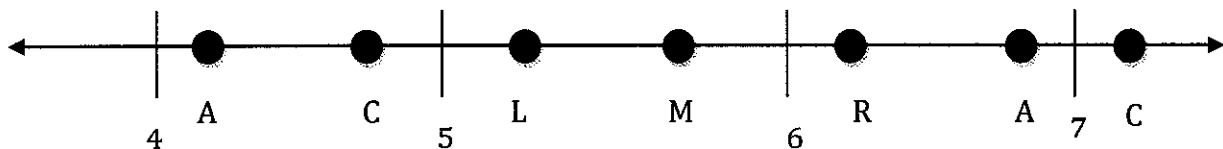
An oiler tanker ship was reported missing from the canal. Apparently the captain decided to go ashore to eat a sandwich and was shocked to find this note in place of his boat.

To Whom It May Concern,

I'm sure you are thoroughly confused by now. Hopefully you don't arrest the wrong person!



- |     |   |    |
|-----|---|----|
| 1.) | X = the next smallest Integer that is a perfect cube less than -1.  | -8 |
| 2.) | Y = a Whole Number with the smallest perfect square greater than 1. | 4  |
| 3.) | $\sqrt{-XY}$ which is an Irrational Number.                         |    |
| 4.) | Mystery Letter = Approximation of $\sqrt{-XY}$ on the number line.  |    |



Mystery Letter = 32

$$\underline{M} = 32$$

Scene #5 St. Cecilia Acatitlan - Mexico



An unknown amount of rubble and multiple Aztec jade masks depicting various gods were stolen. Guapo has successfully robbed the Aztecs, Incans, and Mayans. It's unknown what he's capable of...he must be stopped quickly.

What's Good?

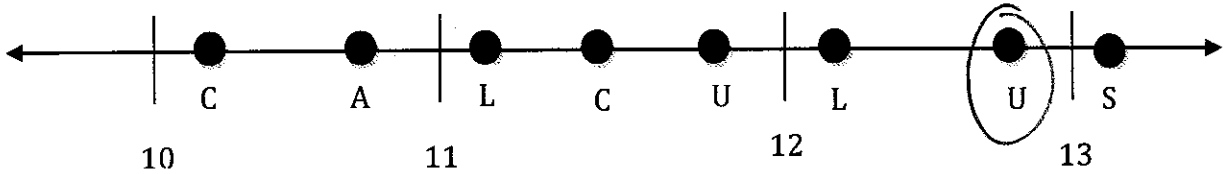


I am inspired by the native abstract art to approximate some irrational numbers. Just like you trying to catch me, these go on, and on, forever.



Which point most accurately represents  $\sqrt{168}$ ?

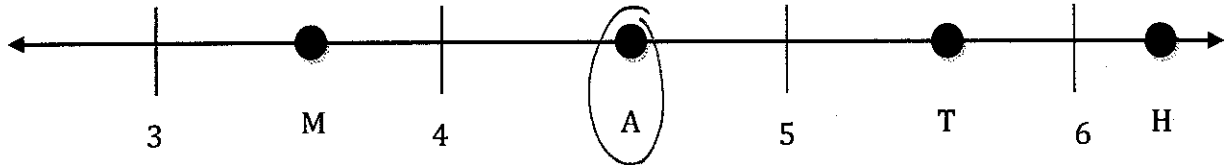
$\sqrt{169} = 13$



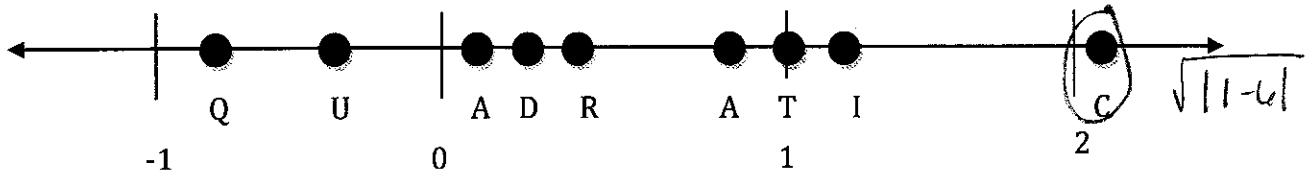
Which point most accurately represents  $\sqrt{\text{number\_of\_letter\_in\_the\_alphabet}}$ ?

Use your previous answer. (HINT: C=3, A=1, L=12 etc.)

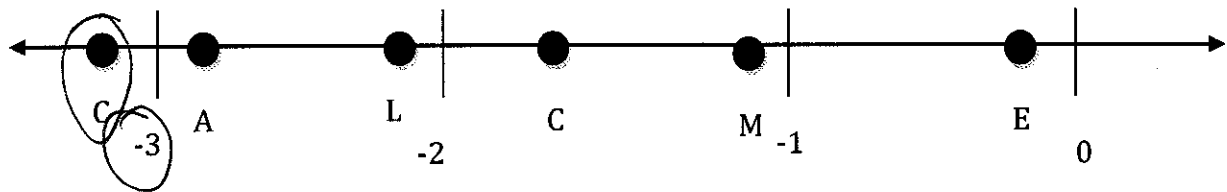
$U=21$   
 $\sqrt{21}$



Which point most accurately represents  $\sqrt{|\text{number\_of\_letter\_in\_the\_alphabet} - 6|}$ ?



Which point most accurately represents  $\sqrt{(\text{number\_of\_letter\_in\_the\_alphabet}) - 5}$ ?



Round your last answer to the nearest integer and you might have figured out me out.

Final Letter = Rounded Answer C = -3

We will be deploying our device soon. Good luck.

Happy Holidays,

Guapo Arcsin

## Scene #6 Museo Nacional de Antropologia - Mexico City



Three rare, blind naked mole rats were stolen from the National Museum of Anthropology. We suspect Guapo Arcsin will be using their abnormal DNA as part of his World Conquering Device.



I thought I'd go out with a bang since I had some extra time for this puzzle. I'm sure you won't figure it out. **What is L?**

$$\begin{aligned}L &= 36a(a - c) - 24c(2a - 3c) + 2a(-2(3a + c)) + 77 \\L &= 36(9)(9-7) - 24(7)(2(9)-3(7)) + 2(9)(-2(3(9)+7)) + 77 \\L &= 324(2) - 168(-3) + 18(-68) + 77 \\L &= 648 + 504 - 1224 + 77 \\L &= 5\end{aligned}$$

**L = 5**

So fine, whatever, you were actually able to distribute and combine like terms. Whoopdidoo. Too bad that doesn't tell you the value of L. Here's the problem. I even did it for you. **UNLESS I'M LYING.**

$4 + 3 = 3 + 4 = 7$  is an example of the **a**ssociative property ↙ backwards  
 $3 + (1+5) = (3+1) + 5 = 9$  is an example of the **C**ommutative property

So  ~~$a = 7$  and  $c = 9$~~   $a = 9$  and  $c = 7$

HAHAHAHAHA see I just gave you an answer! **Or did I?** MUHAHAHAHA. Better figure it out quickly before you plug them in to find L. I'd surely hate if you did it wrong.

## CRYPTIC PUZZLE SOLVER TEXT MESSAGE

omg u arent gonna figure this out.  
my num is perfect!

$$E = 81$$

$$r = -6$$

$$A = \frac{1}{2}$$

$$m = 32$$

$$C = -3$$

$$L = 5$$

$$L A - M + E - R + 1 - C + A \cdot 5$$

rofl Guapo 'Too Slick' Arcsin

# THE EVIDENCE



INVESTIGATOR: Key

- 1.
1. Commutative Property of Addition
  2. Additive Inverse Property
  3. Multiplicative Identity
  4. Associative Property of Multiplication

**CLUE**

$$E = 81$$

2.

Integers  $\Rightarrow 7, 0, -3$

Irrationals  $\Rightarrow \pi, \sqrt{2}, 0.94183\dots$

**CLUE**

$$r = -6$$

3.

$$\frac{1}{5}$$

**CLUE**

$$A = \frac{1}{5}$$

4.

$$x = -8$$

$$y = 4$$

$$\sqrt{-xy} = \sqrt{-(-8)(4)} = \sqrt{32} \approx 5.66$$

**CLUE**

$$M = 32$$

5.

$$\sqrt{168} \approx 12.96$$

$$\sqrt{21} \approx 4.58$$

$$\sqrt{|1-6|} = \sqrt{|-5|} = \sqrt{5} \approx 2.24$$

$$\sqrt{3} - 5 \approx 1.73 - 5 \approx -3.27$$

**CLUE**

$$C = -3$$

6.  $a = 9$   $c = 7$

$$L = 36a(a-c) - 24c(2a-3c) + 2a(-2(3a+c)) + 77$$

$$L = 5$$

**CLUE**

$$L = 5$$

### CRYPTIC TEXT MESSAGE

$$LA - M + E - R + 1 - C + A \cdot 5$$

$$5\left(\frac{1}{5}\right) - 32 + 81 - (-6) + 1 - (-3) + \frac{1}{5}(5)$$

$$1 - 32 + 81 + 6 + 1 + 3 + 1 = 61$$

**SUSPECT**







61

Hiram

# THE SUSPECTS

Who is Guapo Arcsine?



<p>Name Stillman</p> <p>Occupation College Student</p> <p>Favorite Number -7</p> 	<p>Name Charmelle</p> <p>Occupation Mechanical Engineer</p> <p>Favorite Number <math>\pi</math></p> 
<p>Name Hiram</p> <p>Occupation Doctor</p> <p>Favorite Number 61</p> 	<p>Name Logan</p> <p>Occupation Politician</p> <p>Favorite Number 13</p> 
<p>Name Pedro</p> <p>Occupation Firefighter</p> <p>Favorite Number 1/5</p> 	<p>Name Eden</p> <p>Occupation Organic Farmer</p> <p>Favorite Number 0</p> 

# CSI

## The Real Number System

### Rubric



Skills & Understandings		Exemplary	Proficient	Developing
I can organize numbers within the classifications of real numbers.				
I can understand and identify properties of real numbers.				
I can approximate the value of square roots of irrational numbers.				
I can identify perfect squares and cubes.				
Math Processes		Exemplary	Proficient	Developing
Skills & Mechanics	<i>accurately performs calculations</i>			
	<i>demonstrates fluency with mathematical skills and processes</i>			
Applications	<i>accurately interprets word problems and addresses them with appropriate math skills</i>			
	<i>can articulate the meaning of calculations in the context of the problems.</i>			
Use of Evidence & Analysis	<i>can determine what evidence is appropriate to answer a question</i>			
	<i>utilizes mathematical outcomes to support their conclusions</i>			

### COMMENTS: