

Name : \_\_\_\_\_

Score : \_\_\_\_\_


Teacher : \_\_\_\_\_

Date : \_\_\_\_\_


## Circle Constructions

Locate the center of each circle.

1)

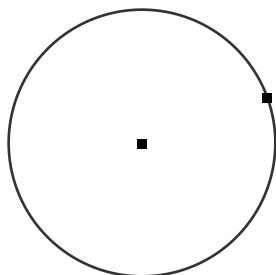


2)

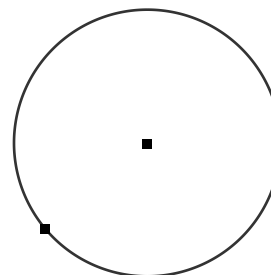


Construct a line segment tangent to the circle through the given point.

3)



4)



Name : \_\_\_\_\_

Score : \_\_\_\_\_


Teacher : \_\_\_\_\_

Date : \_\_\_\_\_

## Circle Constructions

Circumscribe a circle about each rectangle.

5)




6)




Construct a circle that passes through the given points.

7)



8)



Name : \_\_\_\_\_

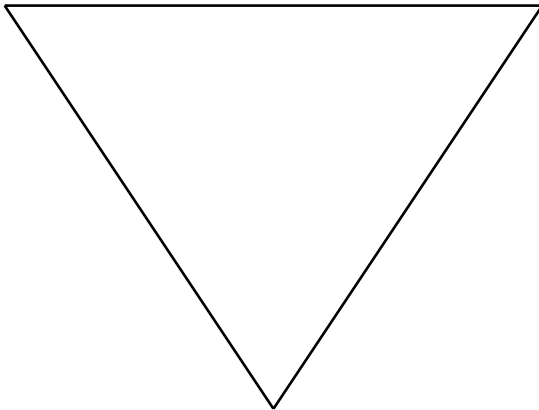
Score : \_\_\_\_\_

Teacher : \_\_\_\_\_

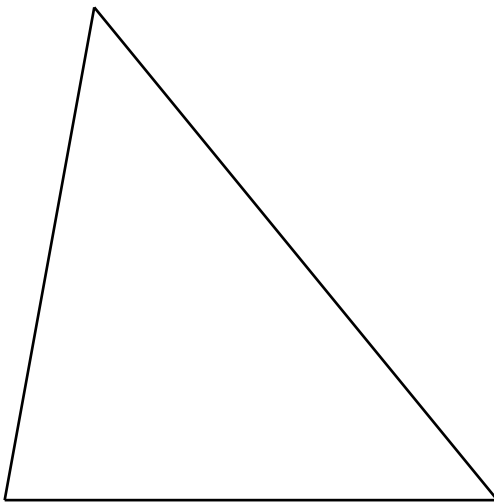
Date : \_\_\_\_\_

## Circle Constructions

9) Circumscribe a circle about the triangle.



10) Inscribe a circle inside the triangle.



Name : \_\_\_\_\_

Score : \_\_\_\_\_

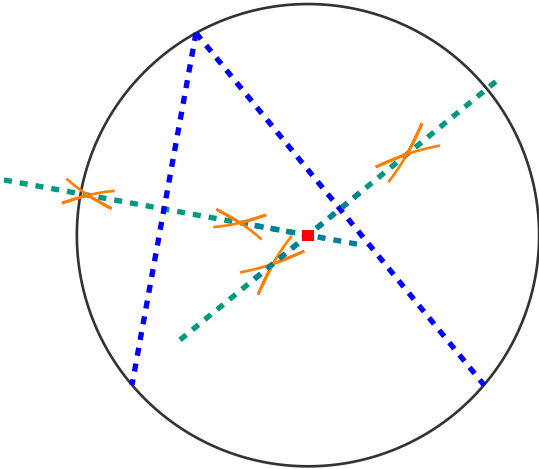
Teacher : \_\_\_\_\_

Date : \_\_\_\_\_

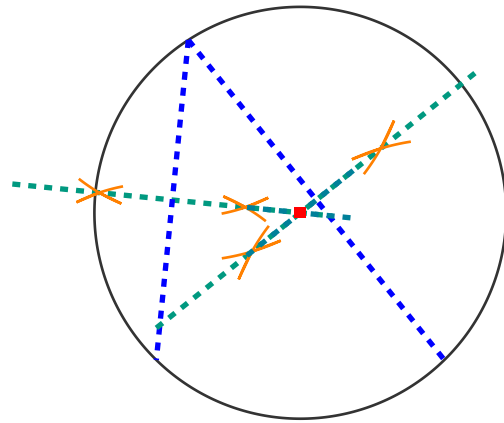
## Circle Constructions

Locate the center of each circle.

1)

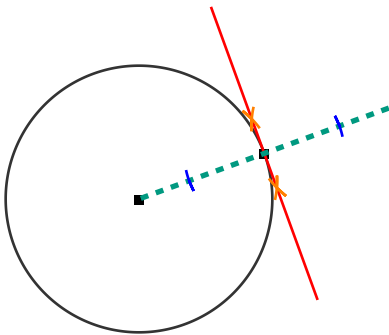


2)

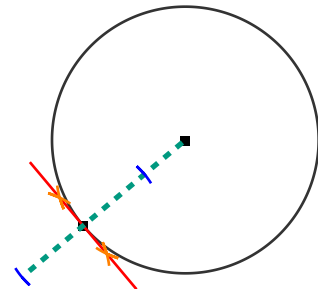


Construct a line segment tangent to the circle through the given point.

3)



4)



Name : \_\_\_\_\_

Score : \_\_\_\_\_

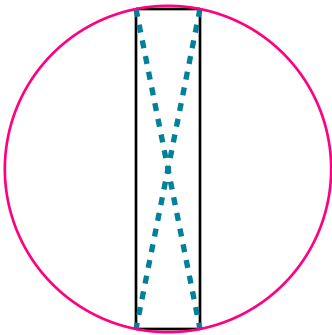
Teacher : \_\_\_\_\_

Date : \_\_\_\_\_

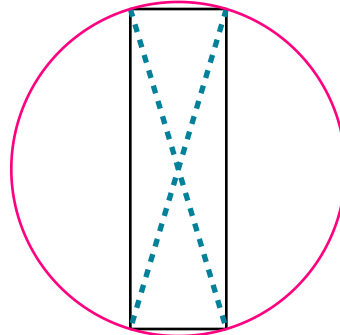
## Circle Constructions

Circumscribe a circle about each rectangle.

4)

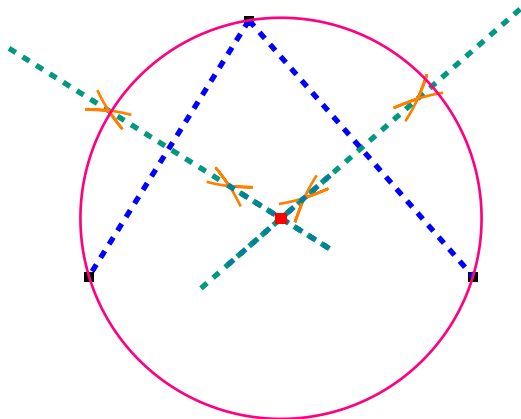


5)

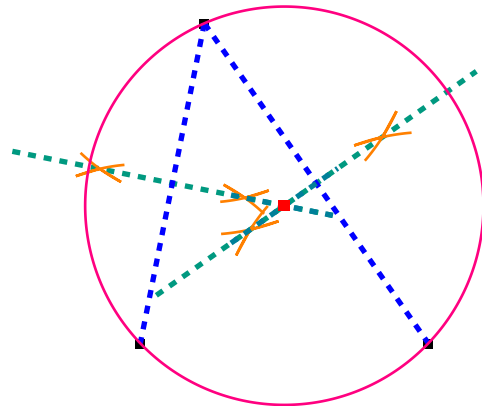


Construct a circle that passes through the given points.

6)



7)



Name : \_\_\_\_\_

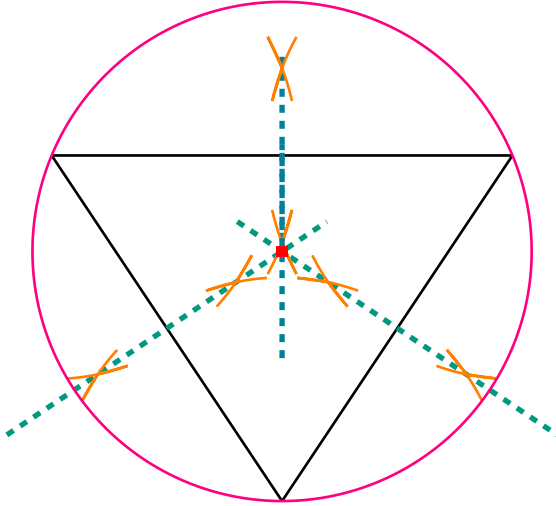
Score : \_\_\_\_\_

Teacher : \_\_\_\_\_

Date : \_\_\_\_\_

## Circle Constructions

9) Circumscribe a circle about the triangle.



10) Inscribe a circle inside the triangle.

