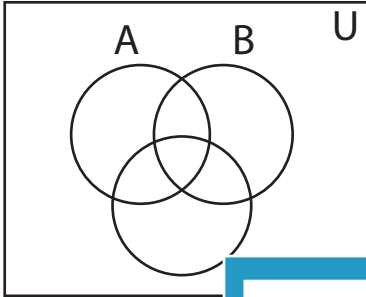


Shading - Venn Diagram

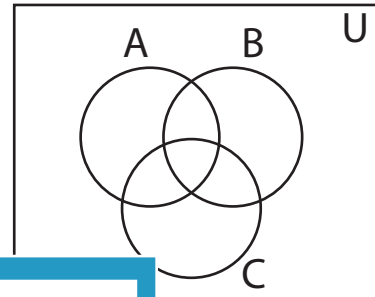
L2S2

Shade the given region.

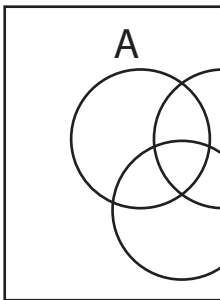
1) $C - A'$



2) C'



3) $A' - B$



PREVIEW

Access the largest collection of
worksheets for just **\$19.95** per year!


Members, please
log in to
download this
worksheet.

Log in

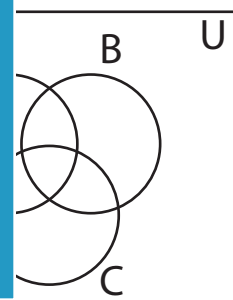
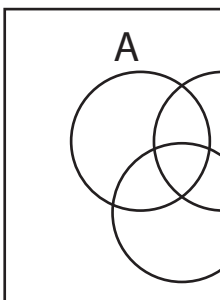
Not a member?
Please sign up to
gain complete
access.

Sign up

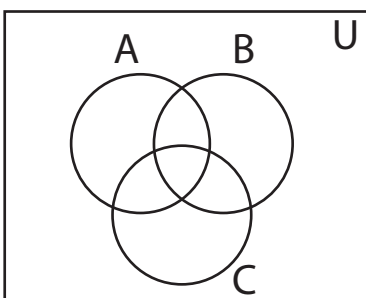
www.mathworksheets4kids.com



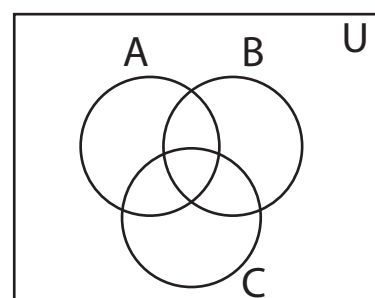
5) $B' \cap C'$



7) $(C - B)'$



8) $A \cup B'$



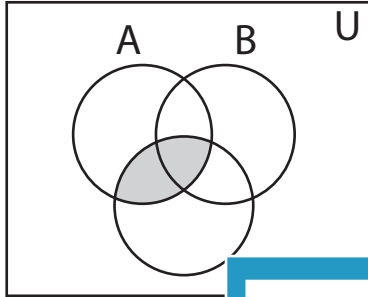
Answer key

Shading - Venn Diagram

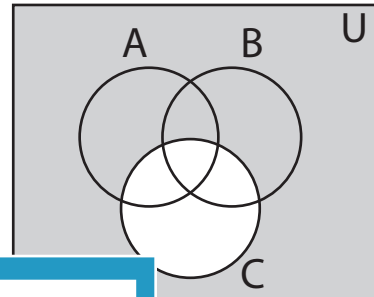
L2S2

Shade the given region.

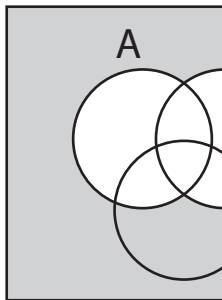
1) $C - A'$



2) C'



3) $A' - B$



PREVIEW

Access the largest collection of worksheets for just **\$19.95** per year!

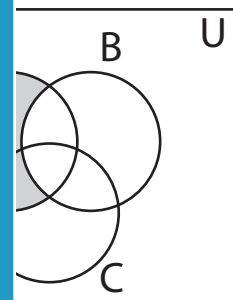
Members, please log in to download this worksheet.

Log in

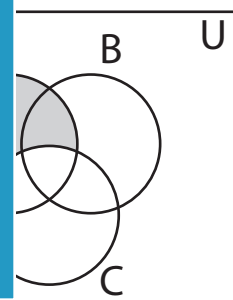
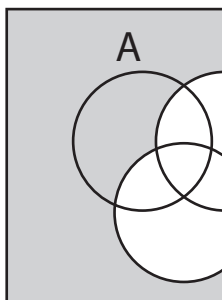
Not a member? Please sign up to gain complete access.

Sign up

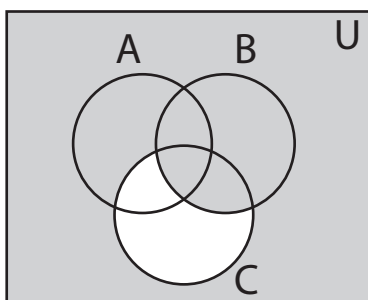
www.mathworksheets4kids.com



5) $B' \cap C'$



7) $(C - B)'$



8) $A \cup B'$

