

Name : _____


Score : _____

Teacher : _____

Date : _____

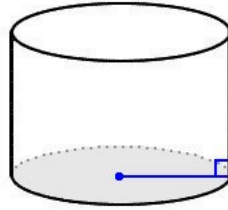
Identify Each Solid Figure.

1)



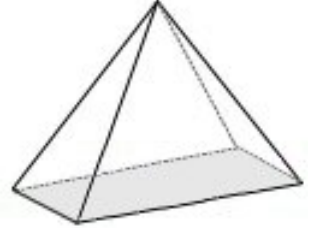
Type: _____

2)



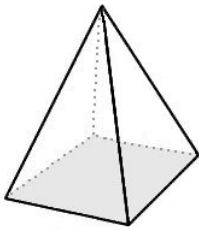
Type: _____

3)



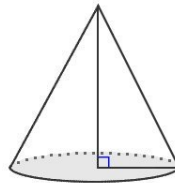
Type: _____

4)



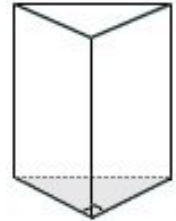
Type: _____

5)



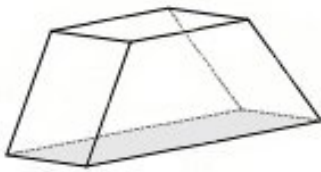
Type: _____

6)



Type: _____

7)



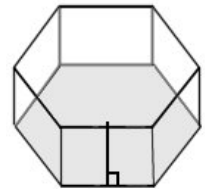
Type: _____

8)



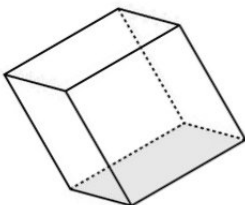
Type: _____

9)



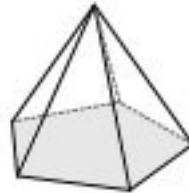
Type: _____

10)



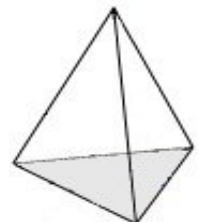
Type: _____

11)



Type: _____

12)



Type: _____



Name : _____


Score : _____

Teacher : _____

Date : _____

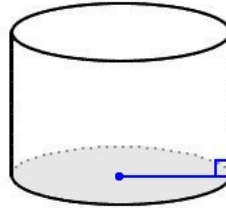
Identify Each Solid Figure.

1)



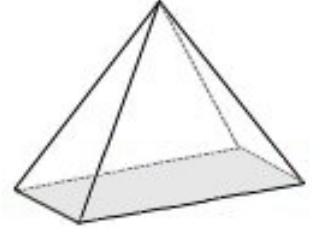
Type: Rectangular Prism

2)



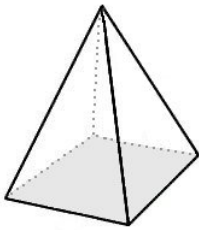
Type: Cylinder

3)



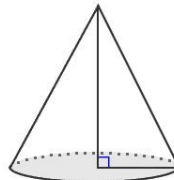
Type: Rectangular Pyramid

4)



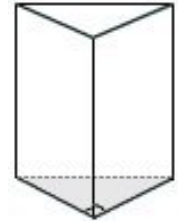
Type: Square Pyramid

5)



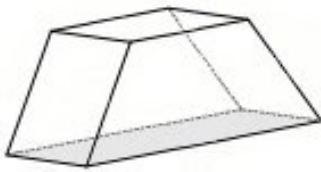
Type: Cone

6)



Type: Triangular Prism

7)



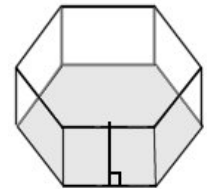
Type: Trapezoidal Prism

8)



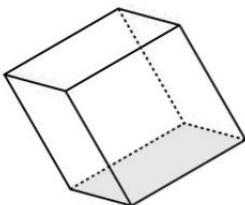
Type: Sphere

9)



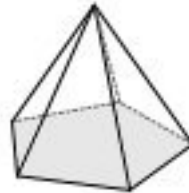
Type: Hexagonal Prism

10)



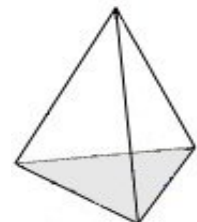
Type: Square Prism (Cube)

11)



Type: Pentagonal Pyramid

12)



Type: Triangular Pyramid

