

Solving & Graphing Inequalities

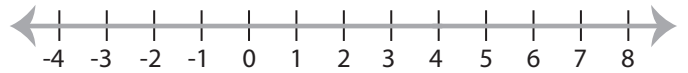
ES3

Solve each inequality and graph the solution.

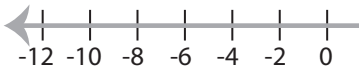
1) $\frac{x}{7} + 2 > 3$



2) $8x - 19 < 13$

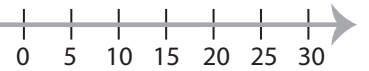


3) $6x + 5 \leq 17$



PREVIEW

Access the largest collection of
worksheets for just **\$19.95** per year!



Members, please
log in to
download this
worksheet.

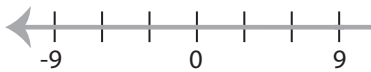
Log in

Not a member?
Please sign up to
gain complete
access.

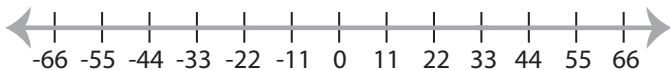
Sign up

www.mathworksheets4kids.com

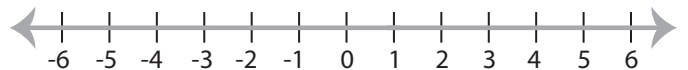
5) $3x - 12 > 15$



7) $\frac{x-1}{4} \leq 8$



8) $7x - 1 < 6$



Solving & Graphing Inequalities

ES3

Solve each inequality and graph the solution.

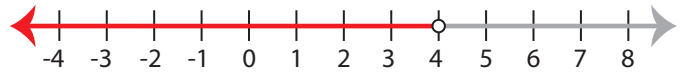
1) $\frac{x}{7} + 2 > 3$

$x > 7$



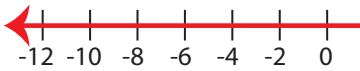
2) $8x - 19 < 13$

$x < 4$



3) $6x + 5 \leq 17$

$x \leq 2$



PREVIEW

Access the largest collection of
worksheets for just **\$19.95** per year!

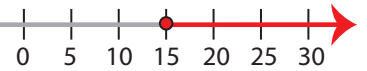
Members, please
log in to
download this
worksheet.

Log in

Not a member?
Please sign up to
gain complete
access.

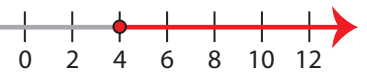
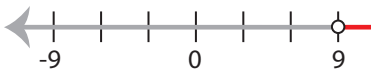
Sign up

www.mathworksheets4kids.com



5) $3x - 12 > 15$

$x > 9$



7) $\frac{x-1}{4} \leq 8$

$x \leq 33$



8) $7x - 1 < 6$

$x < 1$

