


Name : \_\_\_\_\_

# Making a Line Plot

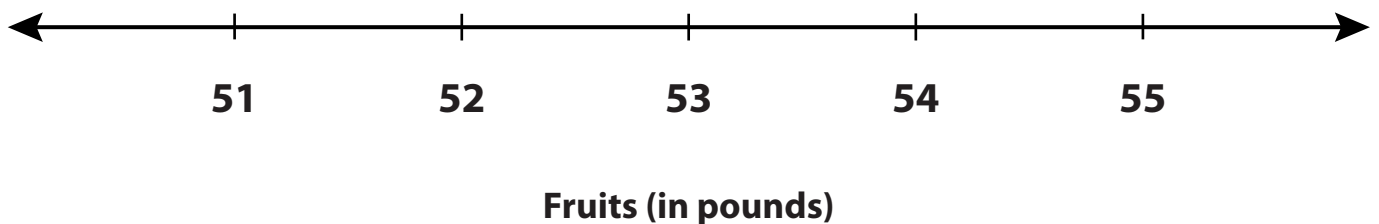
MS1

Jack runs a fruit stall in the local farmers' market. He records the amount of fruit sold (in pounds) over a period of 14 days. Make a line plot to represent the data below.

54	55	55	53	51
51	54	53	55	51
52	55	55	53	



Jack's Stall



Name : \_\_\_\_\_


## Answer Key

# Making a Line Plot

MS1

Jack runs a fruit stall in the local farmers' market. He records the amount of fruit sold (in pounds) over a period of 14 days. Make a line plot to represent the data below.

54	55	55	53	51
51	54	53	55	51
52	55	55	53	



Jack's Stall

