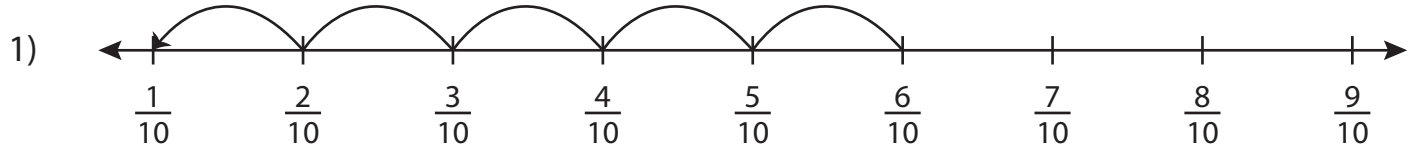


Name : _____

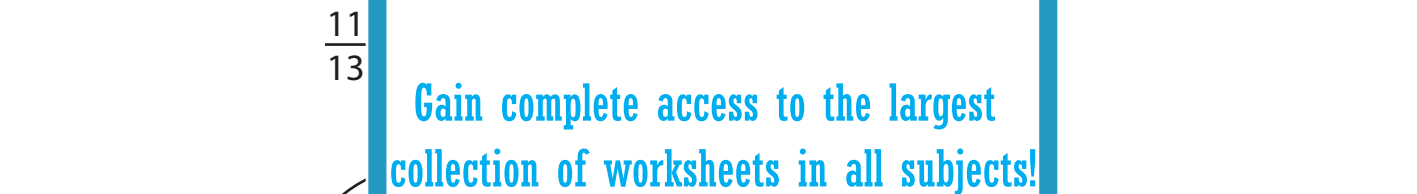
Missing Fractions

Proper Fractions: S2

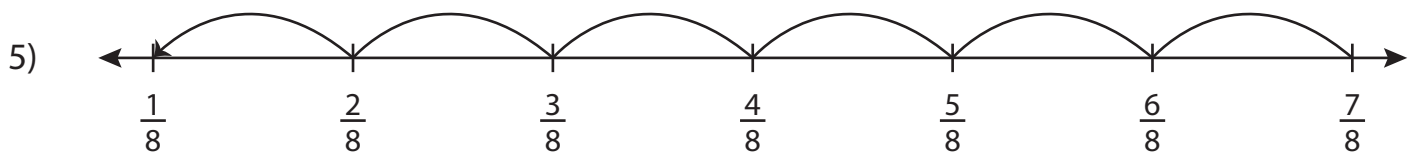
Complete the subtraction sentence that describes each model.



$$\underline{\hspace{2cm}} - \frac{5}{10} = \frac{1}{10}$$



$$\frac{3}{5} - \frac{1}{5} = \underline{\hspace{2cm}}$$



$$\frac{7}{8} - \underline{\hspace{2cm}} = \frac{1}{8}$$

PREVIEW

Gain complete access to the largest collection of worksheets in all subjects!

Members, please log in to download this worksheet.

Not a member? Please sign up to gain complete access.

www.mathworksheets4kids.com

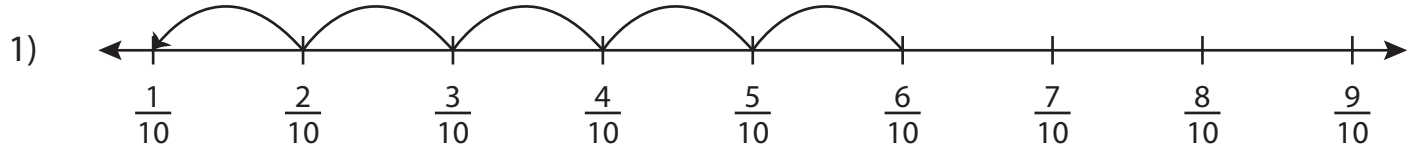
Name : _____

Answer key

Missing Fractions

Proper Fractions: S2

Complete the subtraction sentence that describes each model.



$$\underline{\frac{6}{10}} - \frac{5}{10} = \frac{1}{10}$$



PREVIEW

Gain complete access to the largest collection of worksheets in all subjects!

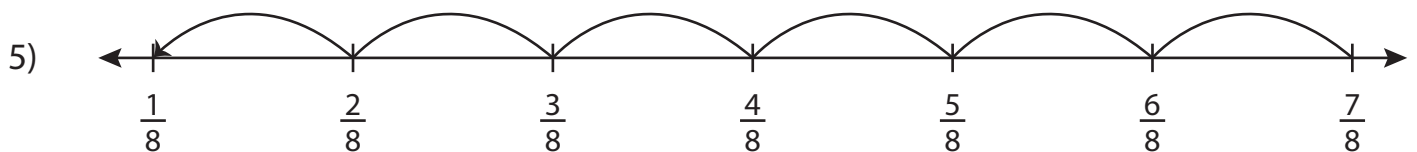
Members, please log in to download this worksheet.

Not a member? Please sign up to gain complete access.

www.mathworksheets4kids.com



$$\frac{3}{5} - \frac{1}{5} = \underline{\frac{2}{5}}$$



$$\frac{7}{8} - \underline{\frac{6}{8}} = \frac{1}{8}$$