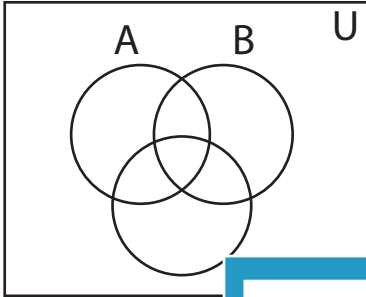


Shading - Venn Diagram

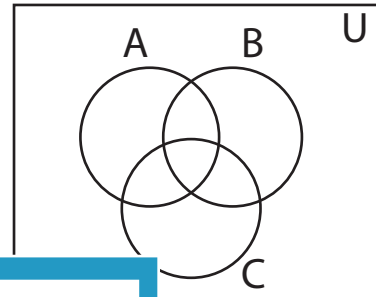
L2S3

Shade the given region.


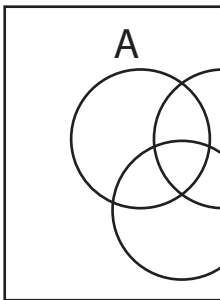
1) $B - A$



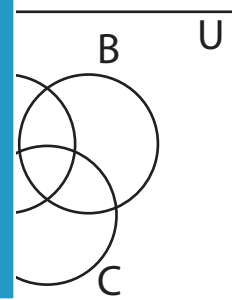
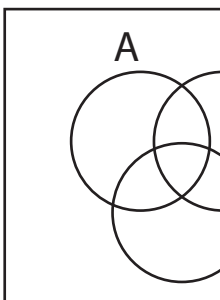
2) $(A - B)'$



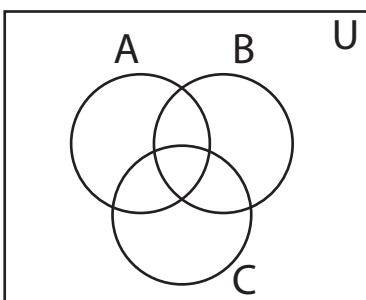
3) $A' \cup B'$



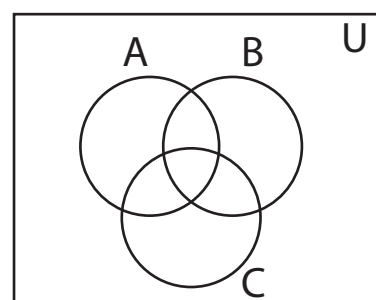
5) $A - C'$



7) B



8) $B' - C$



PREVIEW

Access the largest collection of
worksheets for just **\$19.95** per year!

Members, please
log in to
download this
worksheet.

Log in

Not a member?
Please sign up to
gain complete
access.

Sign up

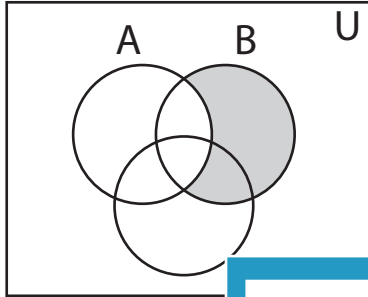
www.mathworksheets4kids.com

Answer key**Shading - Venn Diagram**

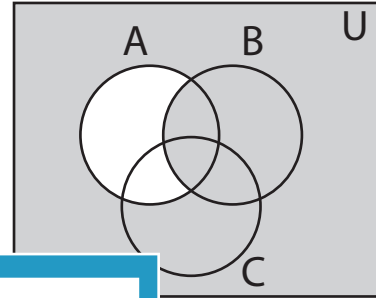
L2S3

Shade the given region.

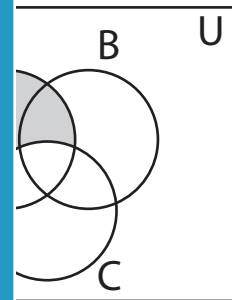
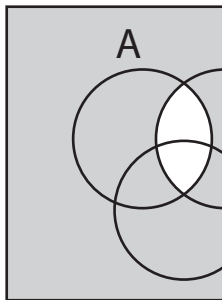
1) $B - A$



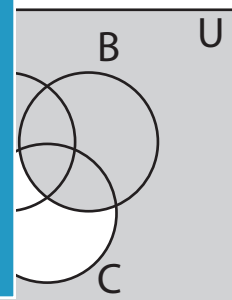
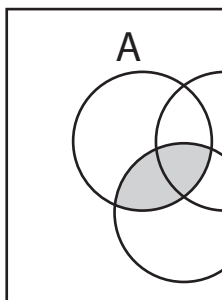
2) $(A - B)'$



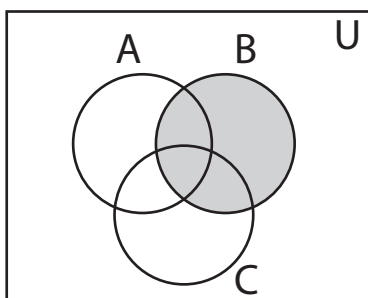
3) $A' \cup B'$



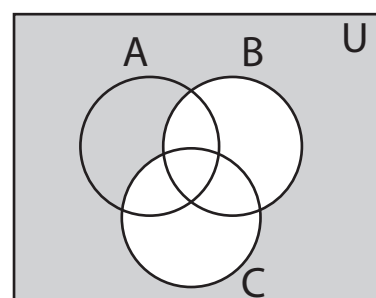
5) $A - C'$



7) B



8) $B' - C$

**PREVIEW**

Access the largest collection of
worksheets for just **\$19.95** per year!

Members, please
log in to
download this
worksheet.

Log in

Not a member?
Please sign up to
gain complete
access.

Sign up

www.mathworksheets4kids.com