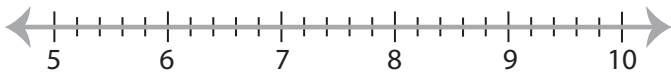


Solving & Graphing Inequalities

Fractions: S2

Solve each inequality and graph the solution.

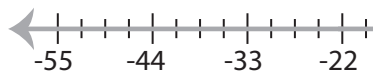
1) $x - 6 \leq \frac{9}{5}$



2) $2 > x + \frac{3}{4}$



3) $\frac{11}{4} \geq -\frac{1}{8}x$



PREVIEW

Access the largest collection of
worksheets for just **\$19.95** per year!

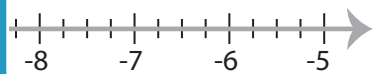
Members, please
log in to
download this
worksheet.

Log in

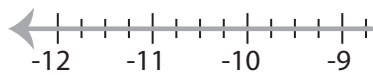
Not a member?
Please sign up to
gain complete
access.

Sign up


www.mathworksheets4kids.com



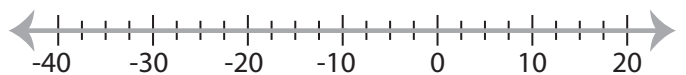
5) $-9 > x - \frac{1}{4}$



7) $-\frac{12}{5} \geq 6x$



8) $\frac{x}{5} \leq -2$



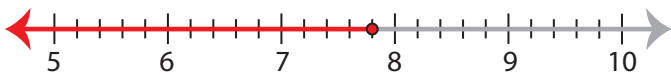
Solving & Graphing Inequalities

Fractions: S2

Solve each inequality and graph the solution.

1) $x - 6 \leq \frac{9}{5}$

$x \leq 7\frac{4}{5}$



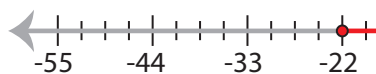
2) $2 > x + \frac{3}{4}$

$x < 1\frac{1}{4}$



3) $\frac{11}{4} \geq -\frac{1}{8}x$

$x \geq -22$



PREVIEW

Access the largest collection of
worksheets for just **\$19.95** per year!

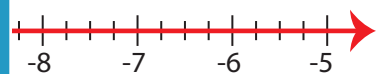
Members, please
log in to
download this
worksheet.

Log in

Not a member?
Please sign up to
gain complete
access.

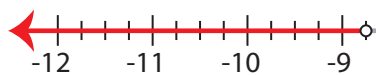
Sign up

www.mathworksheets4kids.com



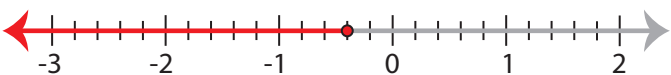
5) $-9 > x - \frac{1}{4}$

$x < -8\frac{3}{4}$



7) $-\frac{12}{5} \geq 6x$

$x \leq -\frac{2}{5}$



8) $\frac{x}{5} \leq -2$

$x \leq -10$

