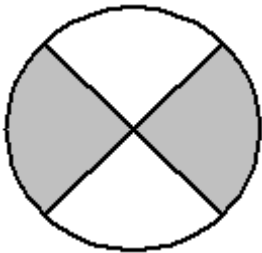


Student Name: _____

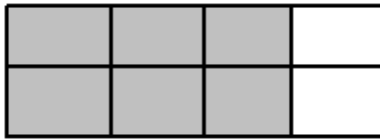
Score: _____

What Fraction of the Shape Shaded?

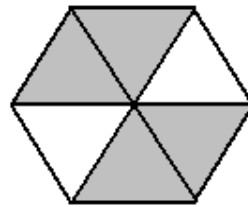
Sheet 2



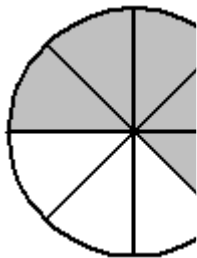
Answer: _____



Answer: _____



Answer: _____



Answer: _____

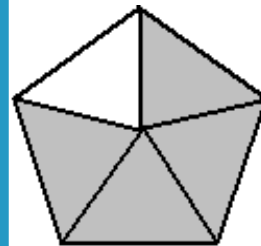
PREVIEW

Access the largest collection of worksheets for just **\$19.95** per year!

Members, please log in to download this worksheet.

Not a member? Please sign up to gain complete access.

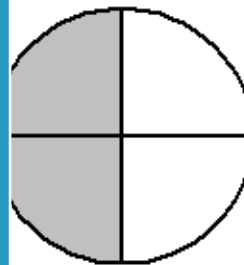
www.mathworksheets4kids.com



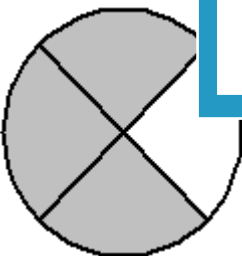
Answer: _____



Answer: _____



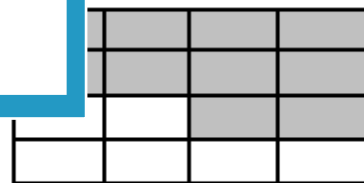
Answer: _____



Answer: _____



Answer: _____



Answer: _____

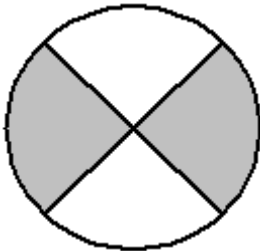
Student Name: _____

Score: _____

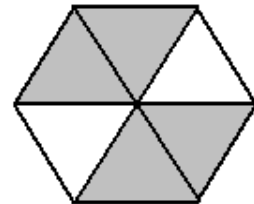
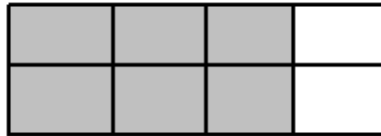
Answer key

What Fraction of the Shape Shaded?

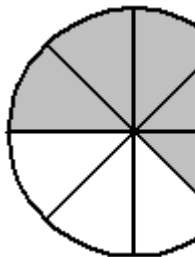
Sheet 2



Answer: $\frac{2}{4}$ or $\frac{1}{2}$



Answer: $\frac{4}{6}$ or $\frac{2}{3}$



Answer: $\frac{5}{8}$

PREVIEW

Access the largest collection of worksheets for just **\$19.95** per year!

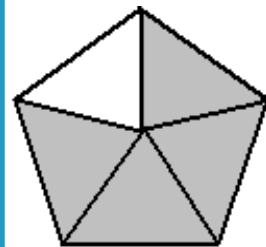
Members, please log in to download this worksheet.

Log in


Not a member? Please sign up to gain complete access.

Sign up

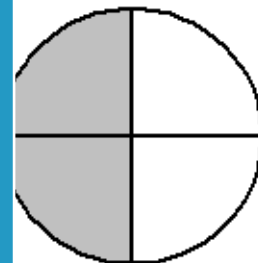
www.mathworksheets4kids.com



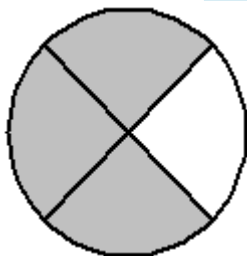
Answer: $\frac{4}{5}$



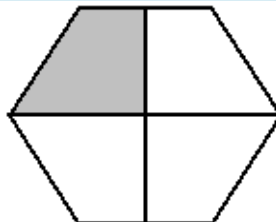
Answer: $\frac{6}{12}$ or $\frac{1}{2}$



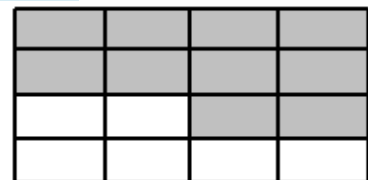
Answer: $\frac{2}{4}$ or $\frac{1}{2}$



Answer: $\frac{3}{4}$



Answer: $\frac{1}{4}$



Answer: $\frac{10}{16}$ or $\frac{5}{8}$