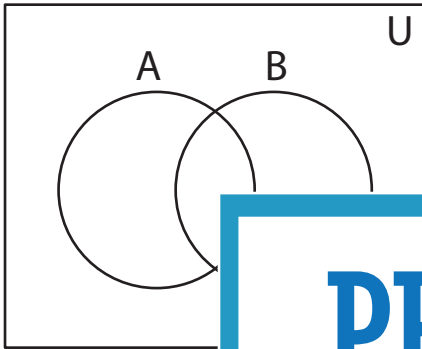


## Shading - Venn Diagram

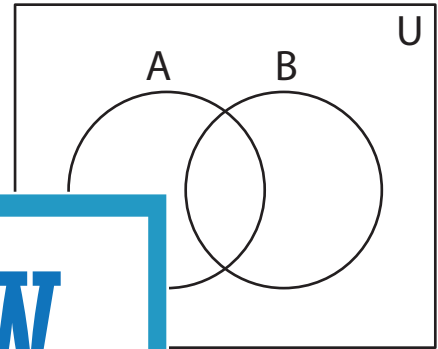
L2S1

Shade the given region.

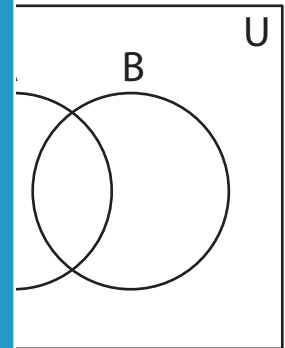
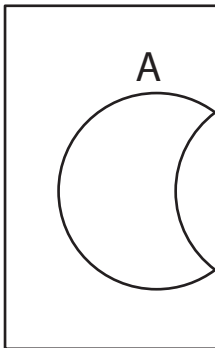
1)  $B - A$



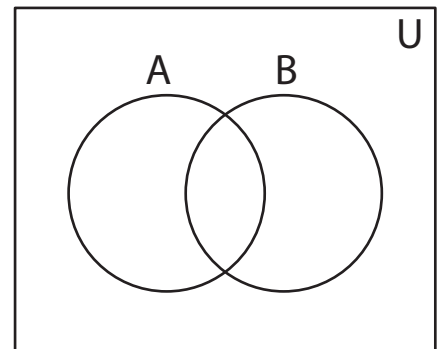
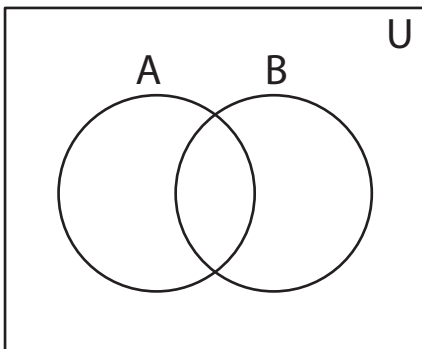
2)  $(A' - B)'$



3)  $A' \cap B'$



5)  $(A - B)'$



# PREVIEW

Access the largest collection of  
worksheets for just **\$19.95** per year!

Members, please  
log in to  
download this  
worksheet.

Log in

Not a member?  
Please sign up to  
gain complete  
access.

Sign up

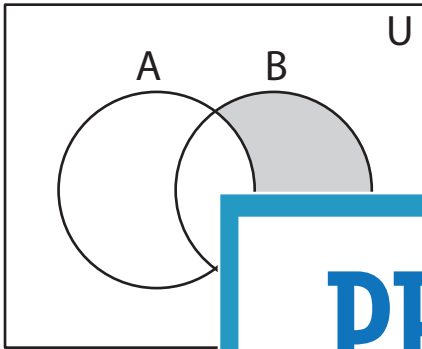
[www.mathworksheets4kids.com](http://www.mathworksheets4kids.com)

**Answer key****Shading - Venn Diagram**

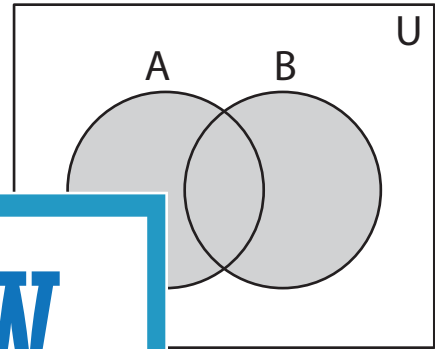
L2S1

Shade the given region.

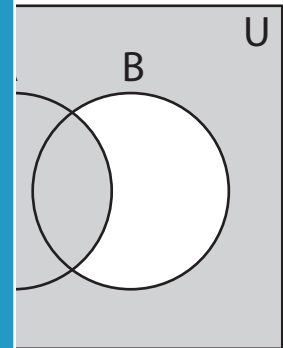
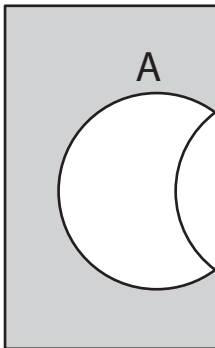
1)  $B - A$



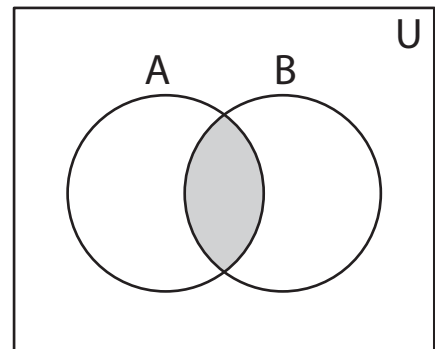
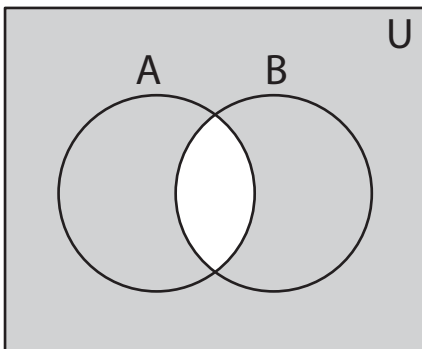
2)  $(A' - B)'$



3)  $A' \cap B'$



5)  $(A - B)'$

**PREVIEW**

Access the largest collection of  
worksheets for just **\$19.95** per year!

Members, please  
log in to  
download this  
worksheet.

**Log in**

Not a member?  
Please sign up to  
gain complete  
access.

**Sign up**

[www.mathworksheets4kids.com](http://www.mathworksheets4kids.com)