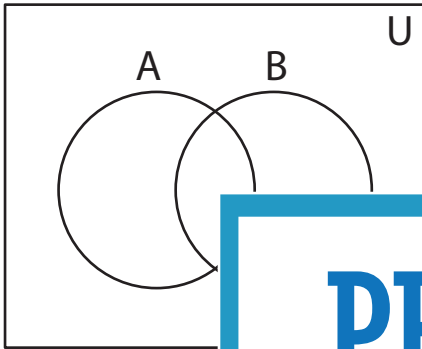


Shading - Venn Diagram

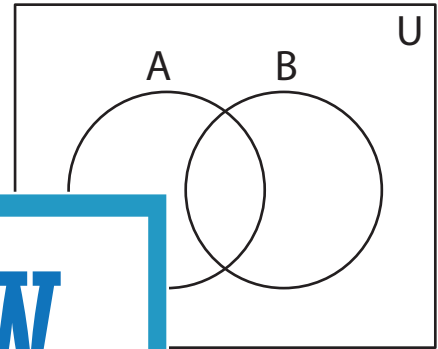
L1S3

Shade the given region.

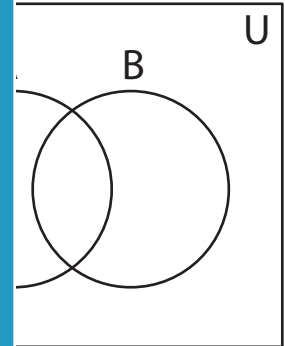
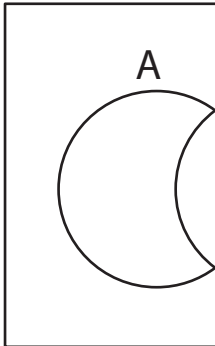
1) $(A \cup B)'$



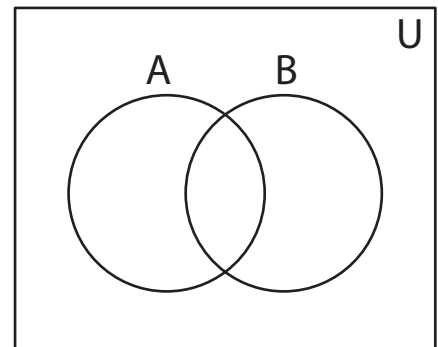
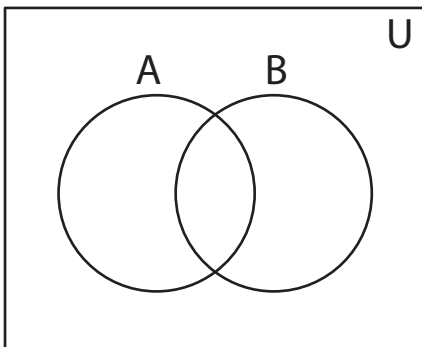
2) $(A' \cap B)'$



3) B'



5) $A \cap B$



PREVIEW

Access the largest collection of
worksheets for just **\$19.95** per year!

Members, please
log in to
download this
worksheet.

Log in

Not a member?
Please sign up to
gain complete
access.

Sign up

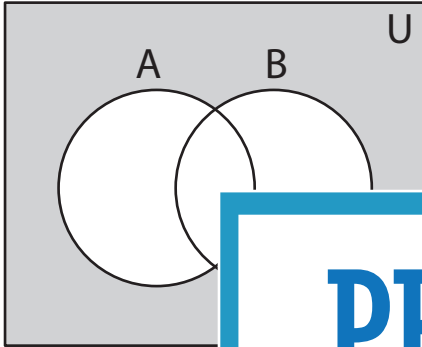
www.mathworksheets4kids.com

Answer key**Shading - Venn Diagram**

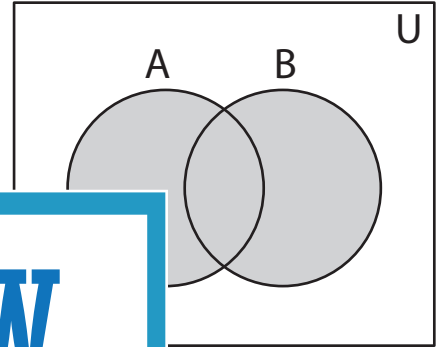
L1S3

Shade the given region.

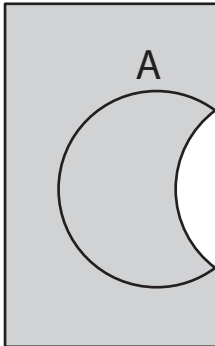
1) $(A \cup B)'$



2) $(A' \cap B)'$



3) B'



PREVIEW

Access the largest collection of
worksheets for just **\$19.95** per year!

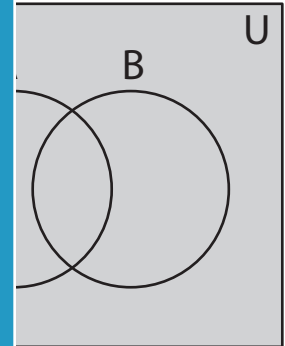
Members, please
log in to
download this
worksheet.

Log in

Not a member?
Please sign up to
gain complete
access.

Sign up

www.mathworksheets4kids.com



5) $A \cap B$

