


Name : _____

Make and Interpret

ES1

Ron treated his friends to ice creams on his birthday. Each of them ordered for ice-cream cones of different flavors. Read the data given below, make a line plot, and answer the questions.

Strawberry	Butterscotch	Chocolate	Vanilla
			
4	3	5	2

Ice-Cream Cones



- 1) How many flavors of ice cream did they order altogether? _____
- 2) Find the number of strawberry flavored ice-cream cones that were ordered in all. _____
- 3) How many orders were placed for chocolate and vanilla flavored ice-cream cones in total? _____
- 4) Which was the most preferred ice cream flavor? _____
- 5) How many more strawberry flavored ice-cream cones were ordered than butterscotch? _____



Name : _____

Answer Key

Make and Interpret

ES1

Ron treated his friends to ice creams on his birthday. Each of them ordered for ice-cream cones of different flavors. Read the data given below, make a line plot, and answer the questions.

Strawberry	Butterscotch	Chocolate	Vanilla
			
4	3	5	2

Ice-Cream Cones



- | | |
|---|--|
| 1) How many flavors of ice cream did they order altogether? | <u style="border-bottom: 1px solid black; color: red;">4 flavors</u> |
| 2) Find the number of strawberry flavored ice-cream cones that were ordered in all. | <u style="border-bottom: 1px solid black; color: red;">4 cones</u> |
| 3) How many orders were placed for chocolate and vanilla flavored ice-cream cones in total? | <u style="border-bottom: 1px solid black; color: red;">7 cones</u> |
| 4) Which was the most preferred ice cream flavor? | <u style="border-bottom: 1px solid black; color: red;">Chocolate</u> |
| 5) How many more strawberry flavored ice-cream cones were ordered than butterscotch? | <u style="border-bottom: 1px solid black; color: red;">1 cone</u> |