

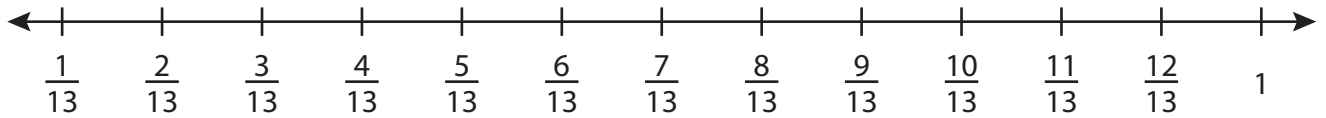
Name : _____

Subtraction using Number Line


Proper Fractions: S1

Indicate hops on each number line and complete the subtraction sentences.

1) $\frac{12}{13} - \frac{8}{13} =$ _____



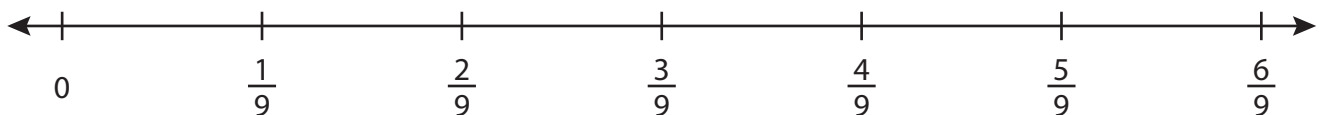
2) $\frac{9}{11} - \frac{7}{11} =$ _____



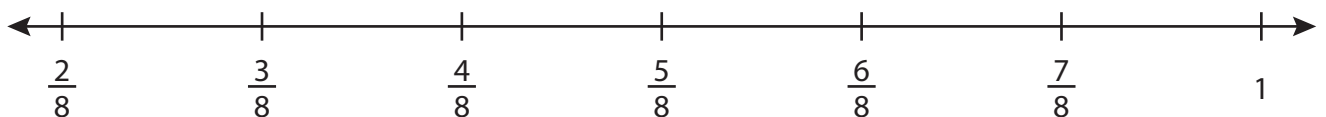
3) $\frac{2}{3} - \frac{1}{3} =$ _____



4) $\frac{6}{9} - \frac{5}{9} =$ _____



5) $\frac{4}{8} - \frac{2}{8} =$ _____



Name : _____

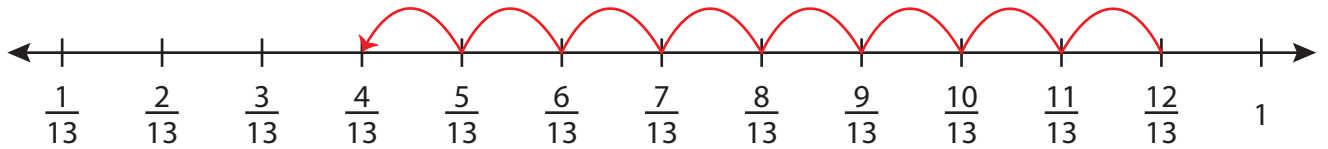
Answer key

Subtraction using Number Line

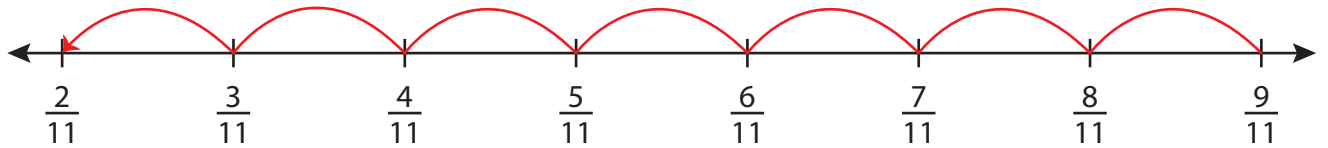
Proper Fractions: S1

Indicate hops on each number line and complete the subtraction sentences.

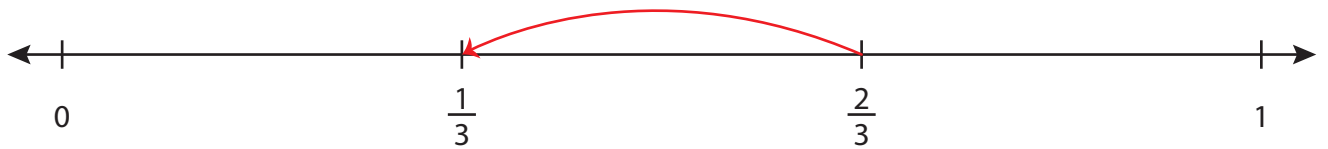
1) $\frac{12}{13} - \frac{8}{13} = \underline{\frac{4}{13}}$



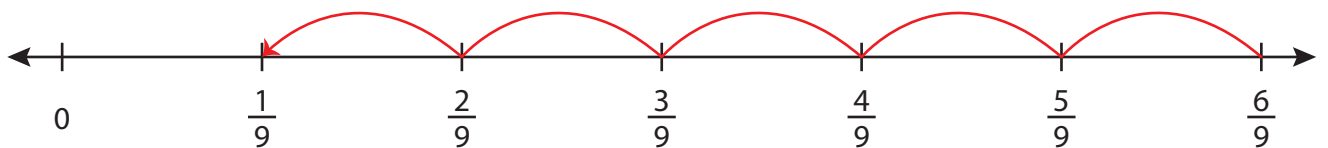
2) $\frac{9}{11} - \frac{7}{11} = \underline{\frac{2}{11}}$



3) $\frac{2}{3} - \frac{1}{3} = \underline{\frac{1}{3}}$



4) $\frac{6}{9} - \frac{5}{9} = \underline{\frac{1}{9}}$



5) $\frac{4}{8} - \frac{2}{8} = \underline{\frac{2}{8} = \frac{1}{4}}$

