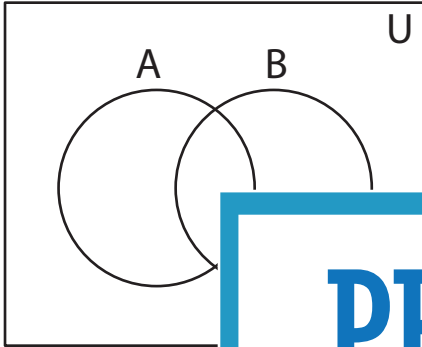


**Shading - Venn Diagram**

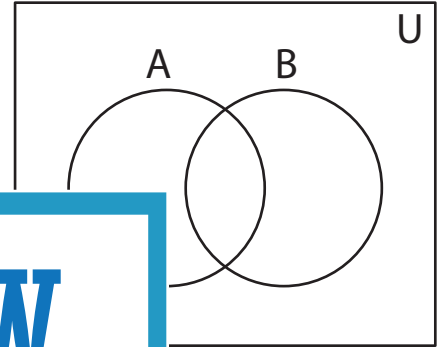
L2S3

Shade the given region.

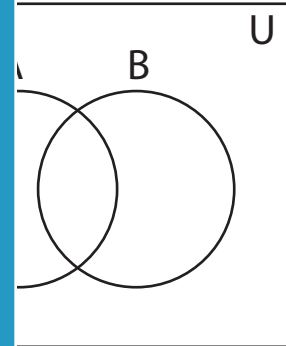
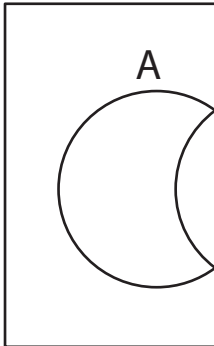
1)  $A \cup B$



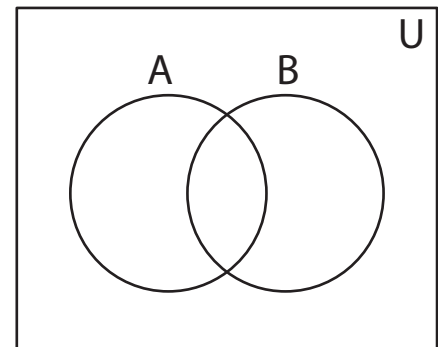
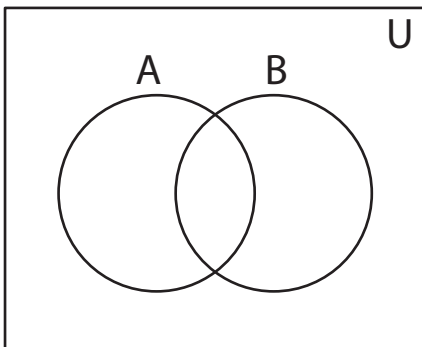
2)  $B' - A$



3)  $A' \cap B$



5)  $A - B'$



# PREVIEW

Access the largest collection of  
worksheets for just **\$19.95** per year!

Members, please  
log in to  
download this  
worksheet.

**Log in**

Not a member?  
Please sign up to  
gain complete  
access.

**Sign up**

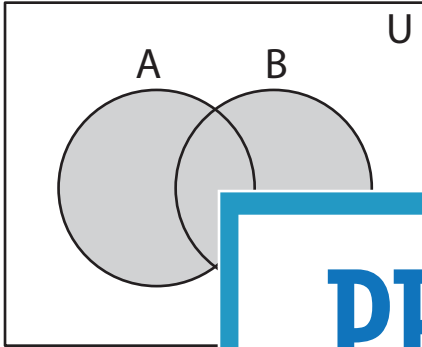
[www.mathworksheets4kids.com](http://www.mathworksheets4kids.com)

**Answer key****Shading - Venn Diagram**

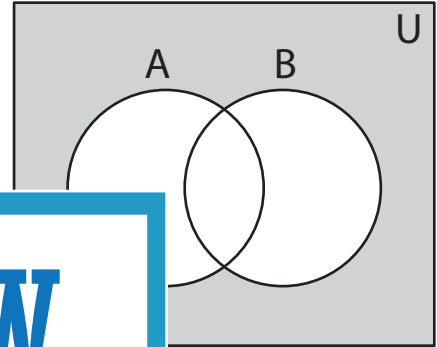
L2S3

Shade the given region.

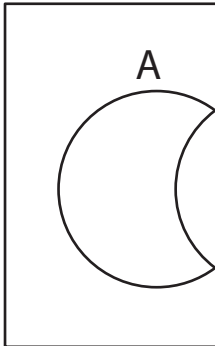
1)  $A \cup B$



2)  $B' - A$



3)  $A' \cap B$



**PREVIEW**

Access the largest collection of  
worksheets for just **\$19.95** per year!

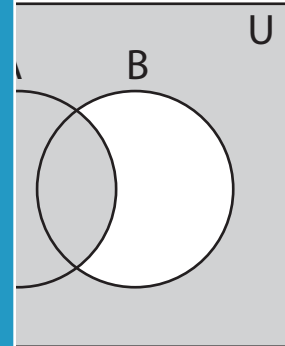
Members, please  
log in to  
download this  
worksheet.

**Log in**

Not a member?  
Please sign up to  
gain complete  
access.

**Sign up**

[www.mathworksheets4kids.com](http://www.mathworksheets4kids.com)



5)  $A - B'$

