

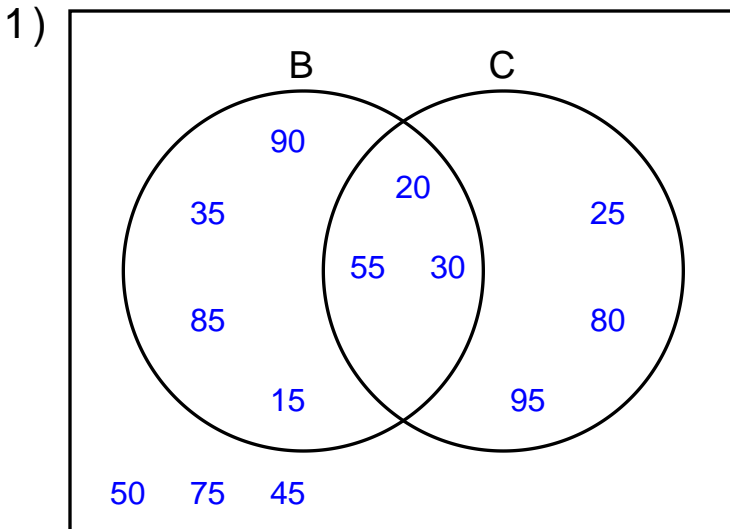
Name : _____

Score : _____

Teacher : _____

Date : _____

Solve the Problems Using the Venn Diagrams

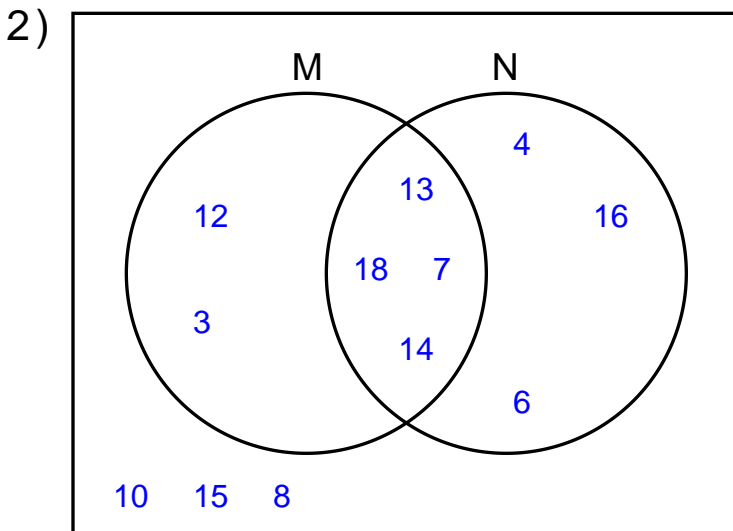


$B \cap C =$ _____

$C =$ _____

$(C - B)' =$ _____

$C - B' =$ _____

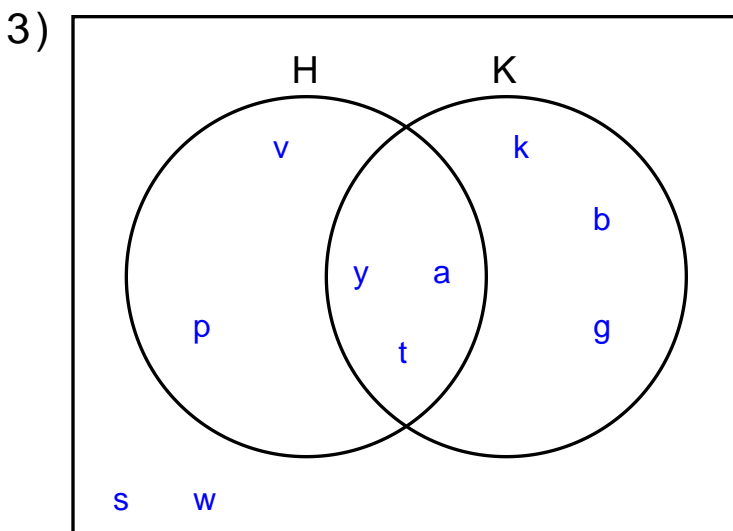


$M' =$ _____

$N - M' =$ _____

$M - N' =$ _____

$(M - N)' =$ _____



$H' - K =$ _____

$K =$ _____

$H \cup K' =$ _____

$H' - K' =$ _____

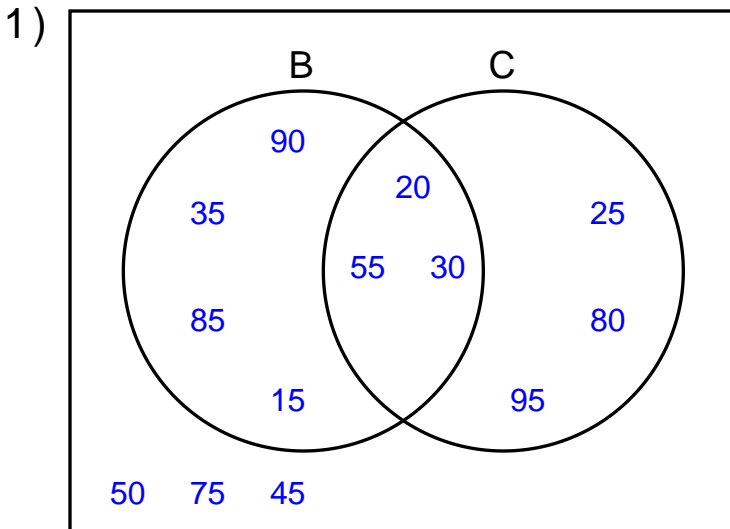
Name : _____

Score : _____

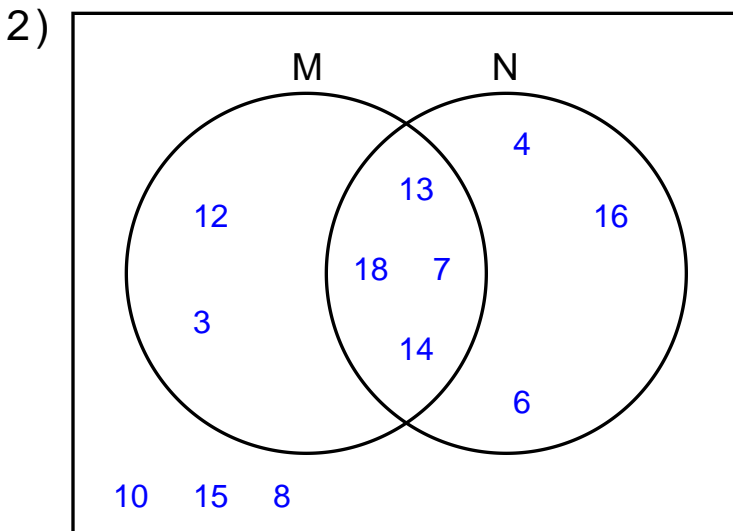
Teacher : _____

Date : _____

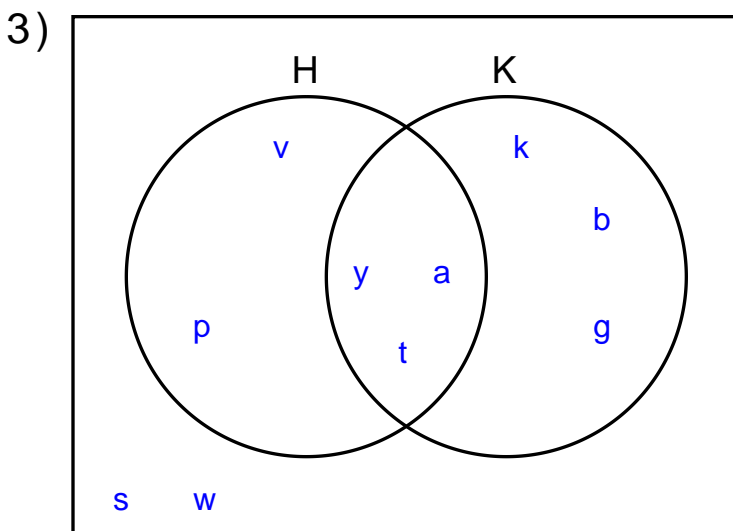
Solve the Problems Using the Venn Diagrams



$$B \cap C = \{ 20, 55, 30 \}$$
$$C = \{ 25, 80, 95, 20, 55, 30 \}$$
$$(C - B)' = \{ 90, 35, 85, 15, 20, 55, 30, 50, 75, 45 \}$$
$$C - B' = \{ 20, 55, 30 \}$$



$$M' = \{ 4, 16, 6, 10, 15, 8 \}$$
$$N - M' = \{ 13, 18, 7, 14 \}$$
$$M - N' = \{ 13, 18, 7, 14 \}$$
$$(M - N)' = \{ 4, 16, 6, 13, 18, 7, 14, 10, 15, 8 \}$$



$$H' - K = \{ s, w \}$$
$$K = \{ k, b, g, y, a, t \}$$
$$H \cup K' = \{ v, p, y, a, t, s, w \}$$
$$H' - K' = \{ k, b, g \}$$