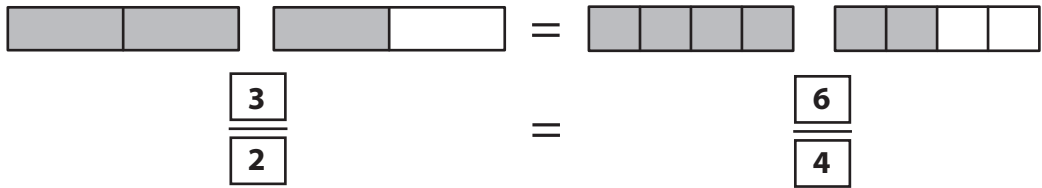


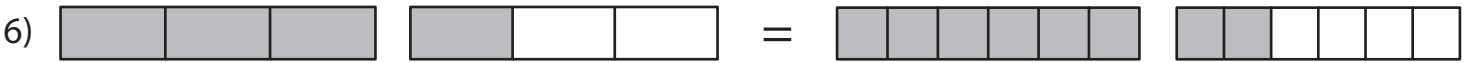
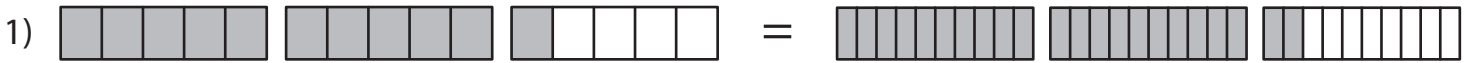
# Equivalent Fractions

Improper Fractions: S3

Example:



Write the equivalent improper fractions for the fraction bars in each problem.



## PREVIEW

Access the largest collection of  
worksheets for just **\$19.95** per year!

Members, please  
log in to  
download this  
worksheet.

Log in

Not a member?  
Please sign up to  
gain complete  
access.

Sign up

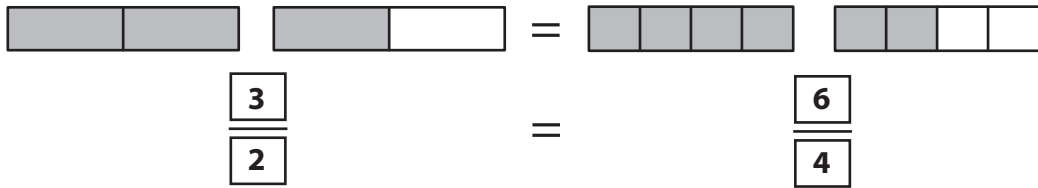
[www.mathworksheets4kids.com](http://www.mathworksheets4kids.com)

## Answer key

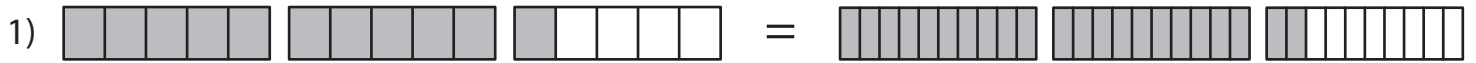
### Equivalent Fractions

Improper Fractions: S3

Example:



Write the equivalent improper fractions for the fraction bars in each problem.



$\frac{11}{5}$

$\frac{22}{10}$



$\frac{13}{5}$

$\frac{15}{9}$



$\frac{11}{5}$

$\frac{24}{10}$



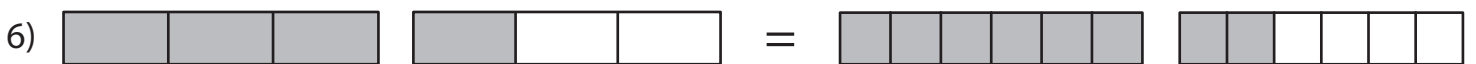
$\frac{14}{5}$

$\frac{21}{12}$



$\frac{5}{2}$

$\frac{15}{6}$



$\frac{4}{3}$

$\frac{8}{6}$

# PREVIEW

Access the largest collection of worksheets for just **\$19.95** per year!

Members, please log in to download this worksheet.

Log in

Not a member? Please sign up to gain complete access.

Sign up

[www.mathworksheets4kids.com](http://www.mathworksheets4kids.com)