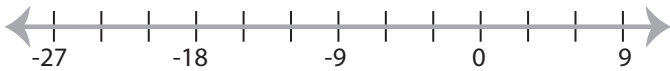


## Solving & Graphing Inequalities

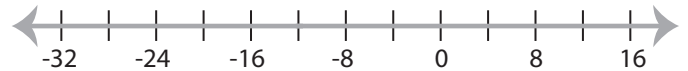
DS2

Solve each inequality and graph the solution.

1)  $-29 \geq x - 5$



3)  $\frac{x}{3} < -4$



3)  $-22 \leq 11x$



**PREVIEW**

Access the largest collection of  
worksheets for just **\$19.95** per year!

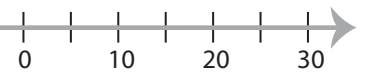
Members, please  
log in to  
download this  
worksheet.

Log in

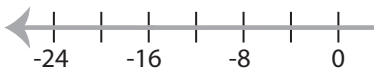
Not a member?  
Please sign up to  
gain complete  
access.

Sign up

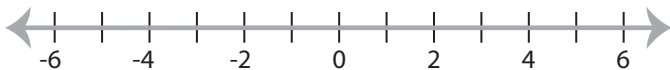
[www.mathworksheets4kids.com](http://www.mathworksheets4kids.com)



5)  $-8 < \frac{x}{2}$



7)  $24 \geq -8x$



8)  $-21 > 3x$



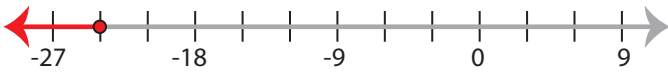
**Solving & Graphing Inequalities**

DS2

Solve each inequality and graph the solution.

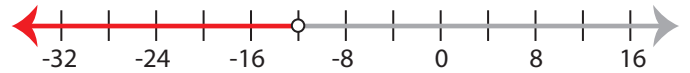
1)  $-29 \geq x - 5$

$x \leq -24$



3)  $\frac{x}{3} < -4$

$x < -12$



3)  $-22 \leq 11x$

$x \geq -2$



**PREVIEW**

Access the largest collection of  
worksheets for just **\$19.95** per year!

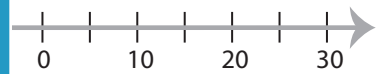
Members, please  
log in to  
download this  
worksheet.

**Log in**

Not a member?  
Please sign up to  
gain complete  
access.

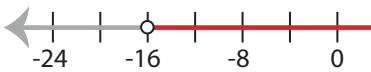
**Sign up**

[www.mathworksheets4kids.com](http://www.mathworksheets4kids.com)



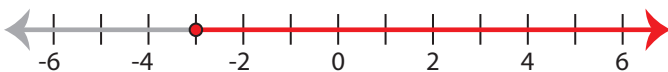
5)  $-8 < \frac{x}{2}$

$x > -16$



7)  $24 \geq -8x$

$x \geq -3$



8)  $-21 > 3x$

$x < -7$

