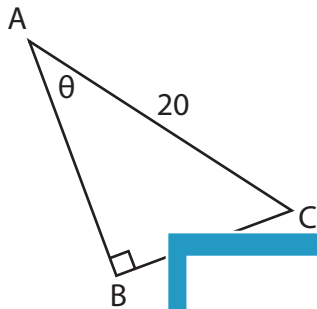


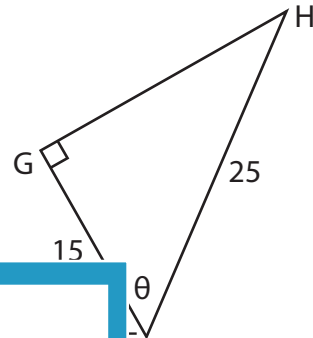
Inverse Trigonometric Ratios

Find the value of θ in degrees. Round the answer to the nearest degree.

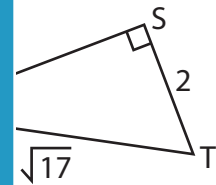
1)



2)



3)



PREVIEW

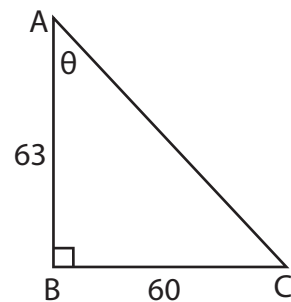
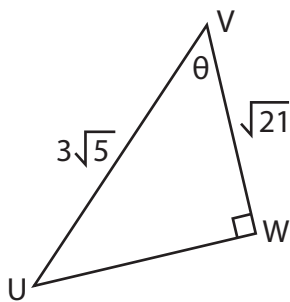
Gain complete access to the largest collection of worksheets in all subjects!

Members, please log in to download this worksheet.

Not a member? Please sign up to gain complete access.

www.mathworksheets4kids.com

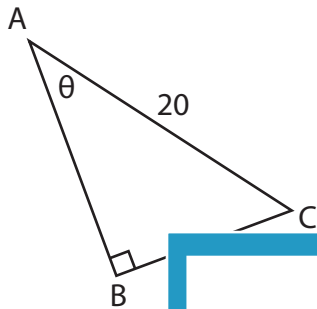
5)



Inverse Trigonometric Ratios

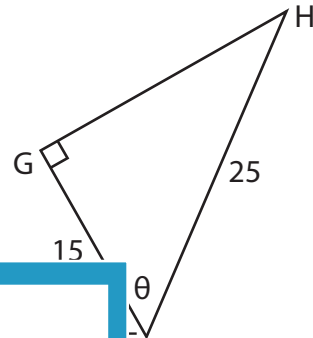
Find the value of θ in degrees. Round the answer to the nearest degree.

1)



37

2)

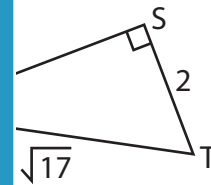


53°

3)



26



29°

PREVIEW

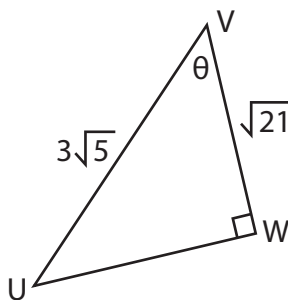
Gain complete access to the largest collection of worksheets in all subjects!

Members, please log in to download this worksheet.

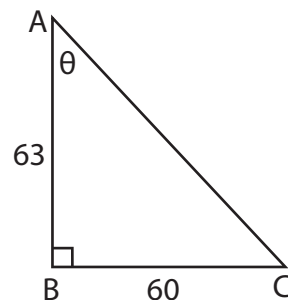
Not a member? Please sign up to gain complete access.

www.mathworksheets4kids.com

5)



47°



44°