

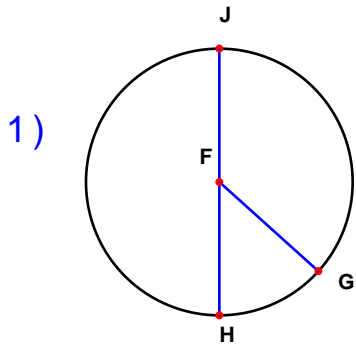
Name : _____

Score : _____

Teacher : _____

Date : _____

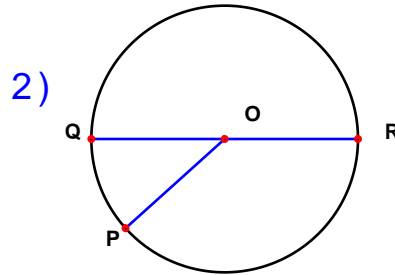
Identify the elements for each problem.



Circle: _____

Radius: _____

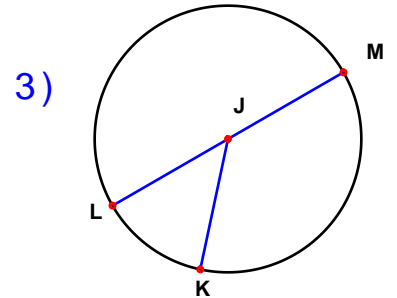
Diameter: _____



Circle: _____

Radius: _____

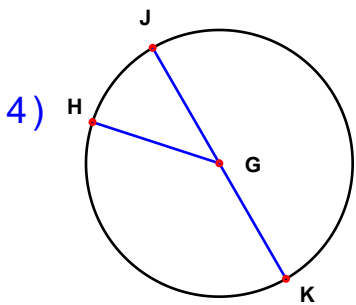
Diameter: _____



Circle: _____

Radius: _____

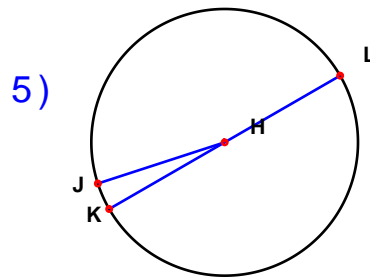
Diameter: _____



Circle: _____

Radius: _____

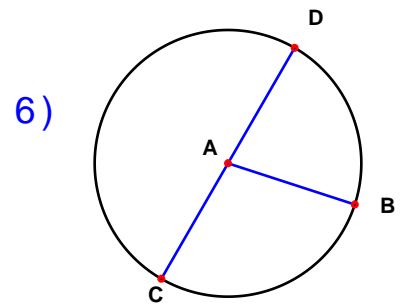
Diameter: _____



Circle: _____

Radius: _____

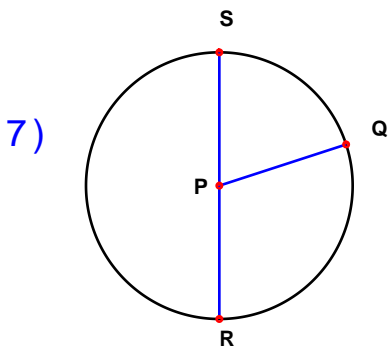
Diameter: _____



Circle: _____

Radius: _____

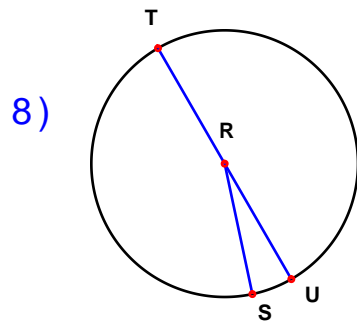
Diameter: _____



Circle: _____

Radius: _____

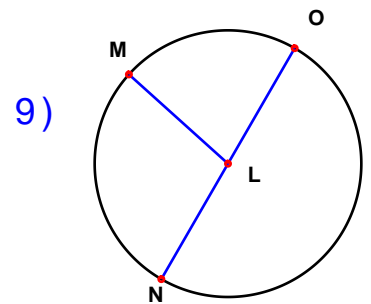
Diameter: _____



Circle: _____

Radius: _____

Diameter: _____



Circle: _____

Radius: _____

Diameter: _____



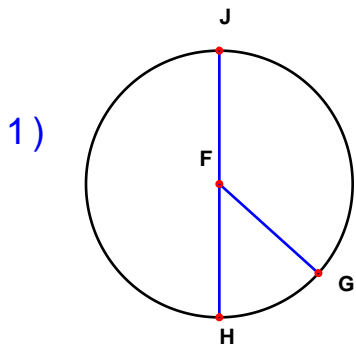
Name : _____

Score : _____

Teacher : _____

Date : _____

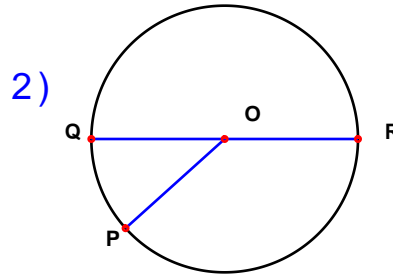
Identify the elements for each problem.



Circle: F

Radius: FG FH FJ

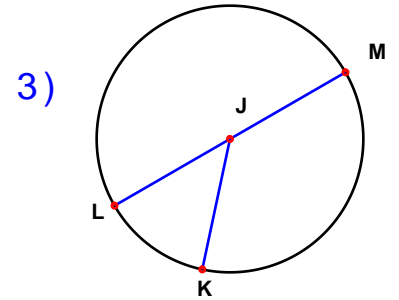
Diameter: HJ



Circle: O

Radius: OP OQ OR

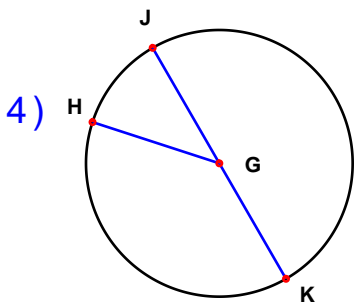
Diameter: QR



Circle: J

Radius: JK JL JM

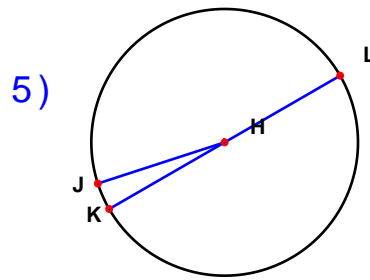
Diameter: LM



Circle: G

Radius: GH GJ GK

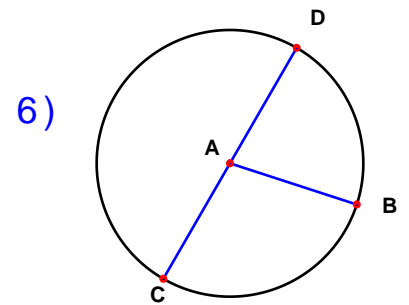
Diameter: JK



Circle: H

Radius: HJ HK HL

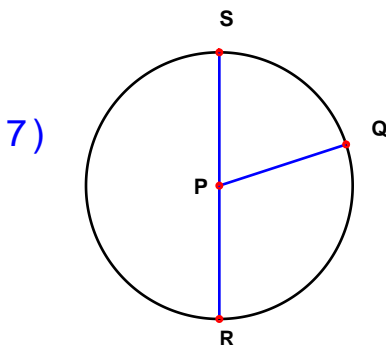
Diameter: KL



Circle: A

Radius: AB AC AD

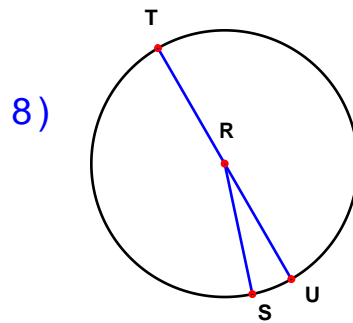
Diameter: CD



Circle: P

Radius: PQ PR PS

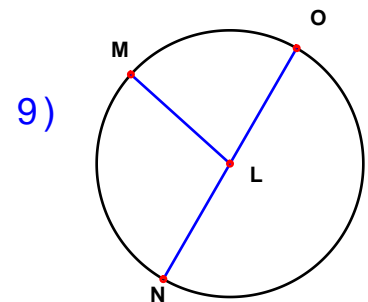
Diameter: RS



Circle: R

Radius: RS RT RU

Diameter: TU



Circle: L

Radius: LM LN LO

Diameter: NO

