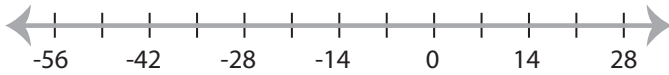


## Graphing Compound Inequalities

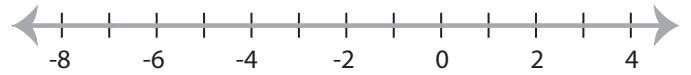
MS2

Graph the compound inequalities.

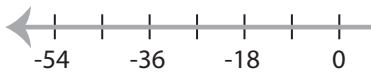
1)  $x \leq -35$  and  $x \leq 21$



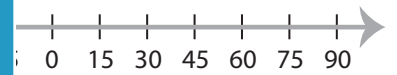
2)  $-6 < x$  or  $x \geq -7$



3)  $18 > x$  and  $x < 27$



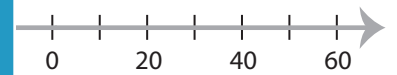
15



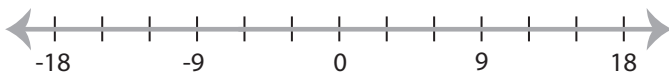
5)  $-32 < x$  or  $x \geq -48$



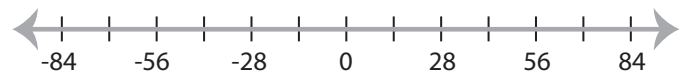
$< x$



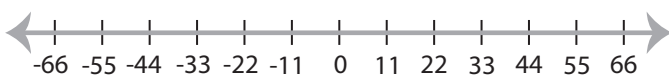
7)  $x \geq -3$  or  $x \geq -6$



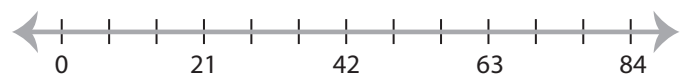
42



9)  $-44 < x$  and  $55 \leq x$



10)  $x \leq 77$  or  $x < 21$



# PREVIEW

Access the largest collection of  
worksheets for just **\$19.95** per year!

Members, please  
log in to  
download this  
worksheet.

Log in

Not a member?  
Please sign up to  
gain complete  
access.

Sign up

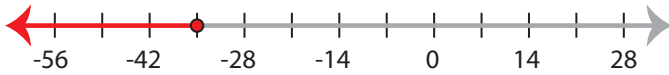
[www.mathworksheets4kids.com](http://www.mathworksheets4kids.com)

## Graphing Compound Inequalities

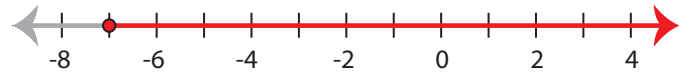
MS2

Graph the compound inequalities.

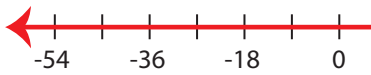
1)  $x \leq -35$  and  $x \leq 21$



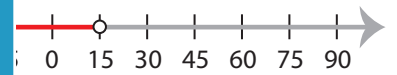
2)  $-6 < x$  or  $x \geq -7$



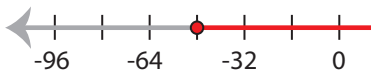
3)  $18 > x$  and  $x < 27$



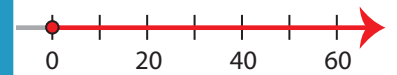
15



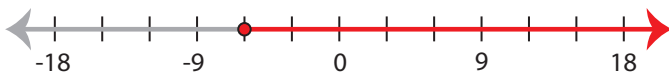
5)  $-32 < x$  or  $x \geq -48$



$< x$



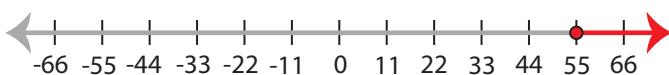
7)  $x \geq -3$  or  $x \geq -6$



42



9)  $-44 < x$  and  $55 \leq x$



10)  $x \leq 77$  or  $x < 21$



# PREVIEW

Access the largest collection of  
worksheets for just **\$19.95** per year!

Members, please  
log in to  
download this  
worksheet.

Log in

Not a member?  
Please sign up to  
gain complete  
access.

Sign up

[www.mathworksheets4kids.com](http://www.mathworksheets4kids.com)