

Name : \_\_\_\_\_

Score : \_\_\_\_\_

Teacher : \_\_\_\_\_

Date : \_\_\_\_\_

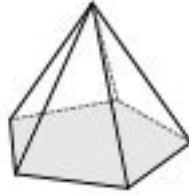
**Identify Each Solid Figure.**

1)




Type: \_\_\_\_\_

2)



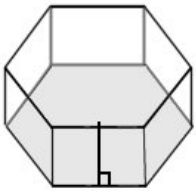
Type: \_\_\_\_\_

3)



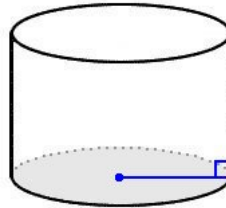
Type: \_\_\_\_\_

4)



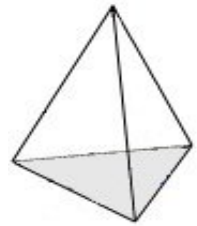
Type: \_\_\_\_\_

5)



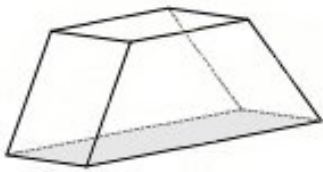
Type: \_\_\_\_\_

6)



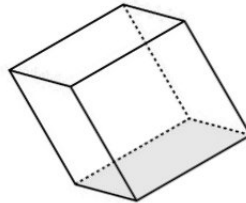
Type: \_\_\_\_\_

7)



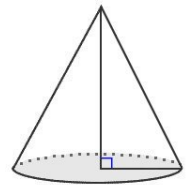
Type: \_\_\_\_\_

8)



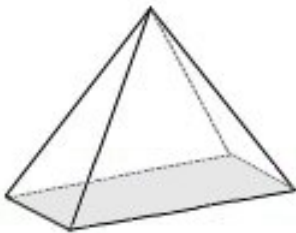
Type: \_\_\_\_\_

9)



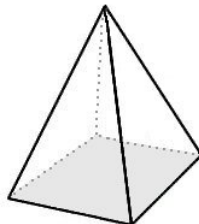
Type: \_\_\_\_\_

10)



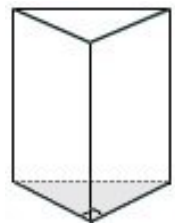
Type: \_\_\_\_\_

11)



Type: \_\_\_\_\_

12)



Type: \_\_\_\_\_



Name : \_\_\_\_\_

Score : \_\_\_\_\_

Teacher : \_\_\_\_\_

Date : \_\_\_\_\_

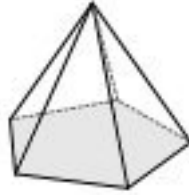
**Identify Each Solid Figure.**

1)




Type: Sphere

2)



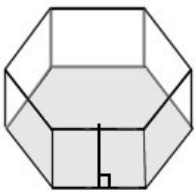
Type: Pentagonal Pyramid

3)



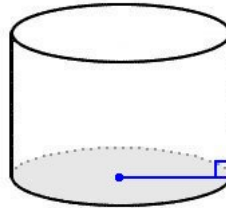
Type: Rectangular Prism

4)



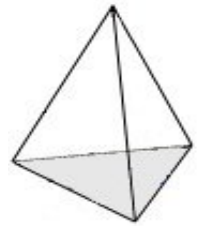
Type: Hexagonal Prism

5)



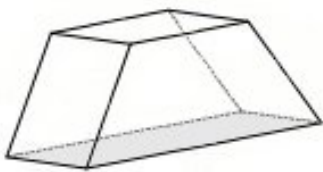
Type: Cylinder

6)



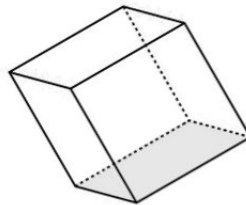
Type: Triangular Pyramid

7)



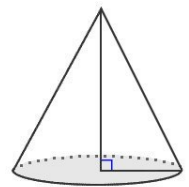
Type: Trapezoidal Prism

8)



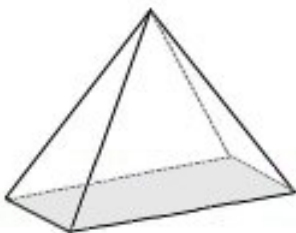
Type: Square Prism (Cube)

9)



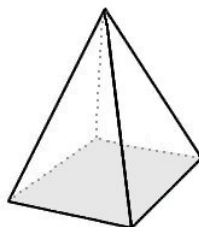
Type: Cone

10)



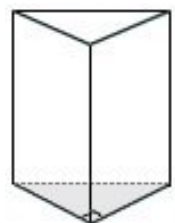
Type: Rectangular Pyramid

11)



Type: Square Pyramid

12)



Type: Triangular Prism

