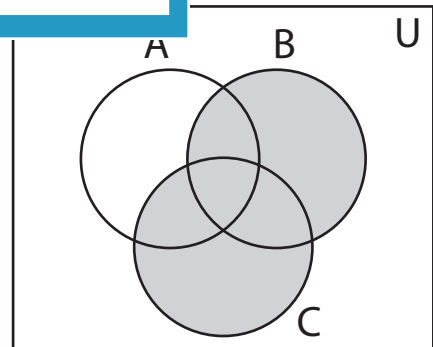
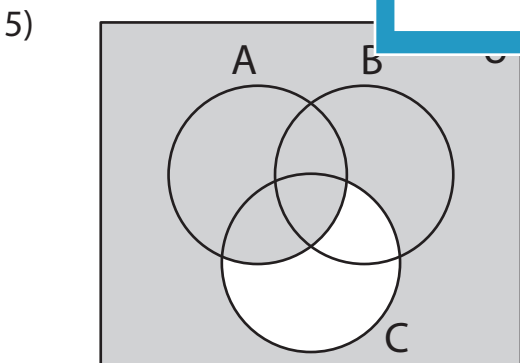
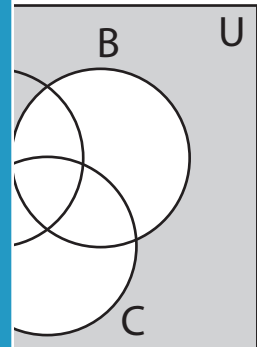
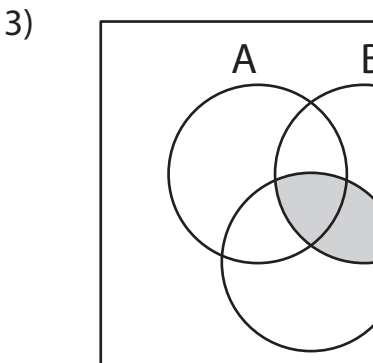
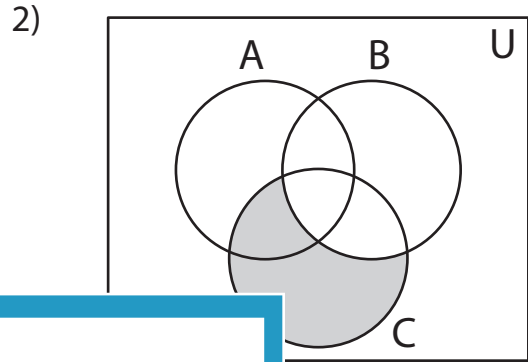
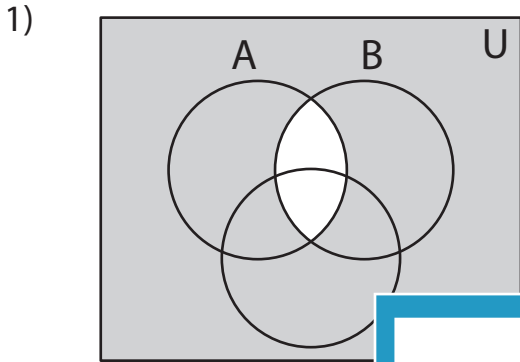


Venn Diagram

Determine the shaded region.



PREVIEW

Access the largest collection of worksheets for just **\$19.95** per year!

Members, please log in to download this worksheet.

Log in

Not a member? Please sign up to gain complete access.

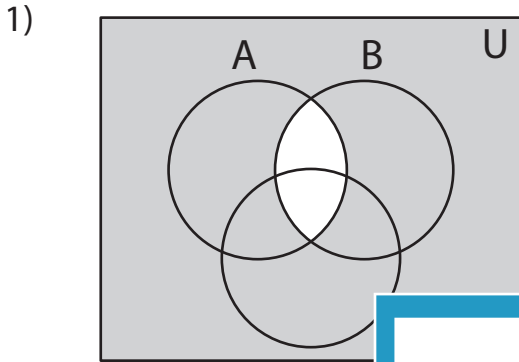
Sign up

www.mathworksheets4kids.com

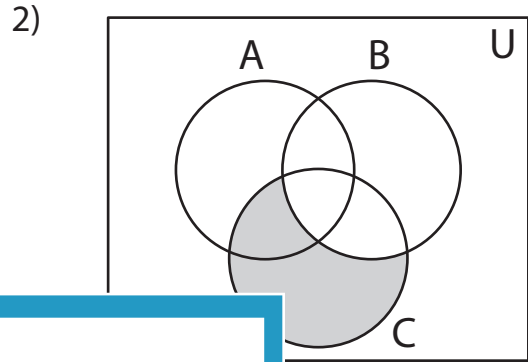
Answer key

Venn Diagram

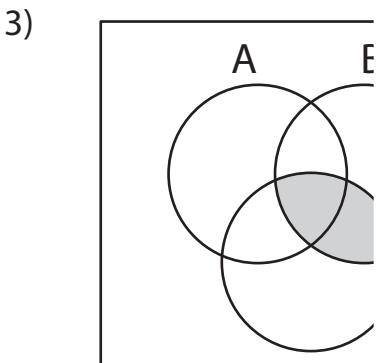
Determine the shaded region.



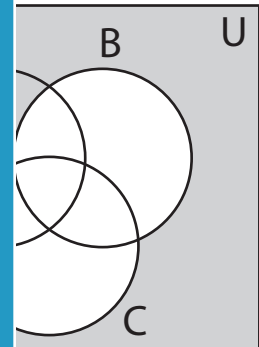
$(A \cap B)', (A' \cup B'), (A \cup B \cup C)'$



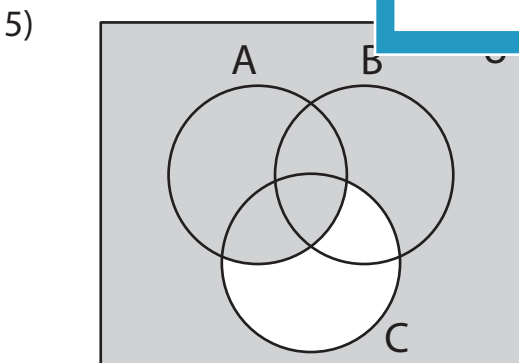
$(A \cap C), (B' - C') \text{ or } (C - B)$



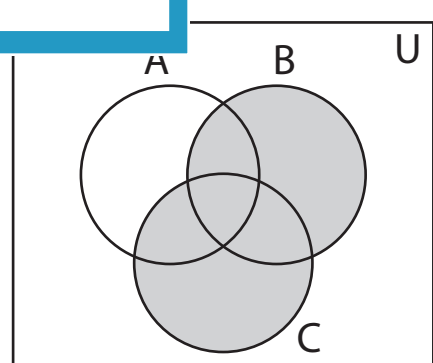
$(B \cap C), (B' \cup C'), (A \cup B \cup C)'$



$(A \cup C'), (B' - C) \text{ or } (C' - B)$



$(A \cup C'), (A' \cap C)', (A' - C')' \text{ or } (C - A)'$



$(B \cup C), (B' \cap C)', (B' - C)' \text{ or } (C' - B)'$

PREVIEW

Access the largest collection of worksheets for just **\$19.95** per year!

Members, please log in to download this worksheet.

Log in

Not a member? Please sign up to gain complete access.

Sign up

www.mathworksheets4kids.com