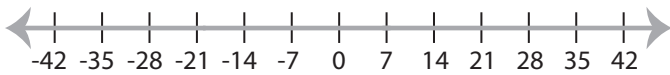


Solving & Graphing Inequalities

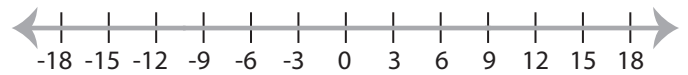
ES3

Solve each inequality and graph the solution.

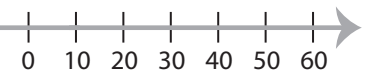
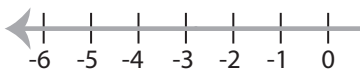
1) $9 + x \geq 16$



2) $\frac{x}{9} < 1$



3) $5x > 10$



PREVIEW

Access the largest collection of
worksheets for just **\$19.95** per year!

Members, please
log in to
download this
worksheet.

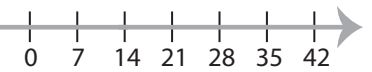
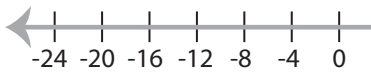
Log in

Not a member?
Please sign up to
gain complete
access.

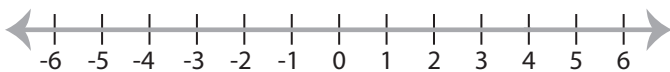
Sign up

www.mathworksheets4kids.com

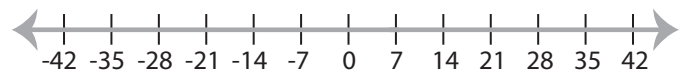
5) $x - 5 \geq 11$



7) $x + 8 > 12$



8) $2x \leq 14$



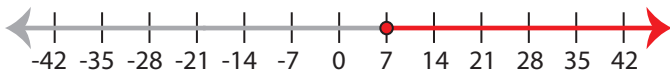
Solving & Graphing Inequalities

ES3

Solve each inequality and graph the solution.

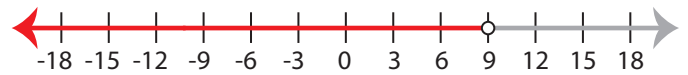
1) $9 + x \geq 16$

$x \geq 7$



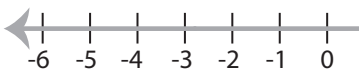
2) $\frac{x}{9} < 1$

$x < 9$



3) $5x > 10$

$x > 2$



PREVIEW

Access the largest collection of
worksheets for just **\$19.95** per year!

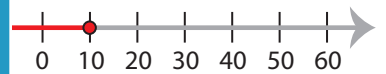
Members, please
log in to
download this
worksheet.

Log in

Not a member?
Please sign up to
gain complete
access.

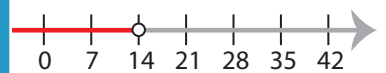
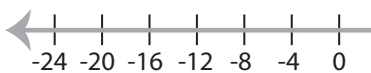
Sign up

www.mathworksheets4kids.com



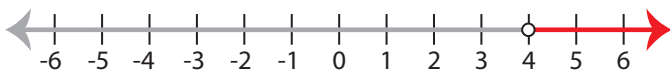
5) $x - 5 \geq 11$

$x \geq 16$



7) $x + 8 > 12$

$x > 4$



8) $2x \leq 14$

$x \leq 7$

