

Name : \_\_\_\_\_

Score : \_\_\_\_\_

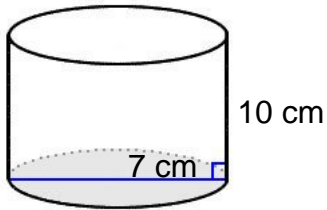
Teacher : \_\_\_\_\_

Date : \_\_\_\_\_

### Surface Area of Prisms, Pyramids, Cylinders, and Cones

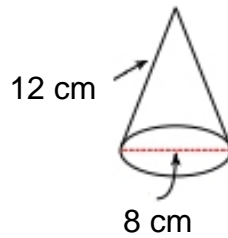
Find the surface area of each figure. Round answers to the nearest hundredth, if necessary.

1)



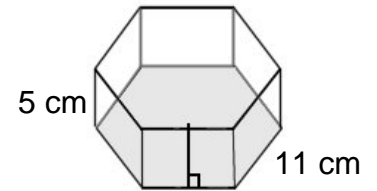
Surface Area: \_\_\_\_\_

2)



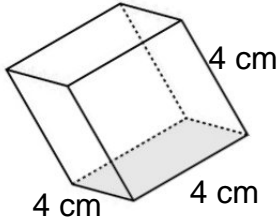
Surface Area: \_\_\_\_\_

3)



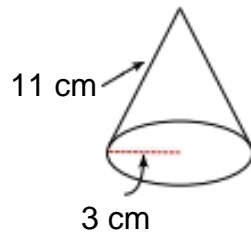
Surface Area: \_\_\_\_\_

4)



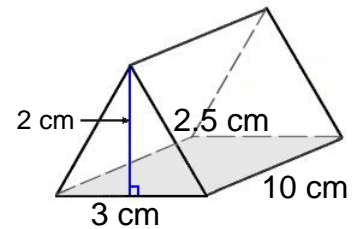
Surface Area: \_\_\_\_\_

5)



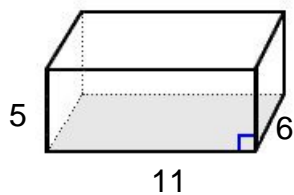
Surface Area: \_\_\_\_\_

6)



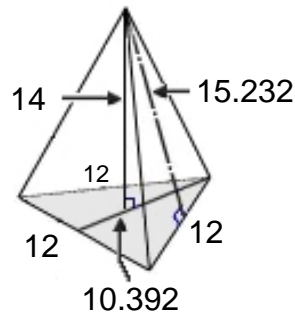
Surface Area: \_\_\_\_\_

7)



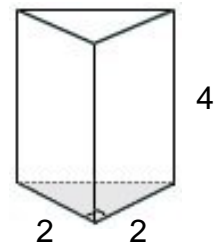
Surface Area: \_\_\_\_\_

8)



Surface Area: \_\_\_\_\_

9)



Surface Area: \_\_\_\_\_



Name : \_\_\_\_\_

Score : \_\_\_\_\_

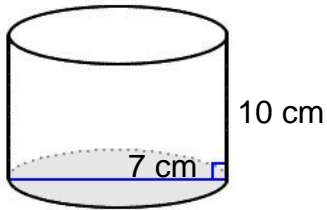
Teacher : \_\_\_\_\_

Date : \_\_\_\_\_

### Surface Area of Prisms, Pyramids, Cylinders, and Cones

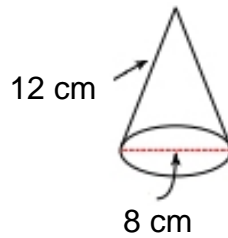
Find the surface area of each figure. Round answers to the nearest hundredth, if necessary.

1)



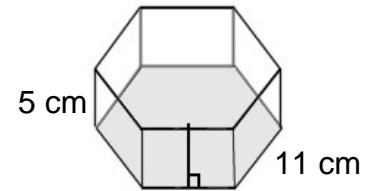
Surface Area: 296.88 cm<sup>2</sup>

2)



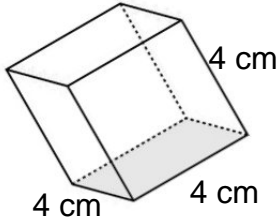
Surface Area: 201.06 cm<sup>2</sup>

3)



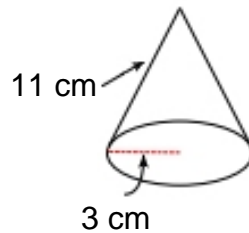
Surface Area: 958.73 cm<sup>2</sup>

4)



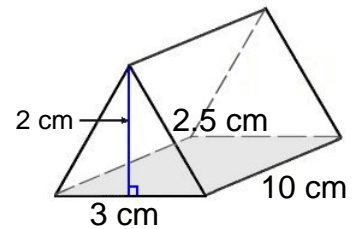
Surface Area: 96.00 cm<sup>2</sup>

5)



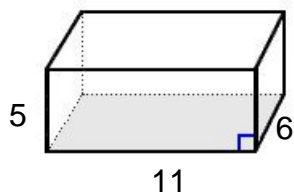
Surface Area: 131.95 cm<sup>2</sup>

6)



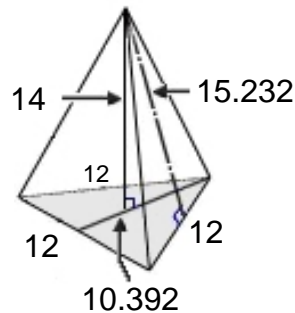
Surface Area: 86.00 cm<sup>2</sup>

7)



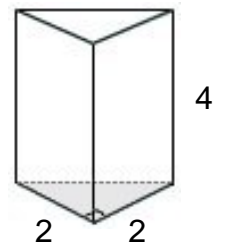
Surface Area: 302.00 cm<sup>2</sup>

8)



Surface Area: 336.53 cm<sup>2</sup>

9)



Surface Area: 31.31 cm<sup>2</sup>

