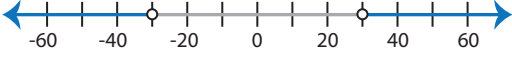
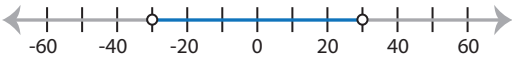
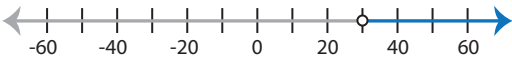
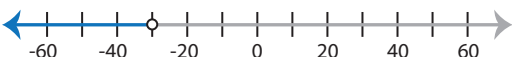


Identifying Graphs

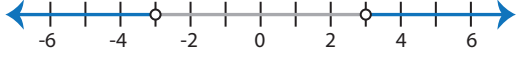
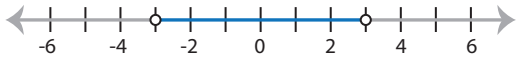
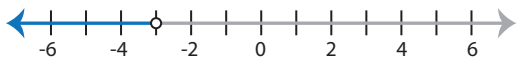
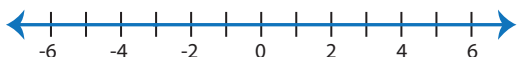
One-step: S2

Choose the correct graph that best describes the solution for each inequality.

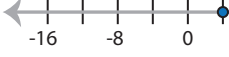

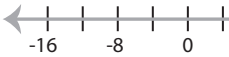

1) $\frac{|x|}{6} > 5$

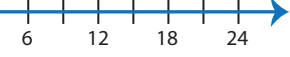
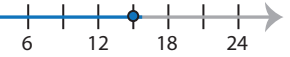

- a) 
- b) 
- c) 
- d) 

2) $-|3x| < 9$

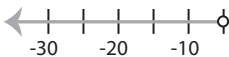

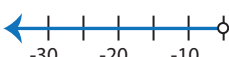

- a) 
- b) 
- c) 
- d) 

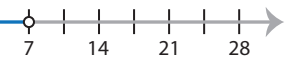
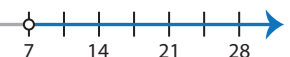
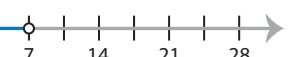
3) $|x - 8| \geq 4$

- a) 
- b) 
- c) 
- d) 

- 
- 
- 

5) $|5x| > 25$

- a) 
- b) 
- c) 
- d) 

- 
- 
- 

PREVIEW

Access the largest collection of
worksheets for just **\$19.95** per year!

Members, please
log in to
download this
worksheet.



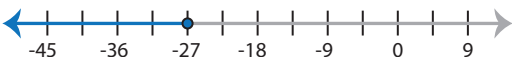

Log in

Not a member?
Please sign up to
gain complete
access.

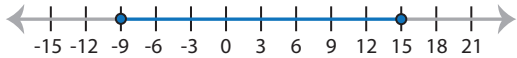
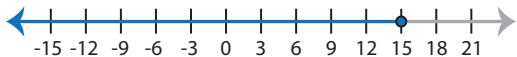
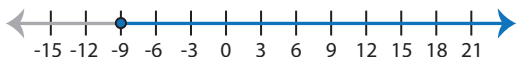
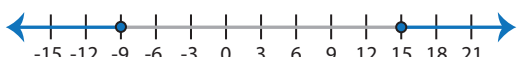
Sign up

www.mathworksheets4kids.com

7) $|x + 18| \geq 9$

- a) 
- b) 
- c) 
- d) 

8) $|x - 3| \leq 12$

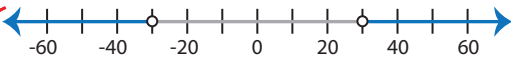


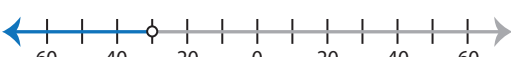
- a) 
- b) 
- c) 
- d) 

Identifying Graphs

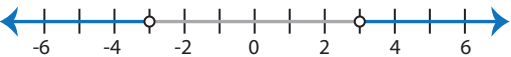
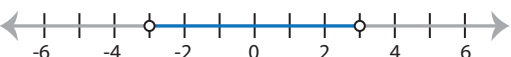
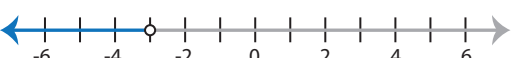

One-step: S2

Choose the correct graph that best describes the solution for each inequality.



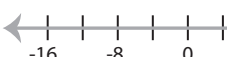

1) $\frac{|x|}{6} > 5$

- a) 
- b) 
- c) 
- d) 

2) $-|3x| < 9$

- a) 
- b) 
- c) 
- d) 

3) $|x - 8| \geq 4$

- a) 
- b) 
- c) 
- d) 

PREVIEW

Access the largest collection of worksheets for just **\$19.95** per year!




Members, please log in to download this worksheet.

Log in

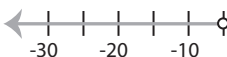
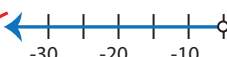


Not a member? Please sign up to gain complete access.

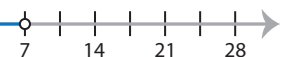
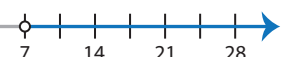
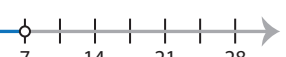
Sign up

www.mathworksheets4kids.com

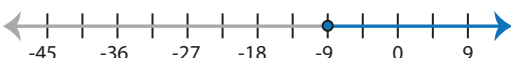
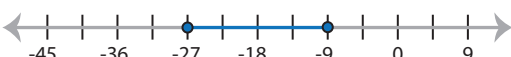


- 
- 
- 

5) $|5x| > 25$

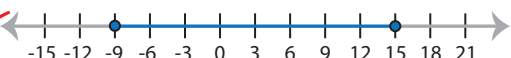
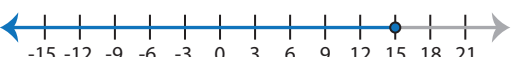
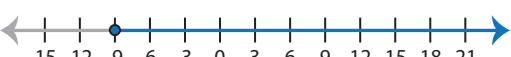
- a) 
- b) 
- c) 
- d) 

- 
- 
- 

7) $|x + 18| \geq 9$

- a) 
- b) 
- c) 
- d) 

8) $|x - 3| \leq 12$

- a) 
- b) 
- c) 
- d) 