

Name : \_\_\_\_\_

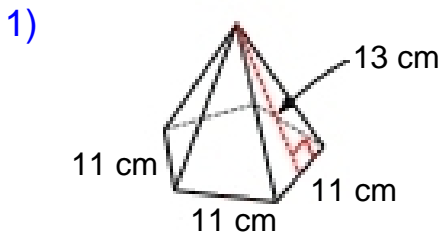
Score : \_\_\_\_\_

Teacher : \_\_\_\_\_

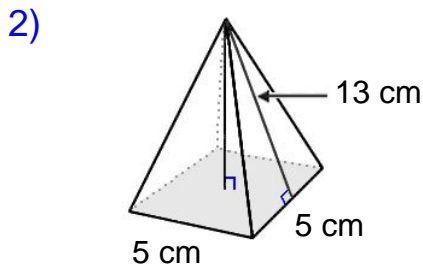
Date : \_\_\_\_\_

### Surface Area of Pyramids and Cones

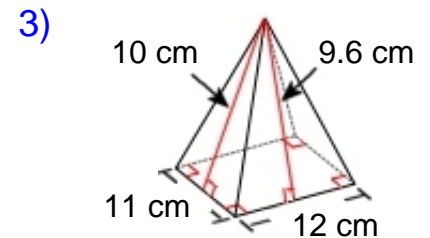
Find the surface area of each figure. Round answers to the nearest hundredth, if necessary.



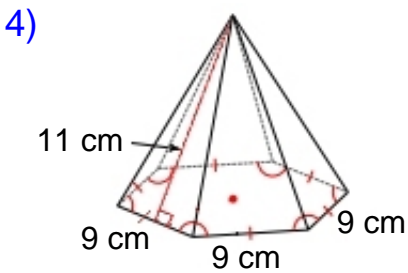
Surface Area: \_\_\_\_\_



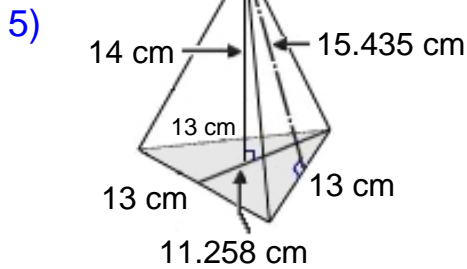
Surface Area: \_\_\_\_\_



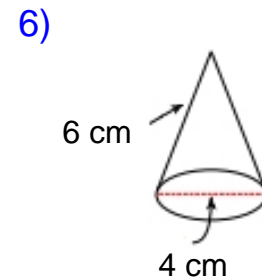
Surface Area: \_\_\_\_\_



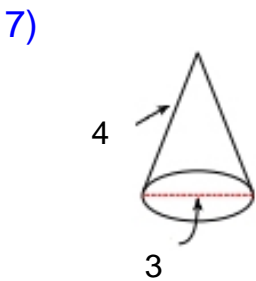
Surface Area: \_\_\_\_\_



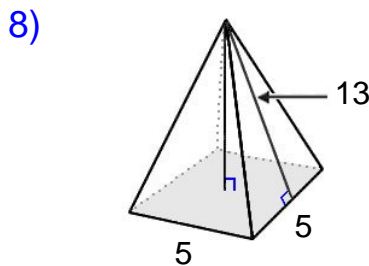
Surface Area: \_\_\_\_\_



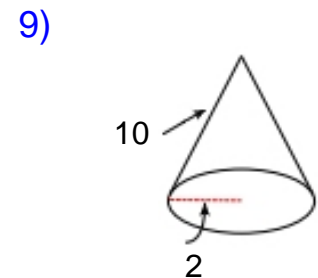
Surface Area: \_\_\_\_\_



Surface Area: \_\_\_\_\_



Surface Area: \_\_\_\_\_



Surface Area: \_\_\_\_\_



Name : \_\_\_\_\_

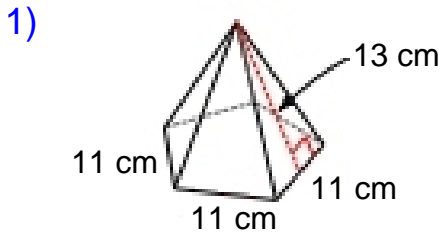
Score : \_\_\_\_\_

Teacher : \_\_\_\_\_

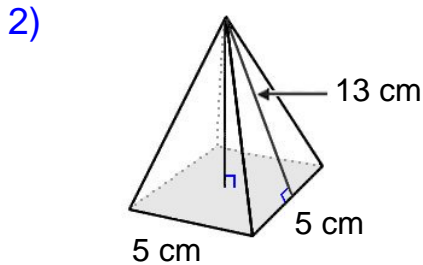
Date : \_\_\_\_\_

### Surface Area of Pyramids and Cones

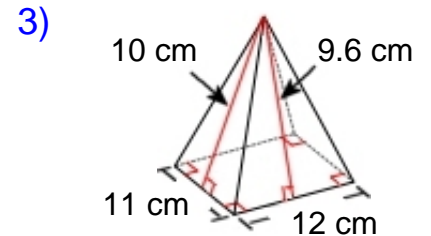
Find the surface area of each figure. Round answers to the nearest hundredth, if necessary.



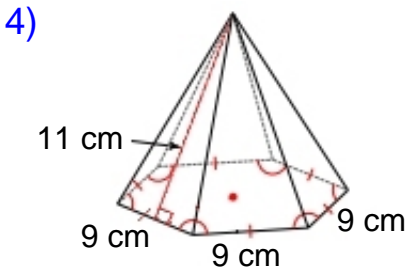
Surface Area: 565.68 cm<sup>2</sup>



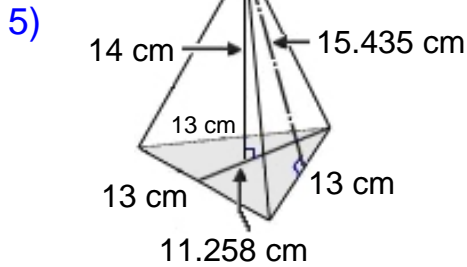
Surface Area: 155.00 cm<sup>2</sup>



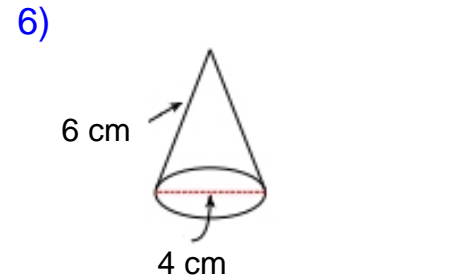
Surface Area: 357.20 cm<sup>2</sup>



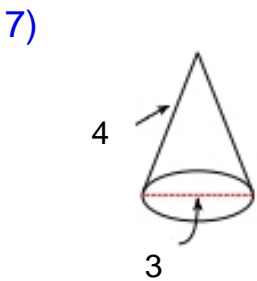
Surface Area: 507.44 cm<sup>2</sup>



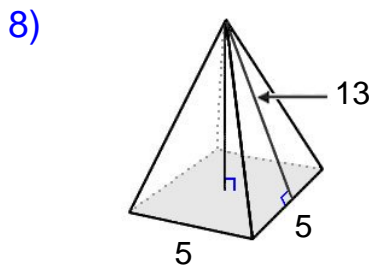
Surface Area: 374.16 cm<sup>2</sup>



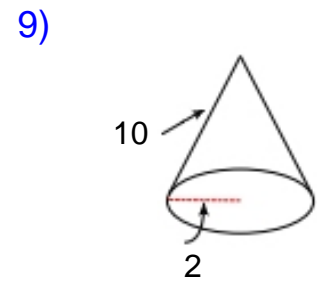
Surface Area: 50.27 cm<sup>2</sup>



Surface Area: 25.92 cm<sup>2</sup>



Surface Area: 155.00 cm<sup>2</sup>



Surface Area: 75.40 cm<sup>2</sup>

