

Name : _____


Score : _____

Teacher : _____

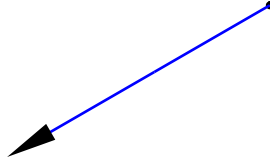
Date : _____

Identify the Lines, Rays or Line Segments.

1)




2)




3)



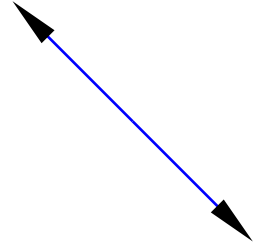
4)




5)




6)




7)



8)



9)





Name : _____


Score : _____

Teacher : _____

Date : _____


Identify the Lines, Rays or Line Segments.

1)



Ray

2)




Ray

3)




Line

4)



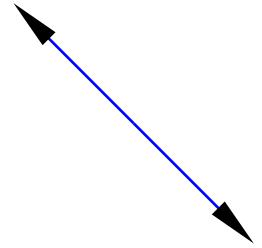
Ray

5)




Line Segment

6)




Line

7)




Line

8)



Ray

9)



Line Segment

