

Name : _____

Score : _____

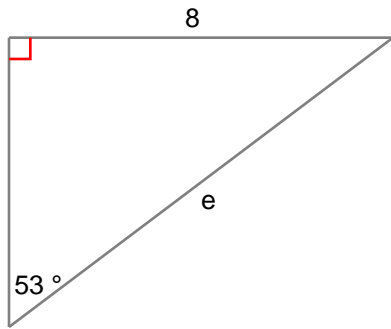
Teacher : _____

Date : _____

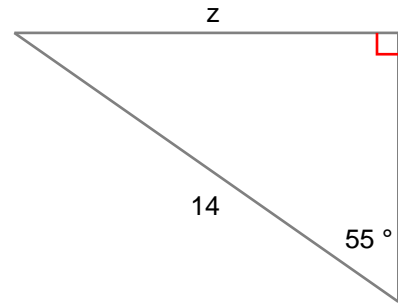
Solving Right Triangles

Find the side indicated by the variable. Round to the nearest tenth.

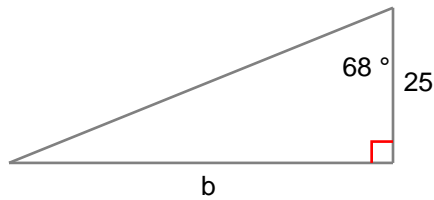
1) $e =$ _____



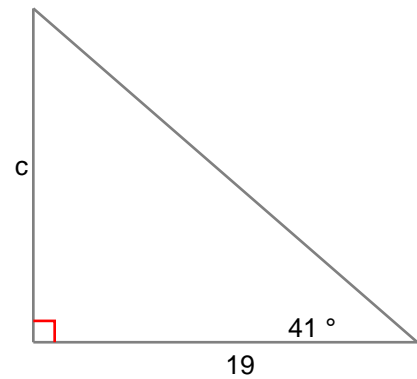
2) $z =$ _____



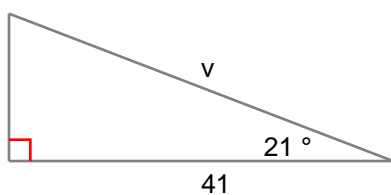
3) $b =$ _____



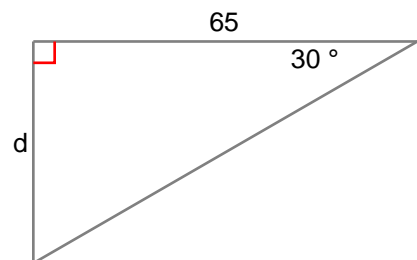
4) $c =$ _____



5) $v =$ _____



6) $d =$ _____



Name : _____

Score : _____

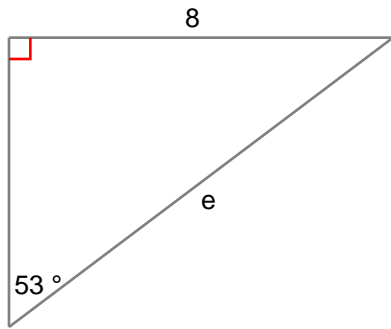
Teacher : _____

Date : _____

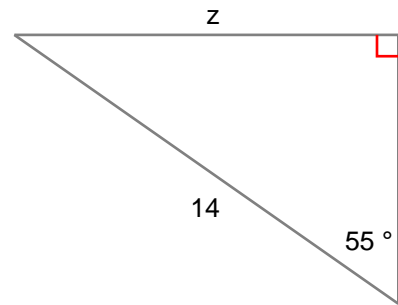
Solving Right Triangles

Find the side indicated by the variable. Round to the nearest tenth.

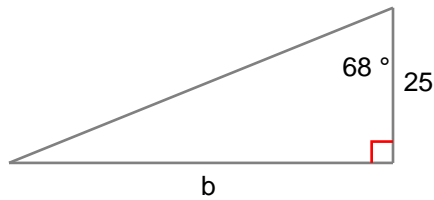
1) $e = \underline{10}$



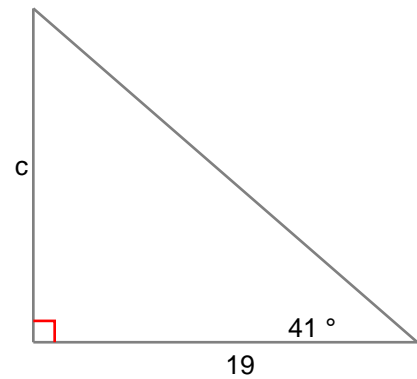
2) $z = \underline{11.5}$



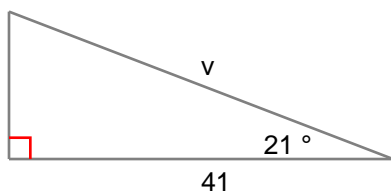
3) $b = \underline{61.9}$



4) $c = \underline{16.5}$



5) $v = \underline{43.9}$



6) $d = \underline{37.5}$

