





Name : \_\_\_\_\_

# Weekend Sale

Sheet 1

Lisa is a small-time entrepreneur; she sells burger, pizza, hot dog and fried chicken. The tally chart shows how many of each kind were sold during the weekends. Use the information from the tally chart to answer the questions.

Food Items	Tally Marks
 Burger	
 Pizza	
 Fried Chicken	
 Hot Dog	

1) How many burgers were sold? \_\_\_\_\_

2) Which item was sold the most? \_\_\_\_\_

3) How many more fried chickens were sold than hot dogs? \_\_\_\_\_

4) Which item was sold the least? \_\_\_\_\_

5) How many items were sold in all? \_\_\_\_\_





Name : \_\_\_\_\_

**Answer Key**

# Weekend Sale

Sheet 1

Lisa is a small-time entrepreneur; she sells burger, pizza, hot dog and fried chicken. The tally chart shows how many of each kind were sold during the weekends. Use the information from the tally chart to answer the questions.

Food Items		Tally Marks
 Burger		
 Pizza		
 Fried Chicken		
 Hot Dog		

1) How many burgers were sold? 16

2) Which item was sold the most? pizza

3) How many more fried chickens were sold than hot dogs? 4

4) Which item was sold the least? hot dog

5) How many items were sold in all? 60