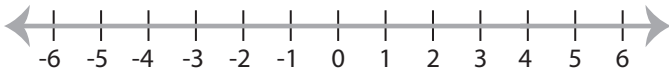


Solving & Graphing Inequalities

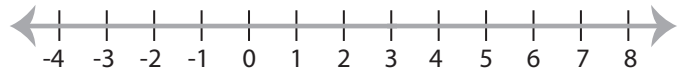
ES2

Solve each inequality and graph the solution.

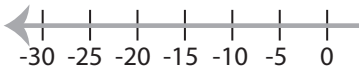
1) $3x - 10 < 2$



2) $5x + 9 \geq 24$

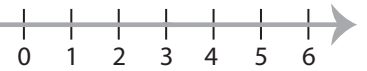


3) $\frac{x-4}{2} > 3$



PREVIEW

Access the largest collection of
worksheets for just **\$19.95** per year!



Members, please
log in to
download this
worksheet.

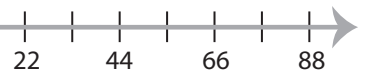
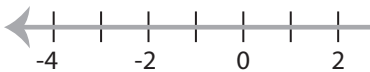
Log in

Not a member?
Please sign up to
gain complete
access.

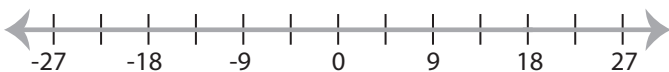
Sign up

www.mathworksheets4kids.com

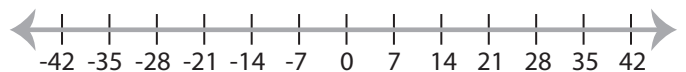
5) $9x - 1 > 17$



7) $\frac{x}{6} + 2 \leq 5$



8) $4 + 2x < 18$



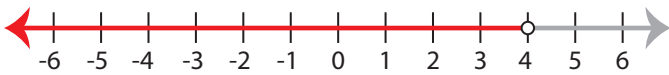
Solving & Graphing Inequalities

ES2

Solve each inequality and graph the solution.

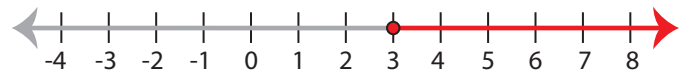
1) $3x - 10 < 2$

$x < 4$



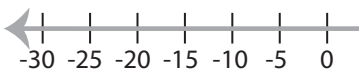
2) $5x + 9 \geq 24$

$x \geq 3$



3) $\frac{x-4}{2} > 3$

$x > 10$



PREVIEW

Access the largest collection of
worksheets for just **\$19.95** per year!

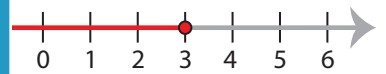
Members, please
log in to
download this
worksheet.

Log in

Not a member?
Please sign up to
gain complete
access.

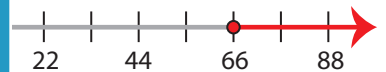
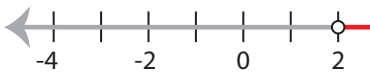
Sign up

www.mathworksheets4kids.com



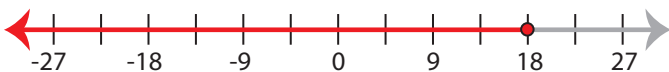
5) $9x - 1 > 17$

$x > 2$



7) $\frac{x}{6} + 2 \leq 5$

$x \leq 18$



8) $4 + 2x < 18$

$x < 7$

