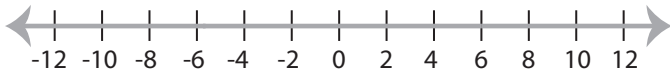


## Solving & Graphing Inequalities

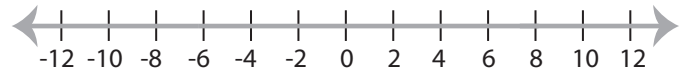
ES2

Solve each inequality and graph the solution.

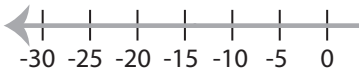
1)  $9x \leq 54$



2)  $x + 1 < 9$

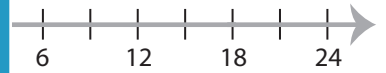


3)  $x - 7 > 8$



**PREVIEW**

Access the largest collection of  
worksheets for just **\$19.95** per year!



Members, please  
log in to  
download this  
worksheet.

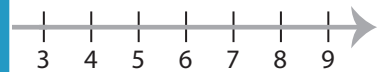
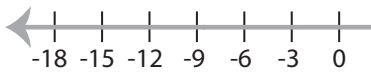
Log in

Not a member?  
Please sign up to  
gain complete  
access.

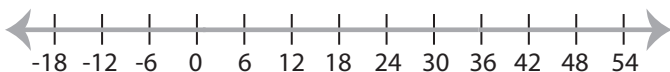
Sign up

[www.mathworksheets4kids.com](http://www.mathworksheets4kids.com)

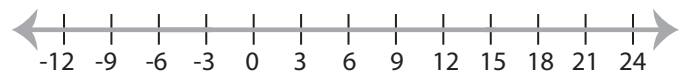
5)  $12 + x \geq 24$



7)  $\frac{x}{9} > 4$



8)  $x - 2 \leq 13$



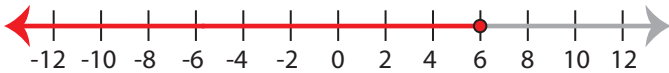
**Solving & Graphing Inequalities**

ES2

Solve each inequality and graph the solution.

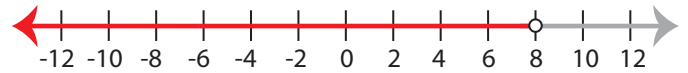
1)  $9x \leq 54$

$x \leq 6$



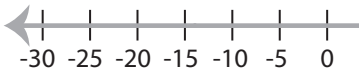
2)  $x + 1 < 9$

$x < 8$



3)  $x - 7 > 8$

$x > 15$



**PREVIEW**

Access the largest collection of  
worksheets for just **\$19.95** per year!

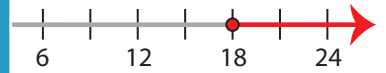
Members, please  
log in to  
download this  
worksheet.

**Log in**

Not a member?  
Please sign up to  
gain complete  
access.

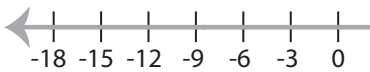
**Sign up**

[www.mathworksheets4kids.com](http://www.mathworksheets4kids.com)



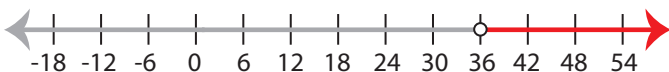
5)  $12 + x \geq 24$

$x \geq 12$



7)  $\frac{x}{9} > 4$

$x > 36$



8)  $x - 2 \leq 13$

$x \leq 15$

