

Identifying Graphs

ES2

Choose the correct graph that best describes the solution for each inequality.

1) $\frac{x-1}{2} \geq 5$

- a)
- b)
- c)
- d)

2) $18 + 3x < 9$

- a)
- b)
- c)
- d)

3) $8x - 4 > 12$

- a)
- b)
- c)
- d)

- a)
- b)
- c)
- d)

5) $4x + 29 \geq 5$

- a)
- b)
- c)
- d)

- a)
- b)
- c)
- d)

PREVIEW

Access the largest collection of
worksheets for just **\$19.95** per year!

Members, please
log in to
download this
worksheet.

Log in

Not a member?
Please sign up to
gain complete
access.

Sign up

www.mathworksheets4kids.com

7) $\frac{x}{3} + 19 > 22$

- a)
- b)
- c)
- d)

8) $9x - 11 \leq 25$

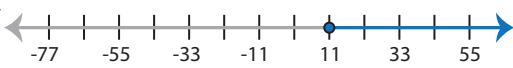
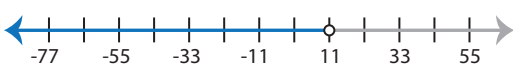
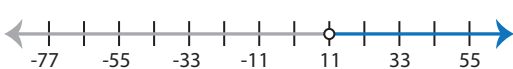
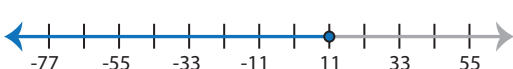
- a)
- b)
- c)
- d)

Identifying Graphs

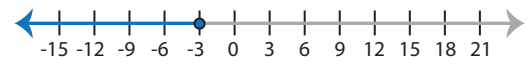
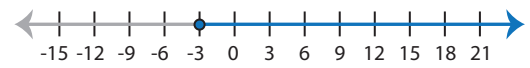
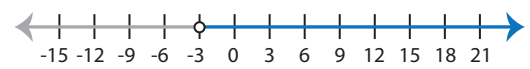
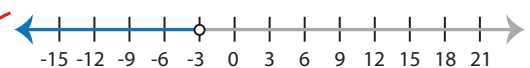
ES2

Choose the correct graph that best describes the solution for each inequality.

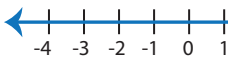
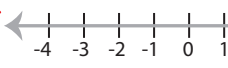
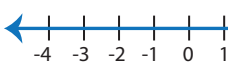
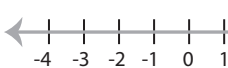
1) $\frac{x-1}{2} \geq 5$

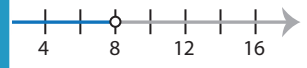
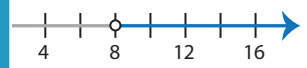
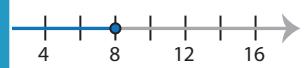
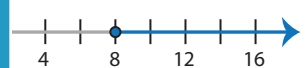
- a) 
- b) 
- c) 
- d) 

2) $18 + 3x < 9$

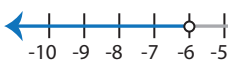
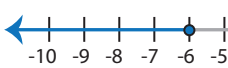
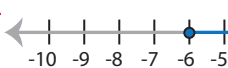
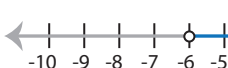
- a) 
- b) 
- c) 
- d) 


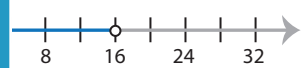
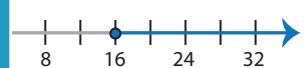
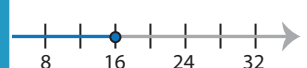
3) $8x - 4 > 12$

- a) 
- b) 
- c) 
- d) 

- a) 
- b) 
- c) 
- d) 

5) $4x + 29 \geq 5$

- a) 
- b) 
- c) 
- d) 

- a) 
- b) 
- c) 
- d) 

PREVIEW

Access the largest collection of
worksheets for just **\$19.95** per year!

Members, please
log in to
download this
worksheet.


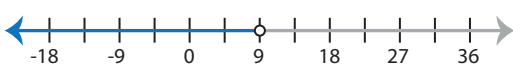

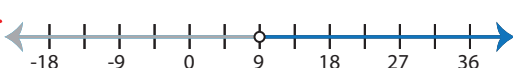
Log in

Not a member?
Please sign up to
gain complete
access.



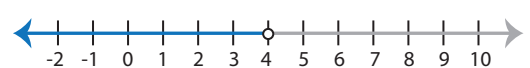
Sign up

www.mathworksheets4kids.com

7) $\frac{x}{3} + 19 > 22$

- a) 
- b) 
- c) 
- d) 

8) $9x - 11 \leq 25$

- a) 
- b) 
- c) 
- d) 