

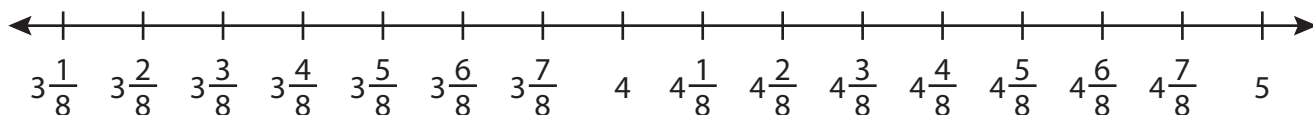
Name : _____

Subtraction using Number Line

Mixed Numbers: S2

Indicate hops on each number line and complete the subtraction sentences.

1) $4\frac{7}{8} - 1\frac{5}{8} =$ _____



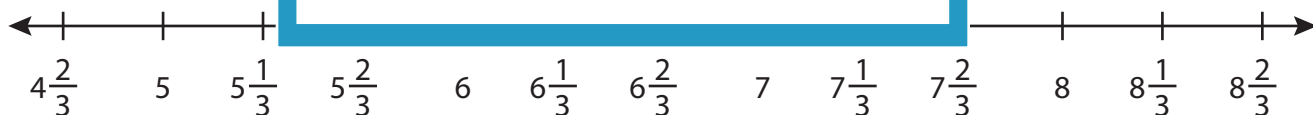
2) $3\frac{1}{4} - 2\frac{1}{4} =$ _____



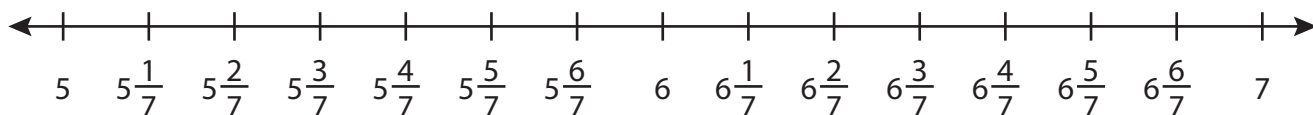
3) $12\frac{2}{6} - 1\frac{4}{6} =$ _____



4) $8\frac{1}{3} - 3\frac{2}{3} =$ _____



5) $6\frac{5}{7} - 1\frac{3}{7} =$ _____



PREVIEW

Gain complete access to the largest collection of worksheets in all subjects!

Members, please log in to download this worksheet.

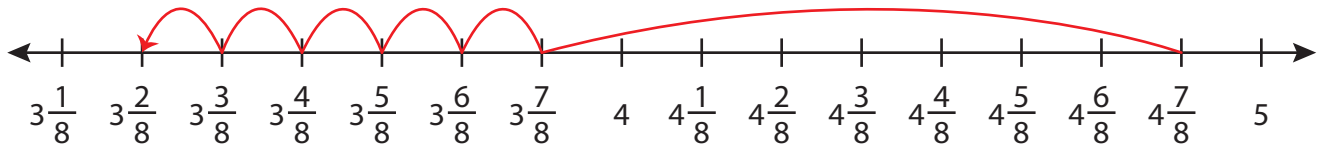
Not a member? Please sign up to gain complete access.

www.mathworksheets4kids.com

Subtraction using Number Line

Indicate hops on each number line and complete the subtraction sentences.

$$1) \quad 4\frac{7}{8} - 1\frac{5}{8} = \underline{3\frac{2}{8} = 3\frac{1}{4}}$$



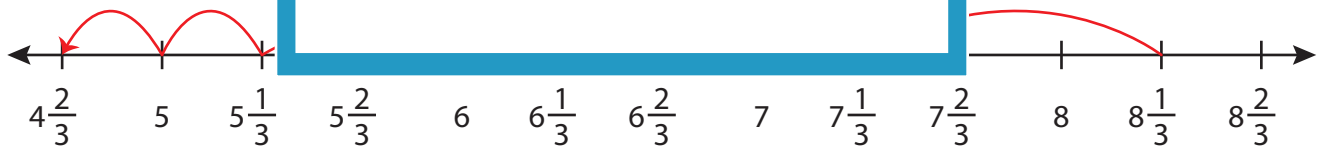
$$2) \quad 3\frac{1}{4} - 2\frac{1}{4} =$$



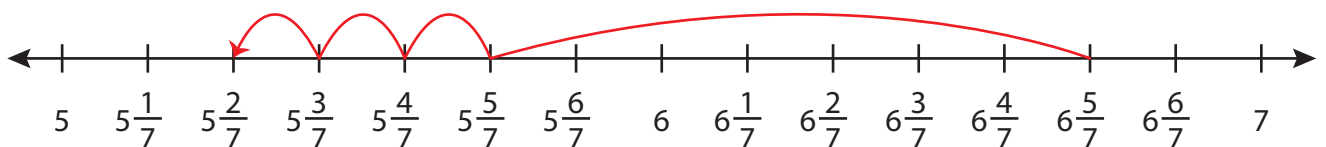
$$3) \quad 12\frac{2}{6} - 1\frac{4}{6} =$$



$$4) \quad 8\frac{1}{3} - 3\frac{2}{3} =$$



$$5) \quad 6\frac{5}{7} - 1\frac{3}{7} = \underline{5\frac{2}{7}}$$



PREVIEW

Gain complete access to the largest
collection of worksheets in all subjects!

Members, please
log in to
download this
worksheet.

Not a member?
Please sign up to
gain complete
access.

www.mathworksheets4kids.com