
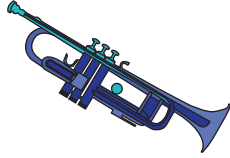





## Bar Graph - Musical Instruments

Happy Rhythms Music Store tracks the data on their sales of musical instruments. Draw a bar graph to represent the data and answer the questions.

Guitar	Trumpet	Drum	Saxophone	Piano
				
630	720	405	540	405

# PREVIEW

Gain complete access to the largest collection of worksheets in all subjects!

Members, please log in to download this worksheet.

Not a member? Please sign up to gain complete access.


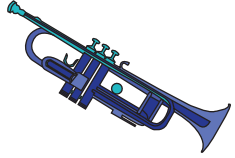
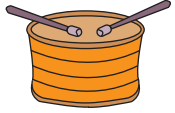


[www.mathworksheets4kids.com](http://www.mathworksheets4kids.com)

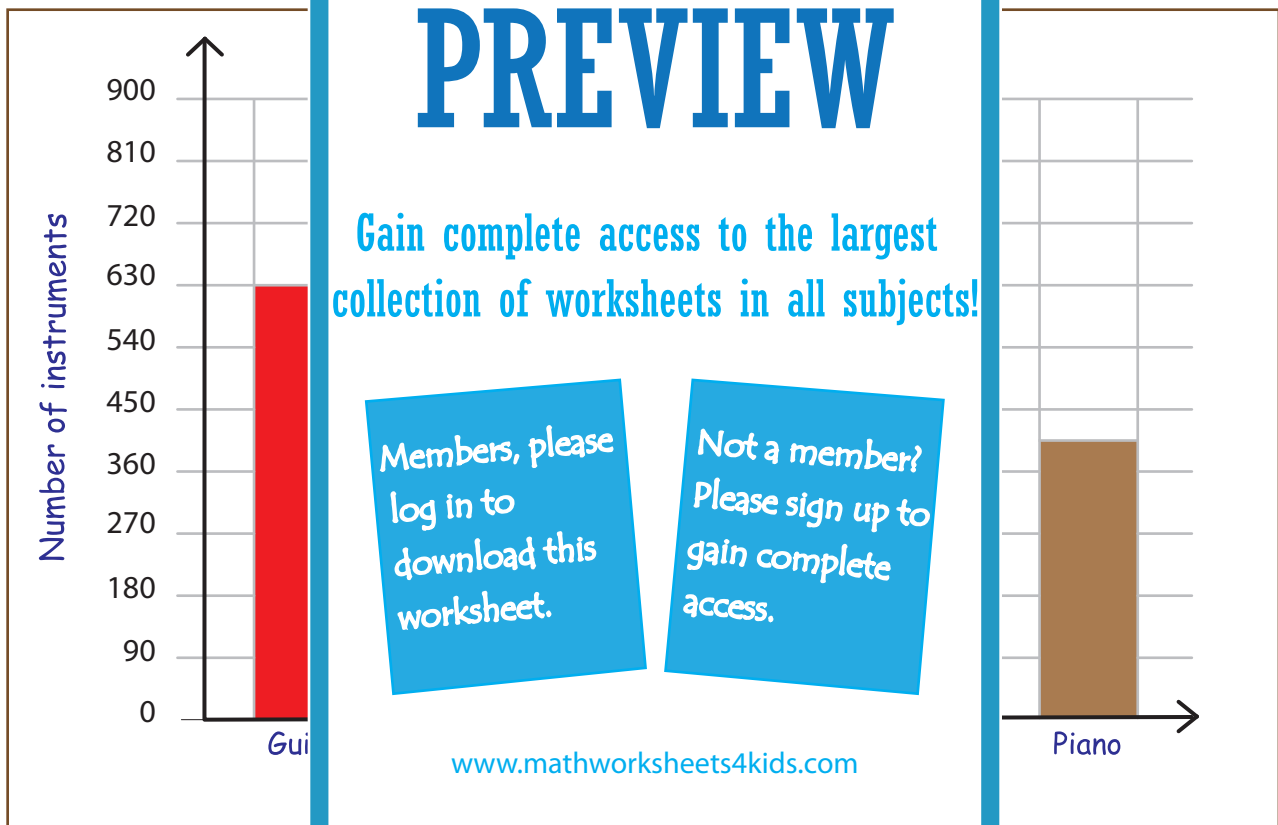
- 1) How many more guitars than drums were sold? \_\_\_\_\_
- 2) Which two instruments have equal sales? \_\_\_\_\_
- 3) What is the difference on sales between trumpet and saxophone? \_\_\_\_\_
- 4) How many instruments were sold in all? \_\_\_\_\_

**Bar Graph - Musical Instruments**

Sheet 1

Happy Rhythms Music Store tracks the data on their sales of musical instruments.  
Draw a bar graph to represent the data and answer the questions.

Guitar	Trumpet	Drum	Saxophone	Piano
				
<b>630</b>	<b>720</b>	<b>405</b>	<b>540</b>	<b>405</b>



1) How many more guitars than drums were sold?

225

2) Which two instruments have equal sales?

Piano and Drum

3) What is the difference on sales between trumpet and saxophone?

180

4) How many instruments were sold in all?

2700