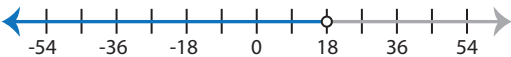
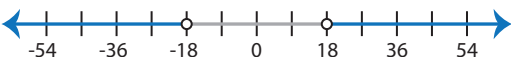
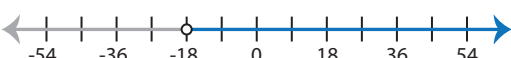



Identifying Graphs

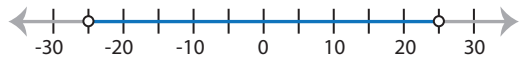

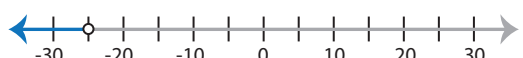
Basic: S3

Choose the correct graph that best describes the solution for each inequality.


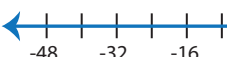
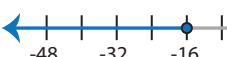
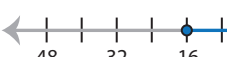
1) $|x| < 18$

- a) 
- b) 
- c) 
- d) 

2) $-|x| > 25$

- a) 
- b) 
- c) 
- d) No solution

3) $|x| \leq 16$

- a) 
- b) 
- c) 
- d) 

PREVIEW

Access the largest collection of
worksheets for just **\$19.95** per year!

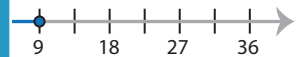
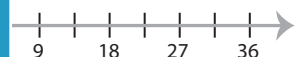
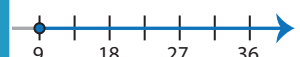

Members, please
log in to
download this
worksheet.

Log in


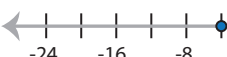
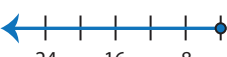
Not a member?
Please sign up to
gain complete
access.

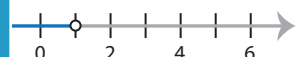



Sign up

www.mathworksheets4kids.com

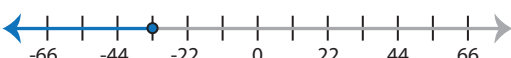
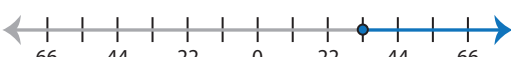
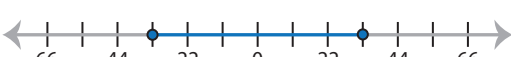

- 
- 
- 
- 

5) $|-x| \leq 4$


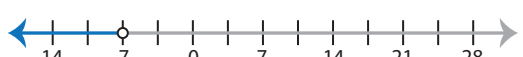

- a) 
- b) 
- c) 
- d) No solution

- 
- 
- 
- 

7) $|-x| \geq 33$

- a) 
- b) 
- c) 
- d) 

8) $|x| < -7$

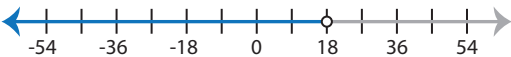
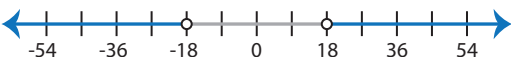
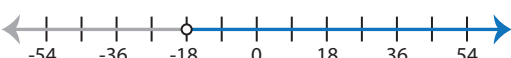
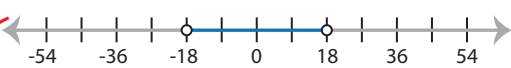
- a) 
- b) 
- c) 
- d) No solution

Identifying Graphs

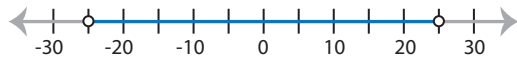
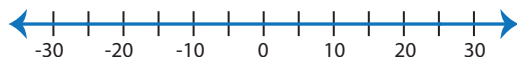

Basic: S3

Choose the correct graph that best describes the solution for each inequality.


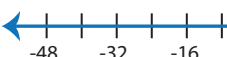
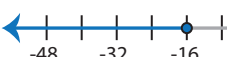
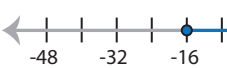
1) $|x| < 18$

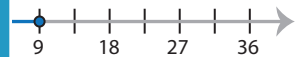
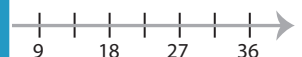
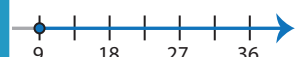
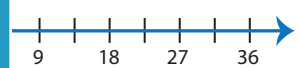
- a) 
- b) 
- c) 
- d) 

2) $-|x| > 25$


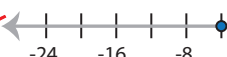
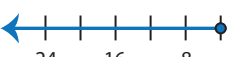
- a) 
- b) 
- c) 
- d) No solution

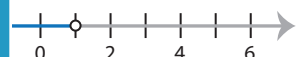


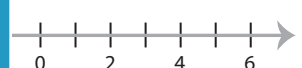
3) $|x| \leq 16$

- a) 
- b) 
- c) 
- d) 

- 
- 
- 
- 

5) $|-x| \leq 4$

- a) 
- b) 
- c) 
- d) No solution

- 
- 
- 
- 

PREVIEW

Access the largest collection of worksheets for just **\$19.95** per year!

Members, please log in to download this worksheet.

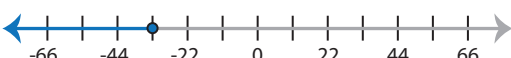
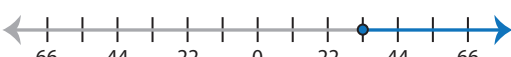
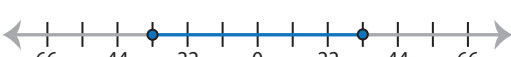
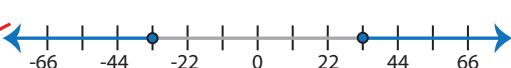
Log in

Not a member? Please sign up to gain complete access.


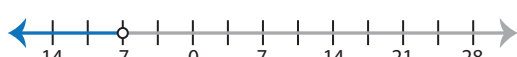
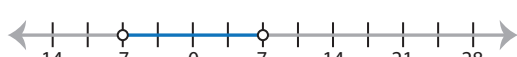
Sign up

www.mathworksheets4kids.com

7) $|-x| \geq 33$

- a) 
- b) 
- c) 
- d) 

8) $|x| < -7$

- a) 
- b) 
- c) 
- d) No solution