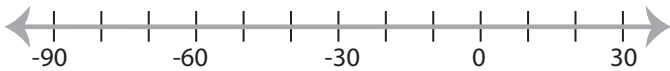


Solving & Graphing Inequalities

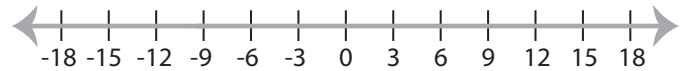
DS3

Solve each inequality and graph the solution.

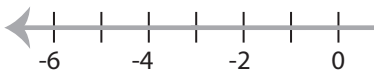
1) $-8 < x + 12$



2) $\frac{x}{9} \leq -1$



3) $-21 \geq 7x$



PREVIEW

Access the largest collection of
worksheets for just **\$19.95** per year!

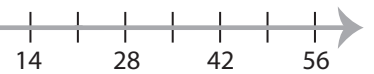
Members, please
log in to
download this
worksheet.

Log in

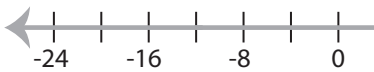
Not a member?
Please sign up to
gain complete
access.

Sign up

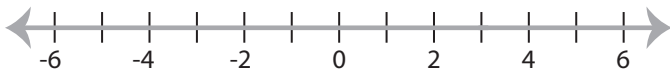
www.mathworksheets4kids.com



5) $-3 \leq \frac{x}{4}$



7) $x - 1 > 2$



8) $-32 \leq 8x$



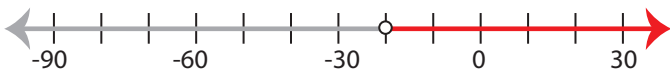
Solving & Graphing Inequalities

DS3

Solve each inequality and graph the solution.

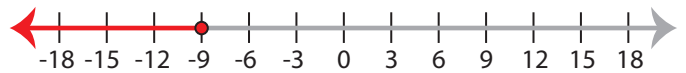
1) $-8 < x + 12$

$x > -20$



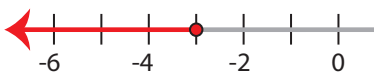
2) $\frac{x}{9} \leq -1$

$x \leq -9$



3) $-21 \geq 7x$

$x \leq -3$



PREVIEW

Access the largest collection of
worksheets for just **\$19.95** per year!

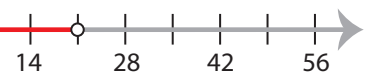
Members, please
log in to
download this
worksheet.

Log in

Not a member?
Please sign up to
gain complete
access.

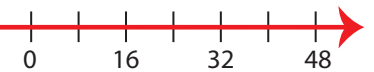
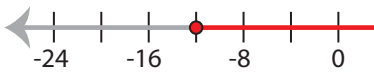
Sign up

www.mathworksheets4kids.com



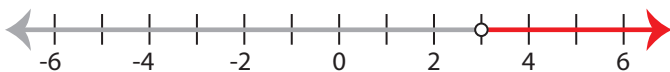
5) $-3 \leq \frac{x}{4}$

$x \geq -12$



7) $x - 1 > 2$

$x > 3$



8) $-32 \leq 8x$

$x \geq -4$

