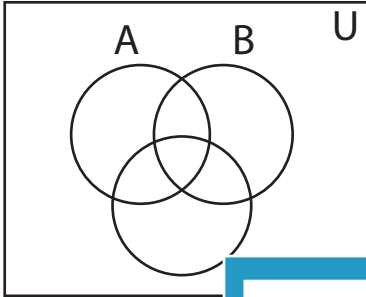


## Shading - Venn Diagram

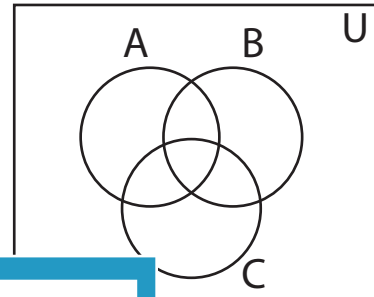
L1S3

Shade the given region.

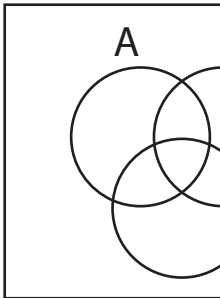
1)  $B \cap C$



2)  $A \cap B'$



3)  $B'$



**PREVIEW**

Access the largest collection of  
worksheets for just **\$19.95** per year!


Members, please  
log in to  
download this  
worksheet.

**Log in**

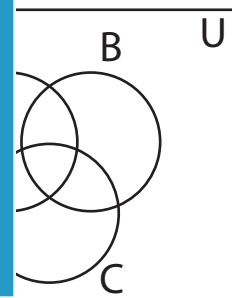
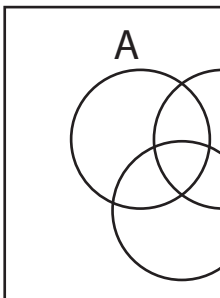
Not a member?  
Please sign up to  
gain complete  
access.

**Sign up**

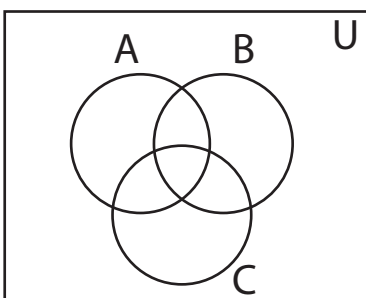
[www.mathworksheets4kids.com](http://www.mathworksheets4kids.com)



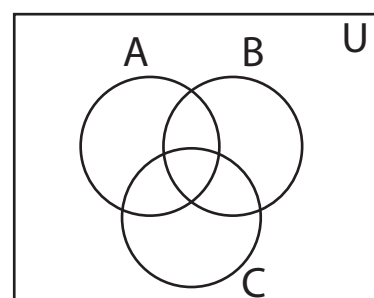
5)  $(A \cup C)'$



7)  $B' \cup C$



8)  $(A \cap B)'$

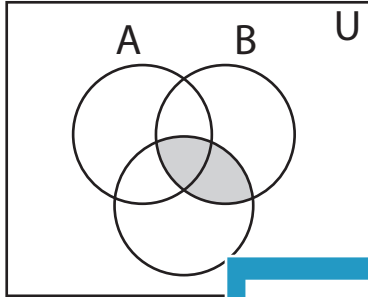


**Answer key****Shading - Venn Diagram**

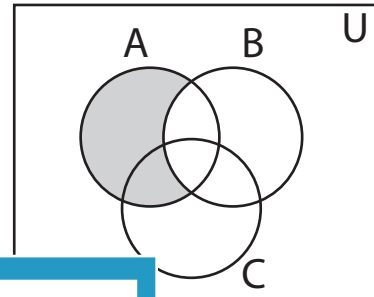
L153

Shade the given region.

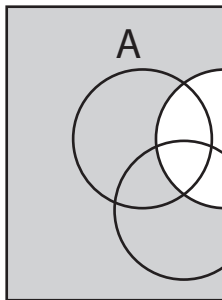
1)  $B \cap C$



2)  $A \cap B'$



3)  $B'$



**PREVIEW**

Access the largest collection of  
worksheets for just **\$19.95** per year!

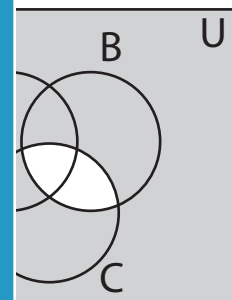
Members, please  
log in to  
download this  
worksheet.

**Log in**

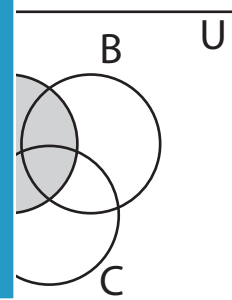
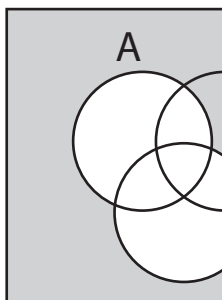
Not a member?  
Please sign up to  
gain complete  
access.

**Sign up**

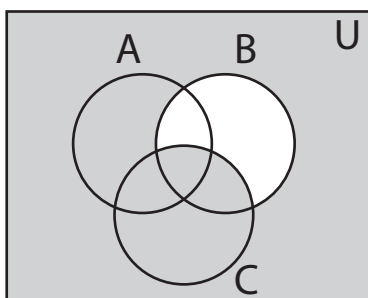
[www.mathworksheets4kids.com](http://www.mathworksheets4kids.com)



5)  $(A \cup C)'$



7)  $B' \cup C$



8)  $(A \cap B)'$

