

Name : \_\_\_\_\_

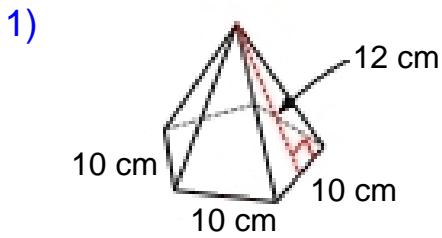
Score : \_\_\_\_\_

Teacher : \_\_\_\_\_

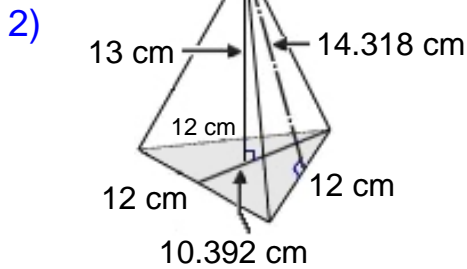
Date : \_\_\_\_\_

### Surface Area of Pyramids and Cones

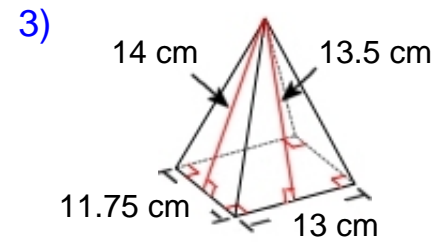
Find the surface area of each figure. Round answers to the nearest hundredth, if necessary.



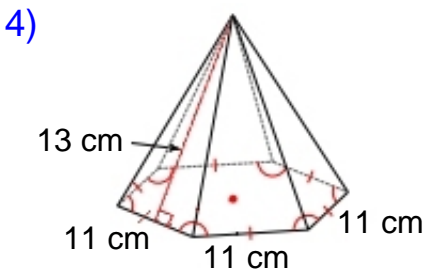
Surface Area: \_\_\_\_\_



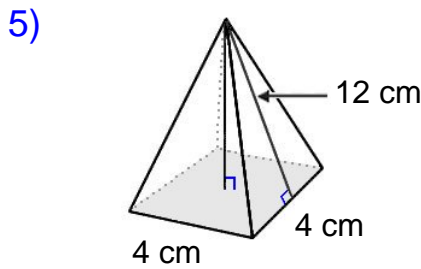
Surface Area: \_\_\_\_\_



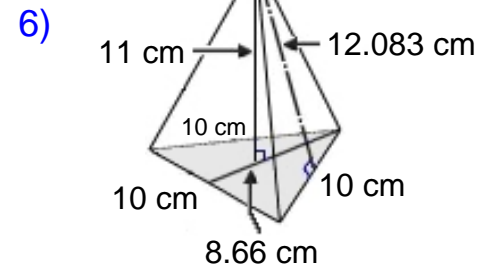
Surface Area: \_\_\_\_\_



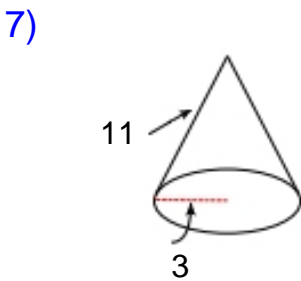
Surface Area: \_\_\_\_\_



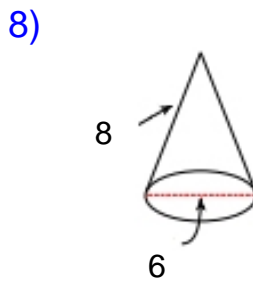
Surface Area: \_\_\_\_\_



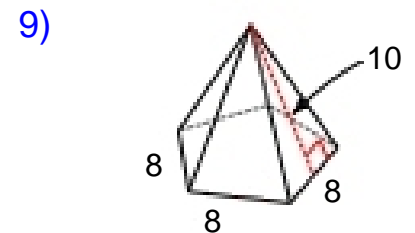
Surface Area: \_\_\_\_\_



Surface Area: \_\_\_\_\_



Surface Area: \_\_\_\_\_



Surface Area: \_\_\_\_\_



Name : \_\_\_\_\_

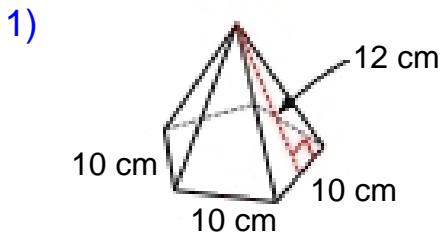
Score : \_\_\_\_\_

Teacher : \_\_\_\_\_

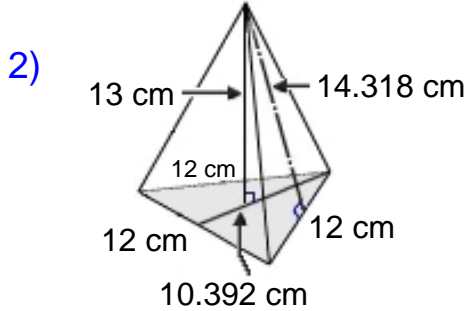
Date : \_\_\_\_\_

### Surface Area of Pyramids and Cones

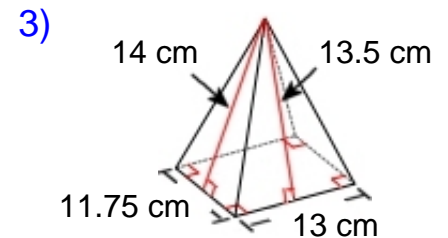
Find the surface area of each figure. Round answers to the nearest hundredth, if necessary.



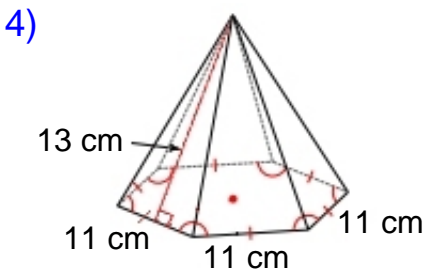
Surface Area: 472.05 cm<sup>2</sup>



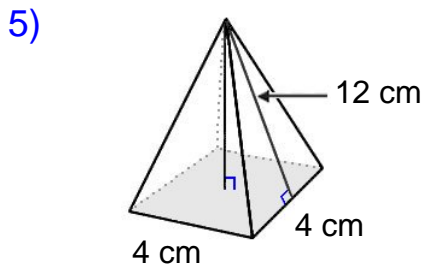
Surface Area: 320.08 cm<sup>2</sup>



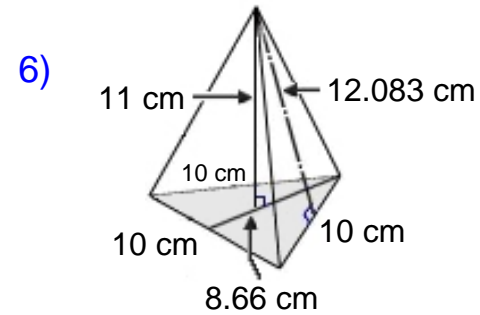
Surface Area: 492.75 cm<sup>2</sup>



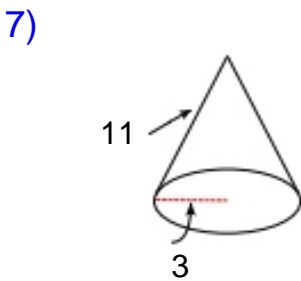
Surface Area: 743.37 cm<sup>2</sup>



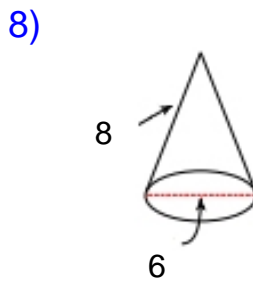
Surface Area: 112.00 cm<sup>2</sup>



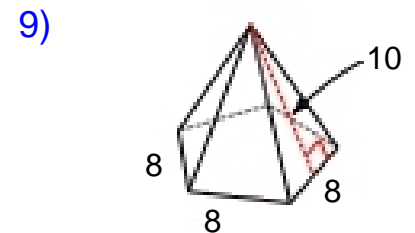
Surface Area: 224.55 cm<sup>2</sup>



Surface Area: 131.95<sup>2</sup>



Surface Area: 103.67<sup>2</sup>



Surface Area: 310.11<sup>2</sup>

