

Name : \_\_\_\_\_

Score : \_\_\_\_\_

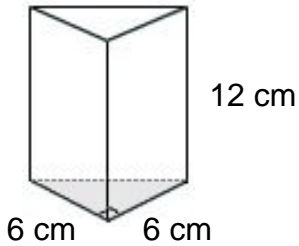
Teacher : \_\_\_\_\_

Date : \_\_\_\_\_

### Volume of Prisms and Cylinders

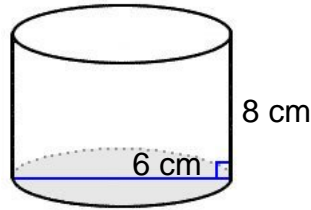
Find the volume for each figure. Round your answers to the nearest hundredth, if necessary.

1)



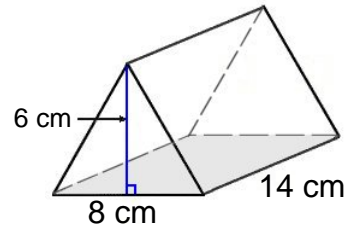
Volume: \_\_\_\_\_

2)



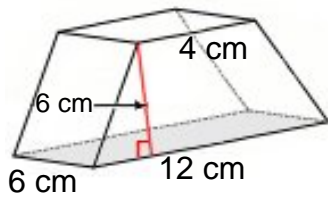
Volume: \_\_\_\_\_

3)



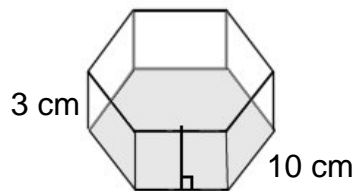
Volume: \_\_\_\_\_

4)



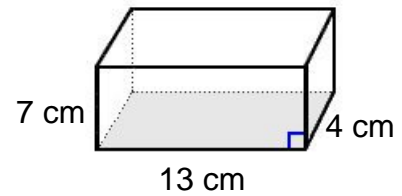
Volume: \_\_\_\_\_

5)



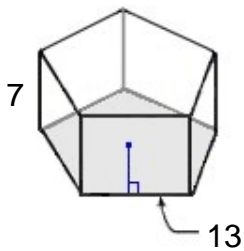
Volume: \_\_\_\_\_

6)



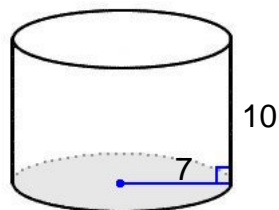
Volume: \_\_\_\_\_

7)



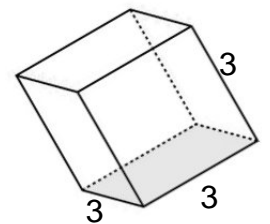
Volume: \_\_\_\_\_

8)



Volume: \_\_\_\_\_

9)



Volume: \_\_\_\_\_



Name : \_\_\_\_\_

Score : \_\_\_\_\_

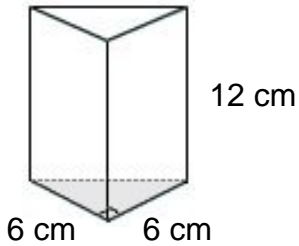
Teacher : \_\_\_\_\_

Date : \_\_\_\_\_

### Volume of Prisms and Cylinders

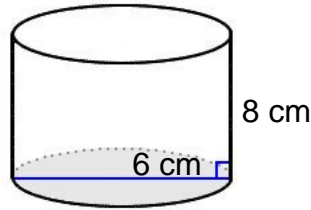
Find the volume for each figure. Round your answers to the nearest hundredth, if necessary.

1)



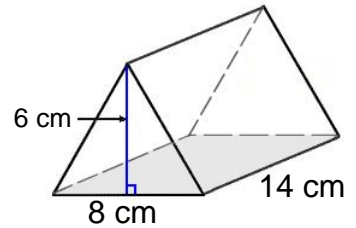
Volume: 216.00 cm<sup>3</sup>

2)



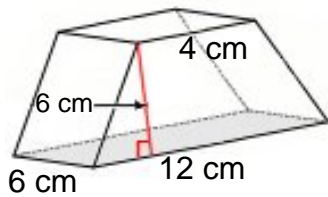
Volume: 226.19 cm<sup>3</sup>

3)



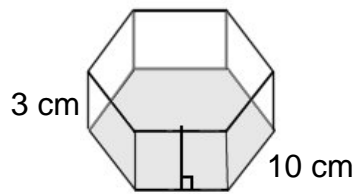
Volume: 336.00 cm<sup>3</sup>

4)



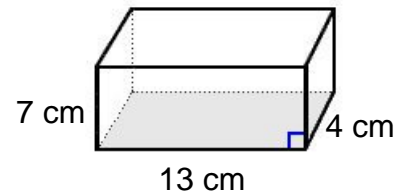
Volume: 288.00 cm<sup>3</sup>

5)



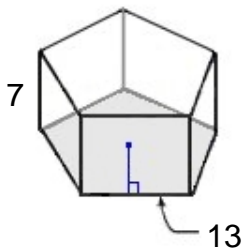
Volume: 779.42 cm<sup>3</sup>

6)



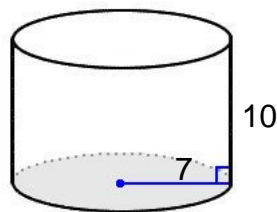
Volume: 364.00 cm<sup>3</sup>

7)



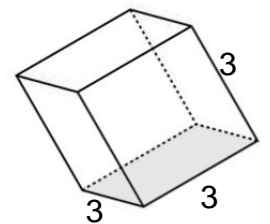
Volume: 2035.32 cm<sup>3</sup>

8)



Volume: 1539.38 cm<sup>3</sup>

9)



Volume: 27.00 cm<sup>3</sup>

