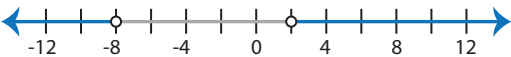

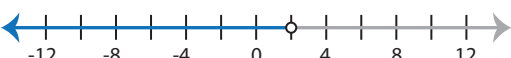
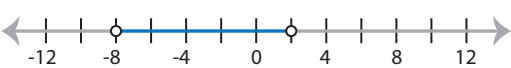


Identifying Graphs

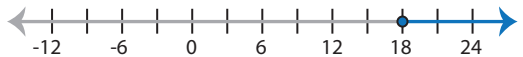

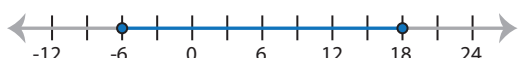

Two-step: S1

Choose the correct graph that best describes the solution for each inequality.




1) $|3x + 9| < 15$

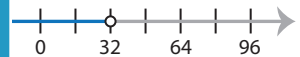
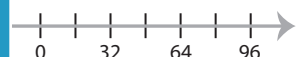

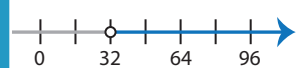
- a) 
- b) 
- c) 
- d) 

2) $\frac{|x - 6|}{4} \geq 3$

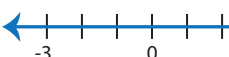


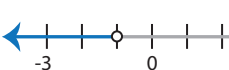
- a) 
- b) 
- c) 
- d) 



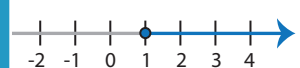
3) $|x - 2| - 5 \leq 1$

- a) 
- b) 
- c) 
- d) No solution

- 
- 
- 
- 

5) $|2x - 3| < 5$

- a) 
- b) 
- c) 
- d) 

- 
- 
- 

PREVIEW

Access the largest collection of
worksheets for just **\$19.95** per year!

Members, please
log in to
download this
worksheet.

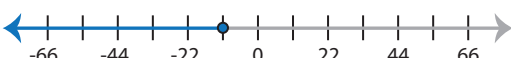
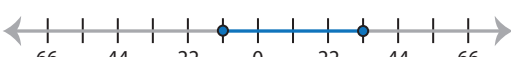
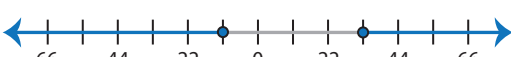

Log in

Not a member?
Please sign up to
gain complete
access.

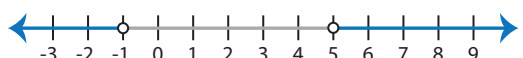
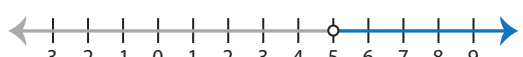
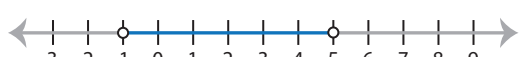

Sign up

www.mathworksheets4kids.com

7) $14 + |x - 11| \leq 36$

- a) 
- b) 
- c) 
- d) 

8) $|8x - 16| > 24$

- a) 
- b) 
- c) 
- d) 

Identifying Graphs

Two-step: S1

Choose the correct graph that best describes the solution for each inequality.

1) $|3x + 9| < 15$

- a)
- b)
- c)
- d)**

2) $\frac{|x - 6|}{4} \geq 3$

- a)
- b)**
- c)
- d)

3) $|x - 2| - 5 \leq 1$

- a)
- b)
- c)**
- d) No solution

-
-
-
-

5) $|2x - 3| < 5$

- a)
- b)
- c)**
- d)

-
-
-

PREVIEW

Access the largest collection of worksheets for just **\$19.95** per year!

Members, please log in to download this worksheet.

Log in

Not a member? Please sign up to gain complete access.

Sign up

www.mathworksheets4kids.com

7) $14 + |x - 11| \leq 36$

- a)
- b)**
- c)
- d)

8) $|8x - 16| > 24$

- a)**
- b)
- c)
- d)